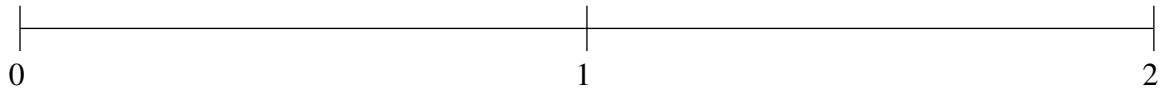


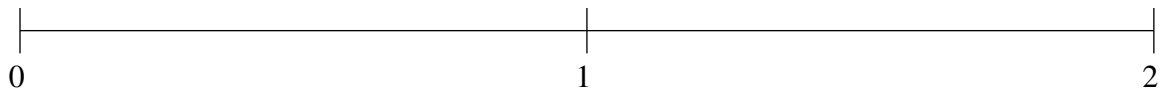
Ordenar Fracciones (C)

Ordene cada conjunto de fracciones usando la recta numérica.

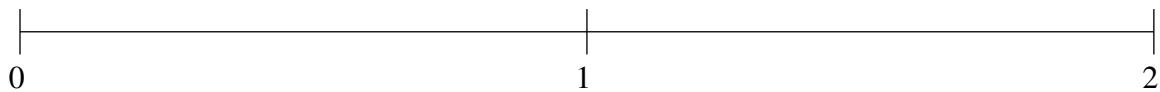
$$1\frac{1}{6}, 1\frac{3}{4}, \frac{1}{2}, 1\frac{1}{2}, \frac{5}{6}$$



$$1\frac{3}{4}, \frac{3}{8}, 1\frac{1}{6}, \frac{3}{4}, 1\frac{1}{2}$$



$$\frac{3}{4}, \frac{5}{24}, 1\frac{1}{2}, \frac{1}{2}, 1\frac{1}{4}$$

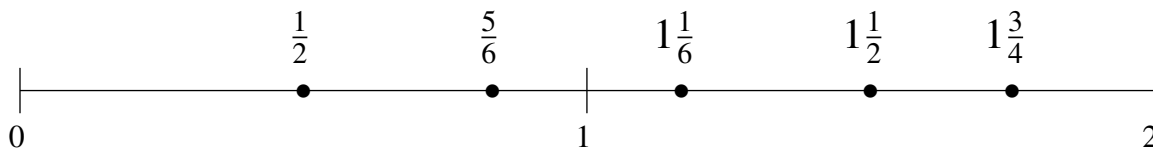


Ordenar Fracciones (C) Respuestas

Ordene cada conjunto de fracciones usando la recta numérica.

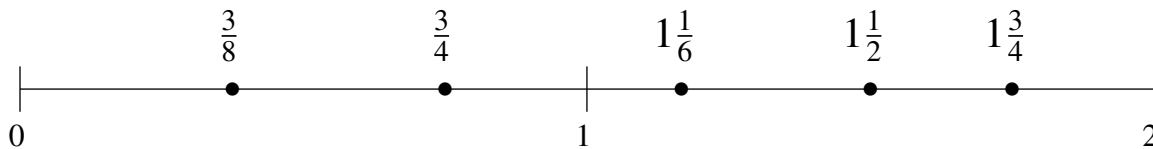
$$1\frac{1}{6}, 1\frac{3}{4}, \frac{1}{2}, 1\frac{1}{2}, \frac{5}{6}$$

$$\frac{1}{2}, \frac{5}{6}, 1\frac{1}{6}, 1\frac{1}{2}, 1\frac{3}{4}$$



$$1\frac{3}{4}, \frac{3}{8}, 1\frac{1}{6}, \frac{3}{4}, 1\frac{1}{2}$$

$$\frac{3}{8}, \frac{3}{4}, 1\frac{1}{6}, 1\frac{1}{2}, 1\frac{3}{4}$$



$$\frac{3}{4}, \frac{5}{24}, 1\frac{1}{2}, \frac{1}{2}, 1\frac{1}{4}$$

$$\frac{5}{24}, \frac{1}{2}, \frac{3}{4}, 1\frac{1}{4}, 1\frac{1}{2}$$

