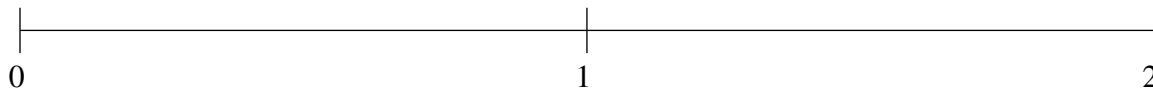


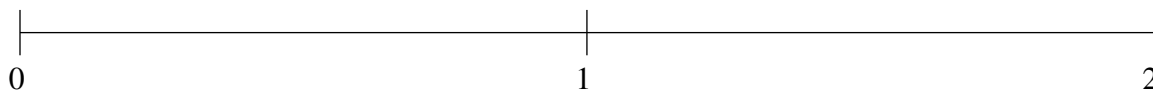
Ordenar Fracciones (D)

Ordene cada conjunto de fracciones usando la recta numérica.

$$\frac{1}{8}, \frac{1}{3}, 1\frac{1}{2}, 1\frac{1}{6}, \frac{5}{6}$$



$$\frac{7}{8}, 1\frac{1}{2}, 1\frac{1}{6}, \frac{1}{3}, 1\frac{3}{4}$$



$$\frac{1}{3}, \frac{1}{12}, \frac{2}{3}, 1\frac{1}{3}, 1\frac{2}{3}$$



Ordenar Fracciones (D) Respuestas

Ordene cada conjunto de fracciones usando la recta numérica.

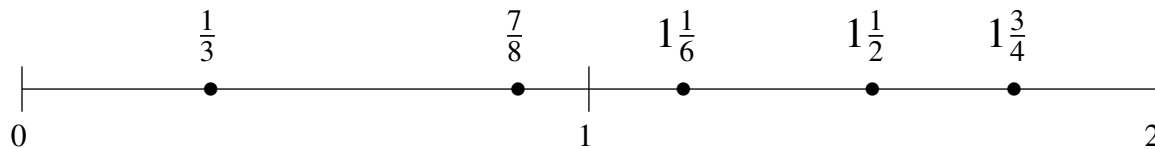
$$\frac{1}{8}, \frac{1}{3}, 1\frac{1}{2}, 1\frac{1}{6}, \frac{5}{6}$$

$$\frac{1}{8}, \frac{1}{3}, \frac{5}{6}, 1\frac{1}{6}, 1\frac{1}{2}$$



$$\frac{7}{8}, 1\frac{1}{2}, 1\frac{1}{6}, \frac{1}{3}, 1\frac{3}{4}$$

$$\frac{1}{3}, \frac{7}{8}, 1\frac{1}{6}, 1\frac{1}{2}, 1\frac{3}{4}$$



$$\frac{1}{3}, \frac{1}{12}, \frac{2}{3}, 1\frac{1}{3}, 1\frac{2}{3}$$

$$\frac{1}{12}, \frac{1}{3}, \frac{2}{3}, 1\frac{1}{3}, 1\frac{2}{3}$$

