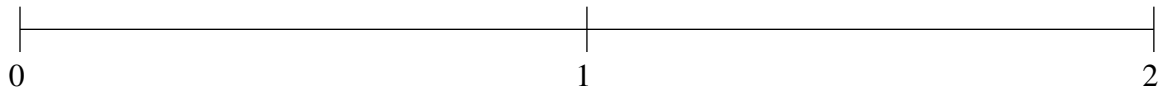


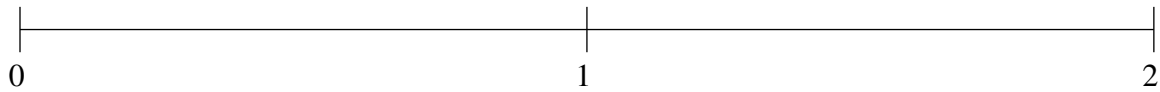
Ordenar Fracciones (E)

Ordene cada conjunto de fracciones usando la recta numérica.

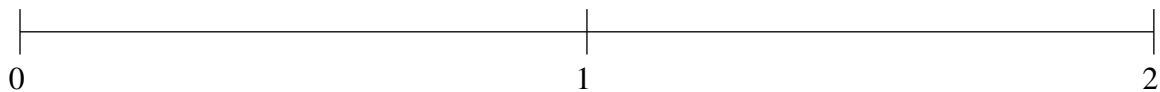
$$\frac{11}{12}, 1\frac{1}{4}, \frac{1}{8}, 1\frac{1}{2}, \frac{1}{2}$$



$$\frac{11}{12}, 1\frac{3}{4}, 1\frac{1}{3}, \frac{1}{4}, \frac{2}{3}$$



$$1\frac{1}{2}, 1\frac{3}{4}, \frac{5}{6}, \frac{1}{4}, 1\frac{1}{4}$$

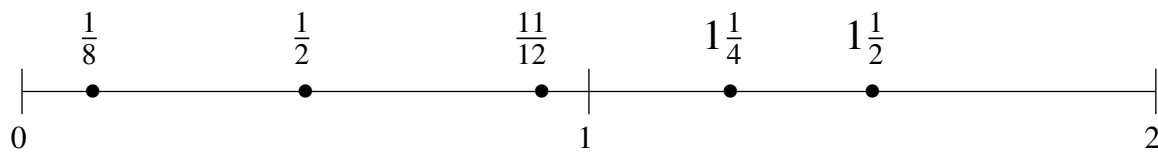


Ordenar Fracciones (E) Respuestas

Ordene cada conjunto de fracciones usando la recta numérica.

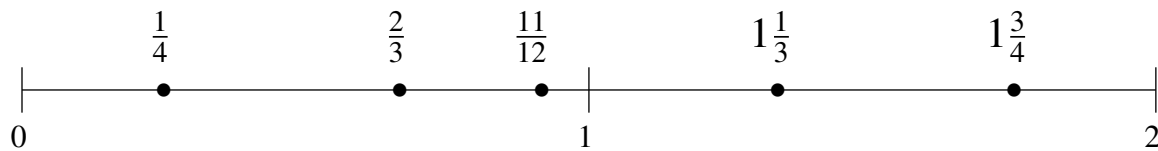
$$\frac{11}{12}, 1\frac{1}{4}, \frac{1}{8}, 1\frac{1}{2}, \frac{1}{2}$$

$$\frac{1}{8}, \frac{1}{2}, \frac{11}{12}, 1\frac{1}{4}, 1\frac{1}{2}$$



$$\frac{11}{12}, 1\frac{3}{4}, 1\frac{1}{3}, \frac{1}{4}, \frac{2}{3}$$

$$\frac{1}{4}, \frac{2}{3}, \frac{11}{12}, 1\frac{1}{3}, 1\frac{3}{4}$$



$$1\frac{1}{2}, 1\frac{3}{4}, \frac{5}{6}, \frac{1}{4}, 1\frac{1}{4}$$

$$\frac{1}{4}, \frac{5}{6}, 1\frac{1}{4}, 1\frac{1}{2}, 1\frac{3}{4}$$

