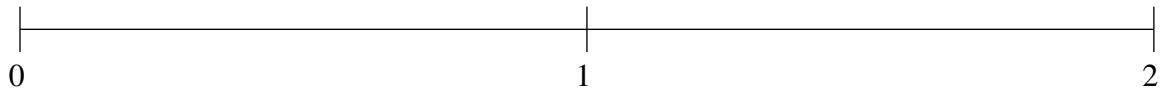


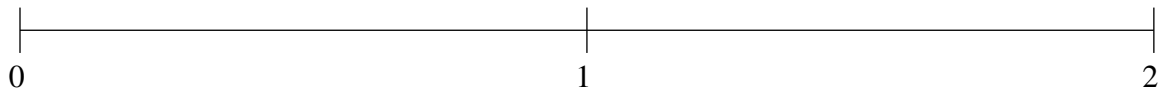
Ordenar Fracciones (F)

Ordene cada conjunto de fracciones usando la recta numérica.

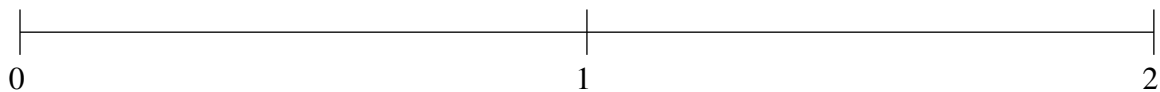
$$\frac{1}{4}, \frac{7}{8}, 1\frac{2}{3}, 1\frac{1}{6}, 1\frac{7}{8}$$



$$\frac{1}{3}, \frac{2}{3}, 1\frac{1}{4}, 1\frac{1}{2}, 1\frac{5}{6}$$



$$1\frac{5}{6}, 1\frac{1}{6}, \frac{1}{3}, 1\frac{1}{2}, \frac{5}{6}$$

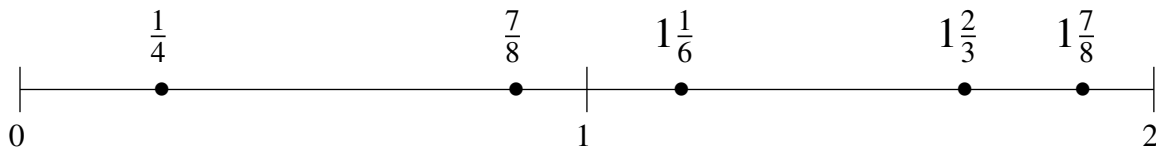


Ordenar Fracciones (F) Respuestas

Ordene cada conjunto de fracciones usando la recta numérica.

$$\frac{1}{4}, \frac{7}{8}, 1\frac{2}{3}, 1\frac{1}{6}, 1\frac{7}{8}$$

$$\frac{1}{4}, \frac{7}{8}, 1\frac{1}{6}, 1\frac{2}{3}, 1\frac{7}{8}$$



$$\frac{1}{3}, \frac{2}{3}, 1\frac{1}{4}, 1\frac{1}{2}, 1\frac{5}{6}$$

$$\frac{1}{3}, \frac{2}{3}, 1\frac{1}{4}, 1\frac{1}{2}, 1\frac{5}{6}$$



$$1\frac{5}{6}, 1\frac{1}{6}, \frac{1}{3}, 1\frac{1}{2}, \frac{5}{6}$$

$$\frac{1}{3}, \frac{5}{6}, 1\frac{1}{6}, 1\frac{1}{2}, 1\frac{5}{6}$$

