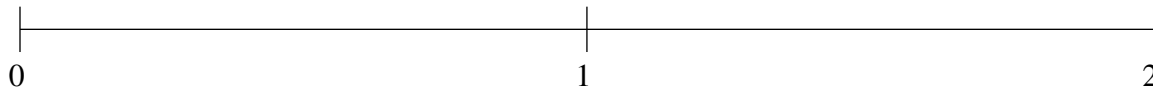


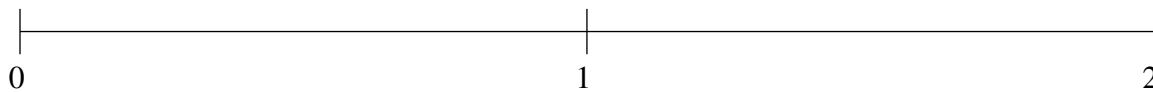
Ordenar Fracciones (G)

Ordene cada conjunto de fracciones usando la recta numérica.

$$\frac{1}{12}, 1\frac{2}{3}, \frac{3}{8}, \frac{2}{3}, 1\frac{1}{6}$$



$$\frac{1}{4}, 1\frac{1}{6}, 1\frac{3}{4}, 1\frac{1}{2}, \frac{2}{3}$$



$$1\frac{5}{6}, \frac{1}{8}, \frac{1}{3}, 1\frac{1}{2}, \frac{2}{3}$$



Ordenar Fracciones (G) Respuestas

Ordene cada conjunto de fracciones usando la recta numérica.

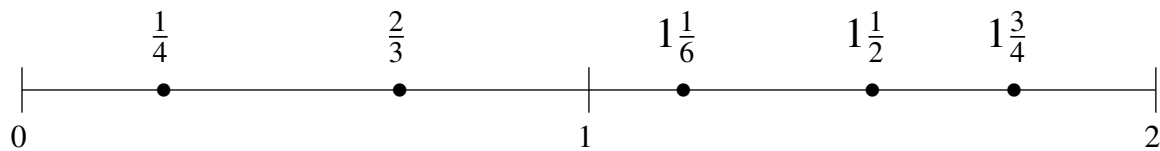
$$\frac{1}{12}, 1\frac{2}{3}, \frac{3}{8}, \frac{2}{3}, 1\frac{1}{6}$$

$$\frac{1}{12}, \frac{3}{8}, \frac{2}{3}, 1\frac{1}{6}, 1\frac{2}{3}$$



$$\frac{1}{4}, 1\frac{1}{6}, 1\frac{3}{4}, 1\frac{1}{2}, \frac{2}{3}$$

$$\frac{1}{4}, \frac{2}{3}, 1\frac{1}{6}, 1\frac{1}{2}, 1\frac{3}{4}$$



$$1\frac{5}{6}, \frac{1}{8}, \frac{1}{3}, 1\frac{1}{2}, \frac{2}{3}$$

$$\frac{1}{8}, \frac{1}{3}, \frac{2}{3}, 1\frac{1}{2}, 1\frac{5}{6}$$

