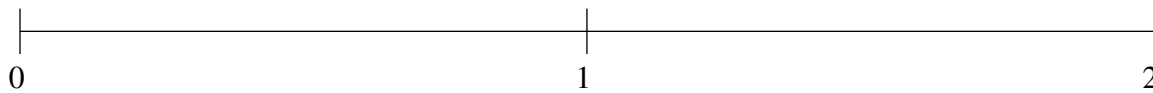


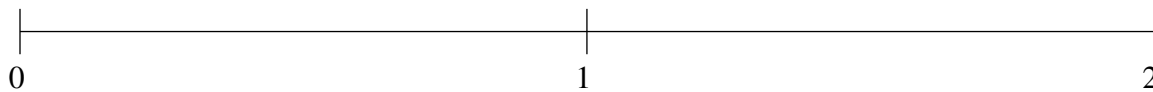
Ordenar Fracciones (H)

Ordene cada conjunto de fracciones usando la recta numérica.

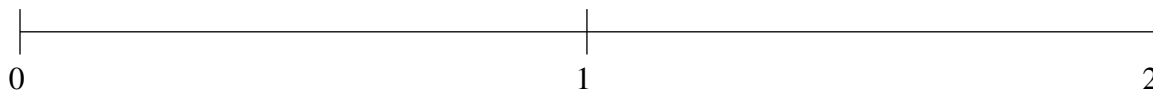
$$\frac{1}{3}, 1\frac{1}{2}, 1\frac{1}{6}, 1\frac{3}{4}, \frac{3}{4}$$



$$\frac{1}{2}, \frac{3}{4}, \frac{1}{8}, 1\frac{1}{3}, 1\frac{2}{3}$$



$$1\frac{5}{6}, 1\frac{1}{2}, \frac{11}{12}, \frac{1}{4}, \frac{5}{8}$$

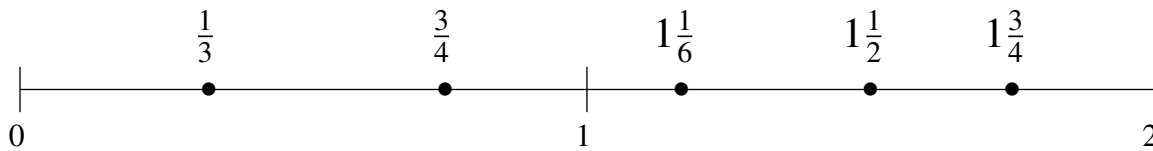


Ordenar Fracciones (H) Respuestas

Ordene cada conjunto de fracciones usando la recta numérica.

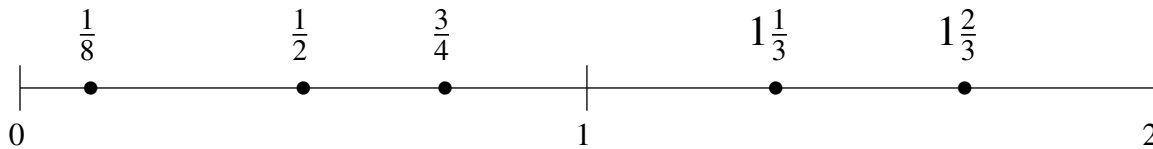
$$\frac{1}{3}, 1\frac{1}{2}, 1\frac{1}{6}, 1\frac{3}{4}, \frac{3}{4}$$

$$\frac{1}{3}, \frac{3}{4}, 1\frac{1}{6}, 1\frac{1}{2}, 1\frac{3}{4}$$



$$\frac{1}{2}, \frac{3}{4}, \frac{1}{8}, 1\frac{1}{3}, 1\frac{2}{3}$$

$$\frac{1}{8}, \frac{1}{2}, \frac{3}{4}, 1\frac{1}{3}, 1\frac{2}{3}$$



$$1\frac{5}{6}, 1\frac{1}{2}, \frac{11}{12}, \frac{1}{4}, \frac{5}{8}$$

$$\frac{1}{4}, \frac{5}{8}, \frac{11}{12}, 1\frac{1}{2}, 1\frac{5}{6}$$

