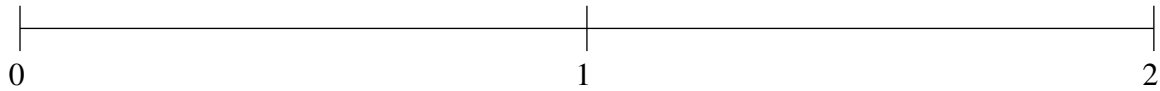


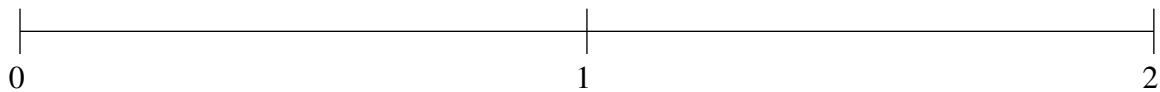
Ordenar Fracciones (J)

Ordene cada conjunto de fracciones usando la recta numérica.

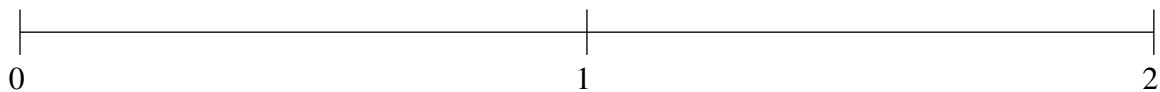
$$\frac{1}{4}, 1\frac{1}{3}, \frac{2}{3}, 1\frac{7}{8}, 1\frac{5}{8}$$



$$1\frac{1}{4}, 1\frac{7}{8}, 1\frac{2}{3}, \frac{5}{6}, \frac{7}{12}$$



$$\frac{1}{4}, 1\frac{1}{24}, 1\frac{1}{2}, 1\frac{1}{4}, \frac{2}{3}$$



Ordenar Fracciones (J) Respuestas

Ordene cada conjunto de fracciones usando la recta numérica.

$$\frac{1}{4}, 1\frac{1}{3}, \frac{2}{3}, 1\frac{7}{8}, 1\frac{5}{8}$$

$$\frac{1}{4}, \frac{2}{3}, 1\frac{1}{3}, 1\frac{5}{8}, 1\frac{7}{8}$$



$$1\frac{1}{4}, 1\frac{7}{8}, 1\frac{2}{3}, \frac{5}{6}, \frac{7}{12}$$

$$\frac{7}{12}, \frac{5}{6}, 1\frac{1}{4}, 1\frac{2}{3}, 1\frac{7}{8}$$



$$\frac{1}{4}, 1\frac{1}{24}, 1\frac{1}{2}, 1\frac{1}{4}, \frac{2}{3}$$

$$\frac{1}{4}, \frac{2}{3}, 1\frac{1}{24}, 1\frac{1}{4}, 1\frac{1}{2}$$

