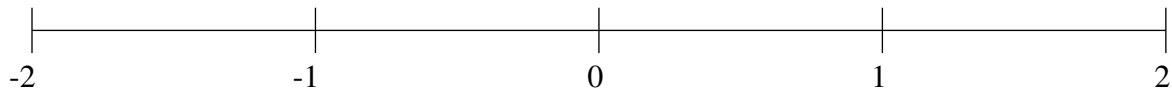


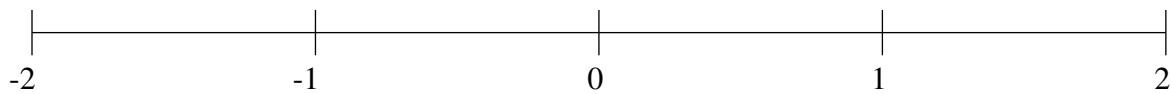
Ordenar Fracciones (B)

Ordene cada conjunto de fracciones usando la recta numérica.

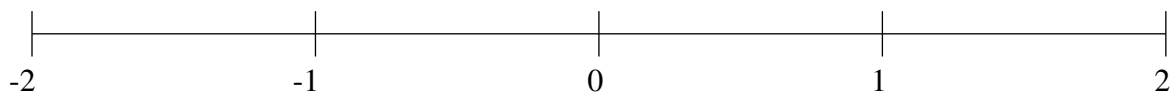
$$-1\frac{1}{3}, -\frac{1}{2}, 1\frac{1}{3}, 1\frac{5}{6}, \frac{1}{8}, \frac{1}{2}, -\frac{3}{4}, -1\frac{1}{12}$$



$$-\frac{1}{6}, 1\frac{1}{2}, \frac{1}{4}, 1\frac{3}{4}, -1\frac{1}{2}, \frac{3}{4}, -\frac{2}{3}, \frac{1}{2}$$



$$\frac{1}{12}, \frac{1}{3}, -1\frac{1}{4}, -\frac{2}{3}, -1\frac{1}{2}, 1\frac{1}{2}, \frac{2}{3}, -\frac{1}{3}$$

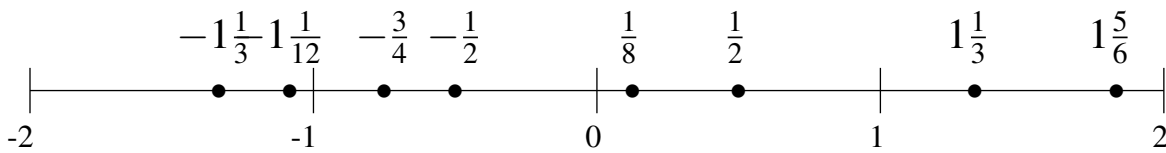


Ordenar Fracciones (B) Respuestas

Ordene cada conjunto de fracciones usando la recta numérica.

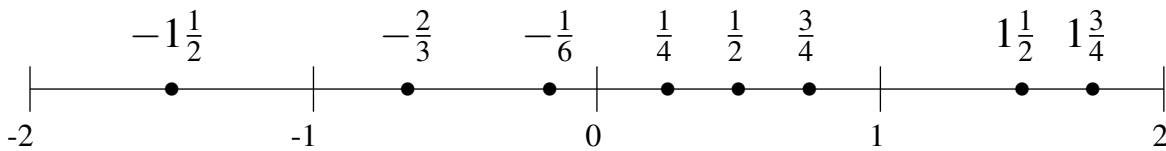
$$-1\frac{1}{3}, -\frac{1}{2}, 1\frac{1}{3}, 1\frac{5}{6}, \frac{1}{8}, \frac{1}{2}, -\frac{3}{4}, -1\frac{1}{12}$$

$$-1\frac{1}{3}, -1\frac{1}{12}, -\frac{3}{4}, -\frac{1}{2}, \frac{1}{8}, \frac{1}{2}, 1\frac{1}{3}, 1\frac{5}{6}$$



$$-\frac{1}{6}, 1\frac{1}{2}, \frac{1}{4}, 1\frac{3}{4}, -1\frac{1}{2}, \frac{3}{4}, -\frac{2}{3}, \frac{1}{2}$$

$$-1\frac{1}{2}, -\frac{2}{3}, -\frac{1}{6}, \frac{1}{4}, \frac{1}{2}, \frac{3}{4}, 1\frac{1}{2}, 1\frac{3}{4}$$



$$\frac{1}{12}, \frac{1}{3}, -1\frac{1}{4}, -\frac{2}{3}, -1\frac{1}{2}, 1\frac{1}{2}, \frac{2}{3}, -\frac{1}{3}$$

$$-1\frac{1}{2}, -1\frac{1}{4}, -\frac{2}{3}, -\frac{1}{3}, \frac{1}{12}, \frac{1}{3}, \frac{2}{3}, 1\frac{1}{2}$$

