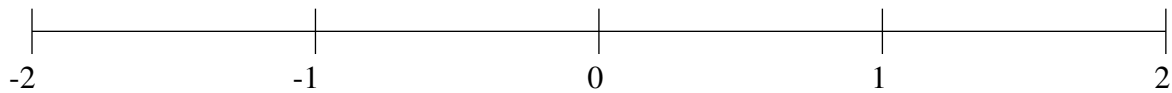


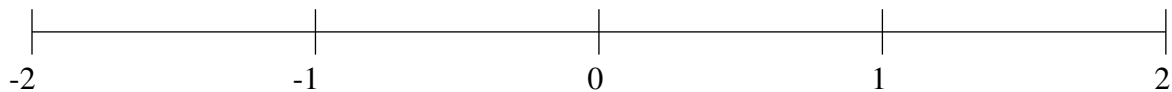
Ordenar Fracciones (D)

Ordene cada conjunto de fracciones usando la recta numérica.

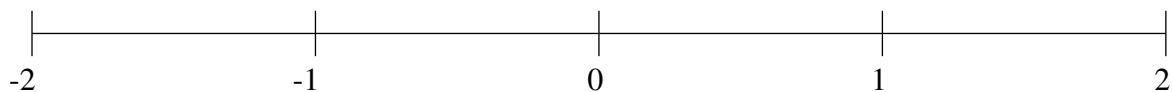
$$1\frac{2}{3}, 1\frac{1}{3}, \frac{3}{4}, \frac{1}{2}, -1\frac{2}{3}, -1\frac{1}{4}, -\frac{2}{3}, -\frac{1}{4}$$



$$-1\frac{2}{3}, -1\frac{1}{12}, 1\frac{7}{8}, -\frac{2}{3}, -1\frac{1}{3}, \frac{2}{3}, -\frac{1}{4}, 1\frac{1}{4}$$



$$-1\frac{7}{8}, -\frac{1}{4}, \frac{7}{8}, 1\frac{2}{3}, -\frac{2}{3}, \frac{1}{4}, \frac{1}{2}, -1\frac{1}{2}$$

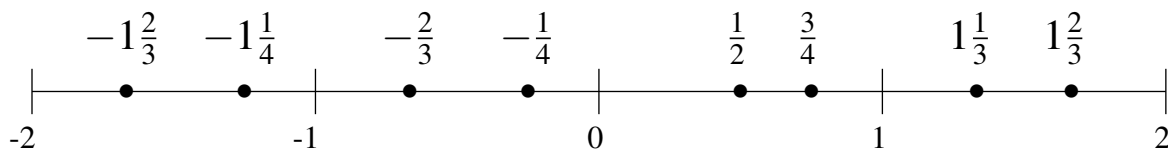


Ordenar Fracciones (D) Respuestas

Ordene cada conjunto de fracciones usando la recta numérica.

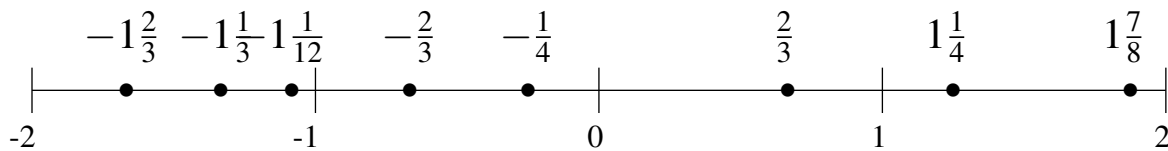
$$1\frac{2}{3}, 1\frac{1}{3}, \frac{3}{4}, \frac{1}{2}, -1\frac{2}{3}, -1\frac{1}{4}, -\frac{2}{3}, -\frac{1}{4}$$

$$-1\frac{2}{3}, -1\frac{1}{4}, -\frac{2}{3}, -\frac{1}{4}, \frac{1}{2}, \frac{3}{4}, 1\frac{1}{3}, 1\frac{2}{3}$$



$$-1\frac{2}{3}, -1\frac{1}{12}, 1\frac{7}{8}, -\frac{2}{3}, -1\frac{1}{3}, \frac{2}{3}, -\frac{1}{4}, 1\frac{1}{4}$$

$$-1\frac{2}{3}, -1\frac{1}{3}, -1\frac{1}{12}, -\frac{2}{3}, -\frac{1}{4}, \frac{2}{3}, 1\frac{1}{4}, 1\frac{7}{8}$$



$$-1\frac{7}{8}, -\frac{1}{4}, \frac{7}{8}, 1\frac{2}{3}, -\frac{2}{3}, \frac{1}{4}, \frac{1}{2}, -1\frac{1}{2}$$

$$-1\frac{7}{8}, -1\frac{1}{2}, -\frac{2}{3}, -\frac{1}{4}, \frac{1}{4}, \frac{1}{2}, \frac{7}{8}, 1\frac{2}{3}$$

