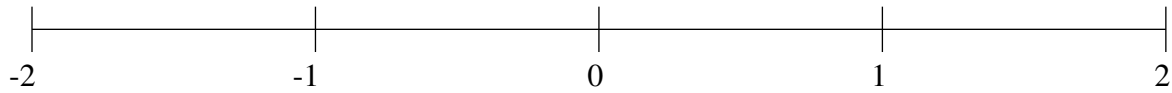


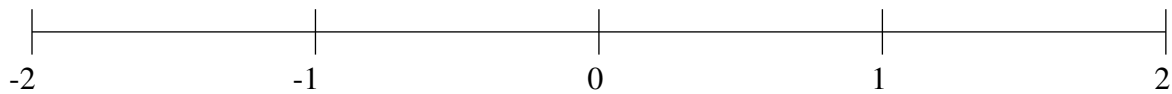
Ordenar Fracciones (F)

Ordene cada conjunto de fracciones usando la recta numérica.

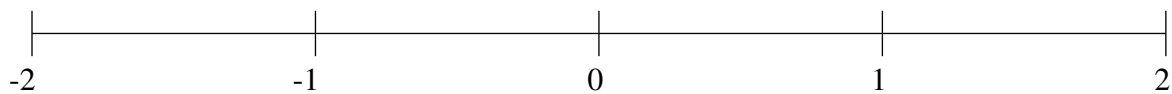
$$1\frac{1}{6}, \frac{3}{4}, -1\frac{2}{3}, 1\frac{2}{3}, 1\frac{11}{12}, -\frac{1}{3}, -1\frac{3}{8}, -\frac{2}{3}$$



$$-1\frac{1}{2}, -\frac{1}{12}, \frac{2}{3}, -\frac{1}{2}, 1\frac{1}{2}, -1\frac{1}{4}, 1\frac{3}{4}, 1\frac{1}{4}$$



$$\frac{1}{12}, -\frac{3}{4}, \frac{1}{3}, 1\frac{1}{2}, 1\frac{7}{8}, -\frac{1}{2}, -1\frac{1}{3}, -1\frac{3}{4}$$

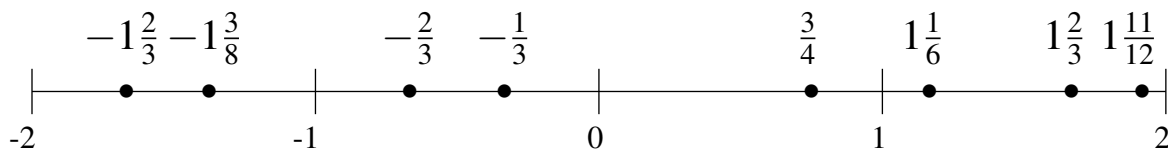


Ordenar Fracciones (F) Respuestas

Ordene cada conjunto de fracciones usando la recta numérica.

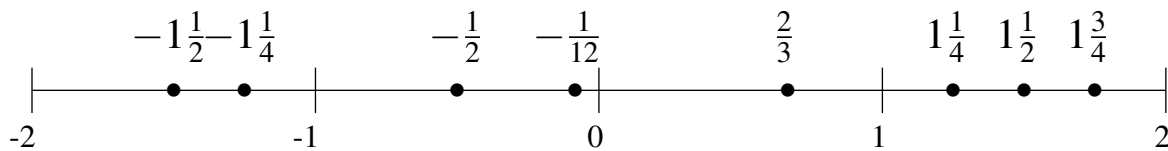
$$1\frac{1}{6}, \frac{3}{4}, -1\frac{2}{3}, 1\frac{2}{3}, 1\frac{11}{12}, -\frac{1}{3}, -1\frac{3}{8}, -\frac{2}{3}$$

$$-1\frac{2}{3}, -1\frac{3}{8}, -\frac{2}{3}, -\frac{1}{3}, \frac{3}{4}, 1\frac{1}{6}, 1\frac{2}{3}, 1\frac{11}{12}$$



$$-1\frac{1}{2}, -\frac{1}{12}, \frac{2}{3}, -\frac{1}{2}, 1\frac{1}{2}, -1\frac{1}{4}, 1\frac{3}{4}, 1\frac{1}{4}$$

$$-1\frac{1}{2}, -1\frac{1}{4}, -\frac{1}{2}, -\frac{1}{12}, \frac{2}{3}, 1\frac{1}{4}, 1\frac{1}{2}, 1\frac{3}{4}$$



$$\frac{1}{12}, -\frac{3}{4}, \frac{1}{3}, 1\frac{1}{2}, 1\frac{7}{8}, -\frac{1}{2}, -1\frac{1}{3}, -1\frac{3}{4}$$

$$-1\frac{3}{4}, -1\frac{1}{3}, -\frac{3}{4}, -\frac{1}{2}, \frac{1}{12}, \frac{1}{3}, 1\frac{1}{2}, 1\frac{7}{8}$$

