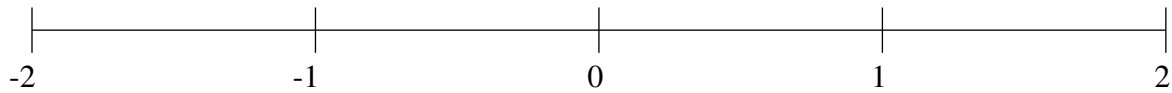


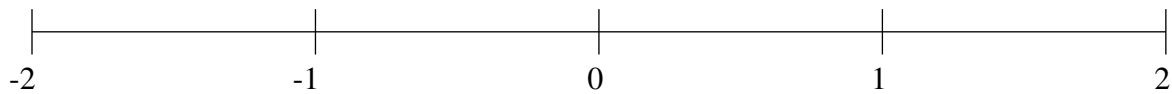
## Ordenar Fracciones (J)

Ordene cada conjunto de fracciones usando la recta numérica.

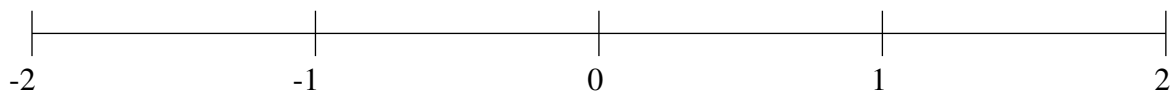
$$-1\frac{1}{2}, 1\frac{1}{2}, -\frac{1}{12}, -\frac{1}{2}, -1\frac{1}{4}, \frac{3}{4}, -1\frac{3}{4}, 1\frac{1}{4}$$



$$-1\frac{7}{8}, \frac{1}{8}, -\frac{1}{3}, -1\frac{2}{3}, -\frac{5}{8}, 1\frac{1}{8}, 1\frac{1}{3}, -1\frac{1}{3}$$



$$-1\frac{1}{6}, 1\frac{1}{2}, -\frac{1}{8}, -\frac{2}{3}, \frac{1}{4}, -1\frac{3}{8}, \frac{3}{4}, \frac{1}{2}$$

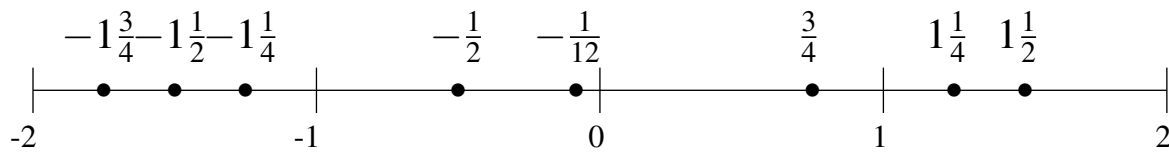


## Ordenar Fracciones (J) Respuestas

Ordene cada conjunto de fracciones usando la recta numérica.

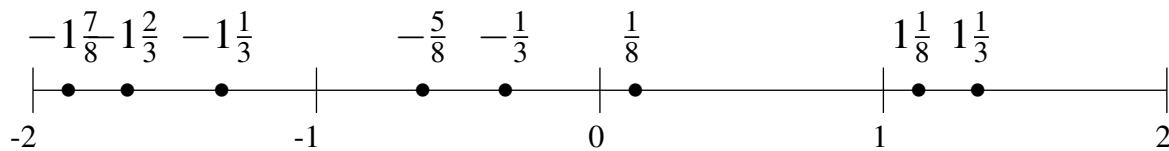
$$-1\frac{1}{2}, 1\frac{1}{2}, -\frac{1}{12}, -\frac{1}{2}, -1\frac{1}{4}, \frac{3}{4}, -1\frac{3}{4}, 1\frac{1}{4}$$

$$-1\frac{3}{4}, -1\frac{1}{2}, -1\frac{1}{4}, -\frac{1}{2}, -\frac{1}{12}, \frac{3}{4}, 1\frac{1}{4}, 1\frac{1}{2}$$



$$-1\frac{7}{8}, \frac{1}{8}, -\frac{1}{3}, -1\frac{2}{3}, -\frac{5}{8}, 1\frac{1}{8}, 1\frac{1}{3}, -1\frac{1}{3}$$

$$-1\frac{7}{8}, -1\frac{2}{3}, -1\frac{1}{3}, -\frac{5}{8}, -\frac{1}{3}, \frac{1}{8}, 1\frac{1}{8}, 1\frac{1}{3}$$



$$-1\frac{1}{6}, 1\frac{1}{2}, -\frac{1}{8}, -\frac{2}{3}, \frac{1}{4}, -1\frac{3}{8}, \frac{3}{4}, \frac{1}{2}$$

$$-1\frac{3}{8}, -1\frac{1}{6}, -\frac{2}{3}, -\frac{1}{8}, \frac{1}{4}, \frac{1}{2}, \frac{3}{4}, 1\frac{1}{2}$$

