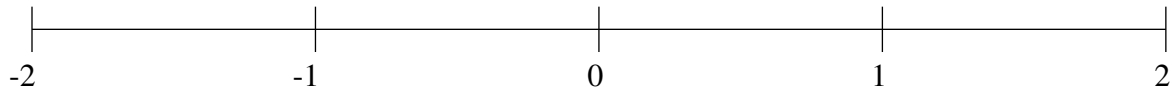


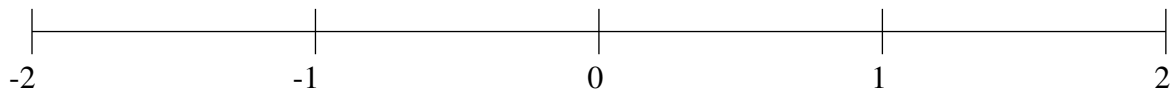
Ordenar Fracciones (A)

Ordene cada conjunto de fracciones usando la recta numérica.

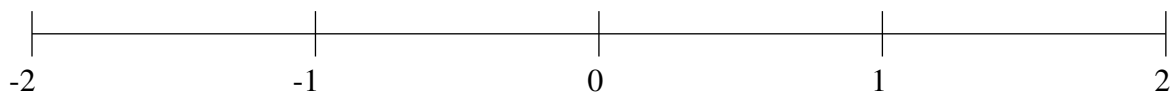
$$\frac{1}{8}, \frac{2}{3}, 1\frac{1}{2}, 1\frac{3}{4}, -1\frac{1}{4}, 1\frac{1}{12}, -1\frac{3}{4}, -\frac{2}{3}$$



$$-1\frac{2}{3}, -1\frac{1}{8}, -\frac{1}{4}, -\frac{1}{2}, 1\frac{1}{3}, \frac{1}{2}, 1\frac{2}{3}, \frac{3}{4}$$



$$-\frac{5}{6}, \frac{1}{2}, 1\frac{2}{3}, -1\frac{1}{4}, \frac{1}{4}, -1\frac{1}{2}, -\frac{1}{2}, -1\frac{3}{4}$$

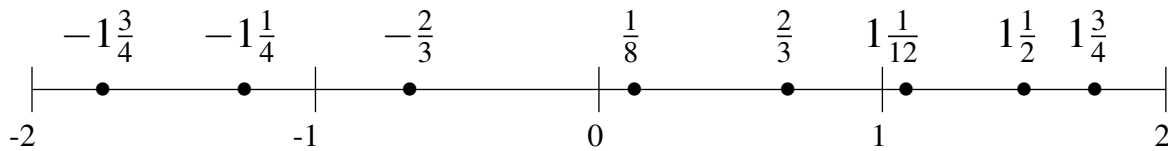


Ordenar Fracciones (A) Respuestas

Ordene cada conjunto de fracciones usando la recta numérica.

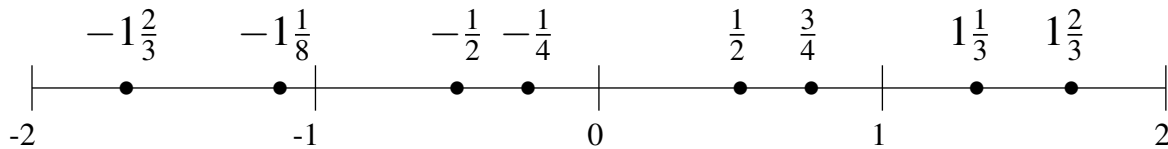
$$\frac{1}{8}, \frac{2}{3}, 1\frac{1}{2}, 1\frac{3}{4}, -1\frac{1}{4}, 1\frac{1}{12}, -1\frac{3}{4}, -\frac{2}{3}$$

$$-1\frac{3}{4}, -1\frac{1}{4}, -\frac{2}{3}, \frac{1}{8}, \frac{2}{3}, 1\frac{1}{12}, 1\frac{1}{2}, 1\frac{3}{4}$$



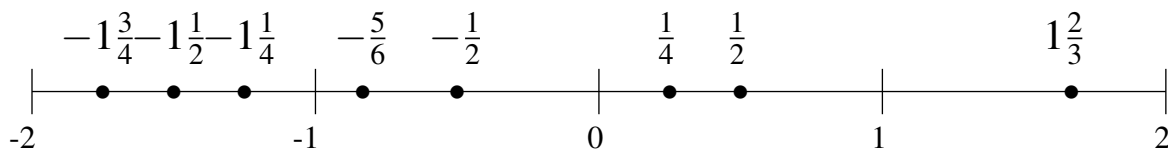
$$-1\frac{2}{3}, -1\frac{1}{8}, -\frac{1}{4}, -\frac{1}{2}, 1\frac{1}{3}, \frac{1}{2}, 1\frac{2}{3}, \frac{3}{4}$$

$$-1\frac{2}{3}, -1\frac{1}{8}, -\frac{1}{2}, -\frac{1}{4}, \frac{1}{2}, \frac{3}{4}, 1\frac{1}{3}, 1\frac{2}{3}$$



$$-\frac{5}{6}, \frac{1}{2}, 1\frac{2}{3}, -1\frac{1}{4}, \frac{1}{4}, -1\frac{1}{2}, -\frac{1}{2}, -1\frac{3}{4}$$

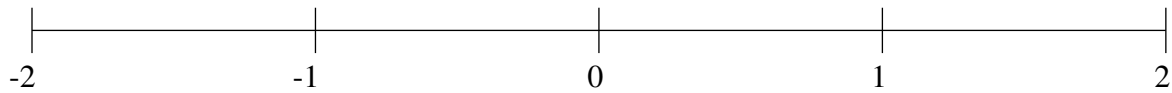
$$-1\frac{3}{4}, -1\frac{1}{2}, -1\frac{1}{4}, -\frac{5}{6}, -\frac{1}{2}, \frac{1}{4}, \frac{1}{2}, 1\frac{2}{3}$$



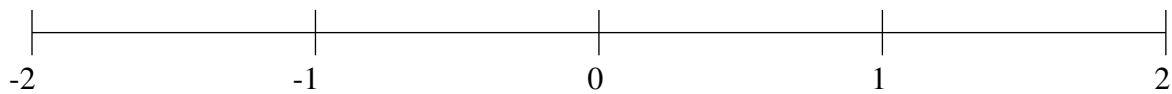
Ordenar Fracciones (B)

Ordene cada conjunto de fracciones usando la recta numérica.

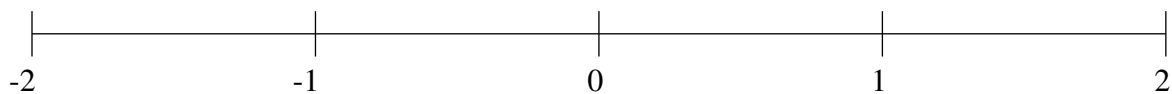
$$-1\frac{1}{3}, -\frac{1}{2}, 1\frac{1}{3}, 1\frac{5}{6}, \frac{1}{8}, \frac{1}{2}, -\frac{3}{4}, -1\frac{1}{12}$$



$$-\frac{1}{6}, 1\frac{1}{2}, \frac{1}{4}, 1\frac{3}{4}, -1\frac{1}{2}, \frac{3}{4}, -\frac{2}{3}, \frac{1}{2}$$



$$\frac{1}{12}, \frac{1}{3}, -1\frac{1}{4}, -\frac{2}{3}, -1\frac{1}{2}, 1\frac{1}{2}, \frac{2}{3}, -\frac{1}{3}$$

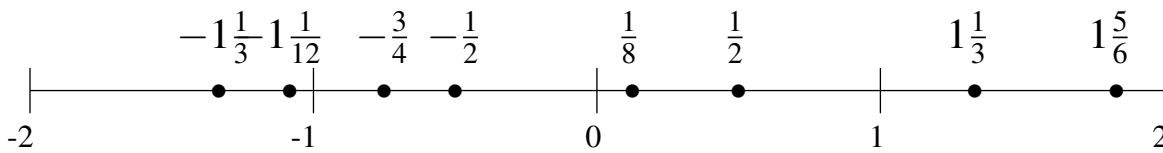


Ordenar Fracciones (B) Respuestas

Ordene cada conjunto de fracciones usando la recta numérica.

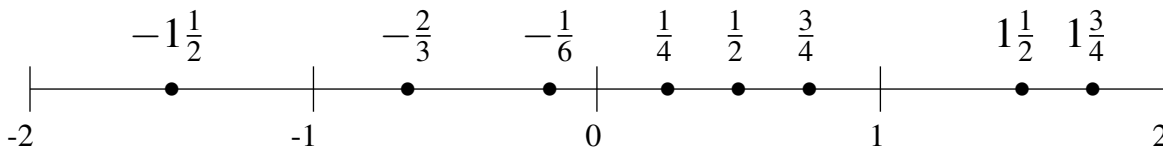
$$-1\frac{1}{3}, -\frac{1}{2}, 1\frac{1}{3}, 1\frac{5}{6}, \frac{1}{8}, \frac{1}{2}, -\frac{3}{4}, -1\frac{1}{12}$$

$$-1\frac{1}{3}, -1\frac{1}{12}, -\frac{3}{4}, -\frac{1}{2}, \frac{1}{8}, \frac{1}{2}, 1\frac{1}{3}, 1\frac{5}{6}$$



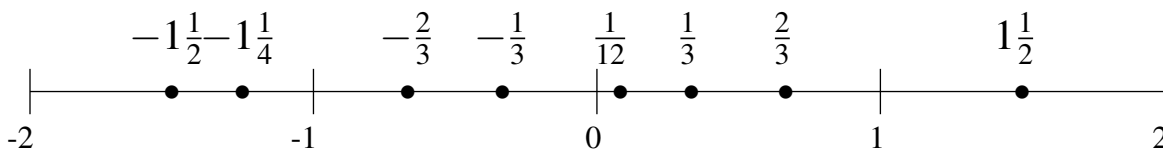
$$-\frac{1}{6}, 1\frac{1}{2}, \frac{1}{4}, 1\frac{3}{4}, -1\frac{1}{2}, \frac{3}{4}, -\frac{2}{3}, \frac{1}{2}$$

$$-1\frac{1}{2}, -\frac{2}{3}, -\frac{1}{6}, \frac{1}{4}, \frac{1}{2}, \frac{3}{4}, 1\frac{1}{2}, 1\frac{3}{4}$$



$$\frac{1}{12}, \frac{1}{3}, -1\frac{1}{4}, -\frac{2}{3}, -1\frac{1}{2}, 1\frac{1}{2}, \frac{2}{3}, -\frac{1}{3}$$

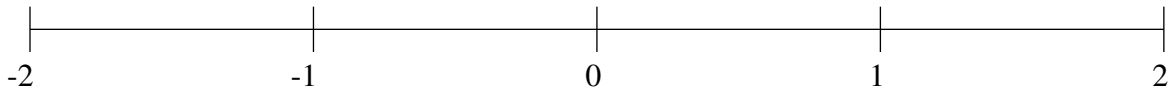
$$-1\frac{1}{2}, -1\frac{1}{4}, -\frac{2}{3}, -\frac{1}{3}, \frac{1}{12}, \frac{1}{3}, \frac{2}{3}, 1\frac{1}{2}$$



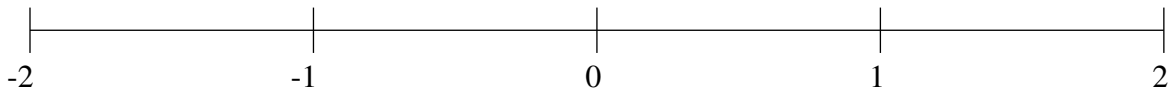
Ordenar Fracciones (C)

Ordene cada conjunto de fracciones usando la recta numérica.

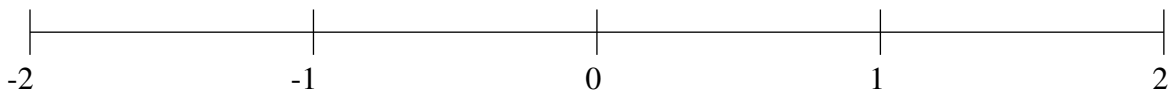
$$\frac{1}{4}, \frac{3}{4}, -\frac{2}{3}, \frac{1}{2}, -\frac{1}{3}, -1\frac{1}{2}, -1\frac{1}{4}, -1\frac{3}{4}$$



$$-1\frac{5}{6}, 1\frac{1}{2}, -1\frac{7}{12}, 1\frac{1}{12}, \frac{1}{2}, -\frac{3}{4}, 1\frac{5}{6}, \frac{1}{6}$$



$$-\frac{5}{6}, -\frac{1}{6}, 1\frac{1}{4}, 1\frac{1}{2}, 1\frac{11}{12}, -1\frac{1}{4}, -\frac{1}{2}, \frac{5}{6}$$

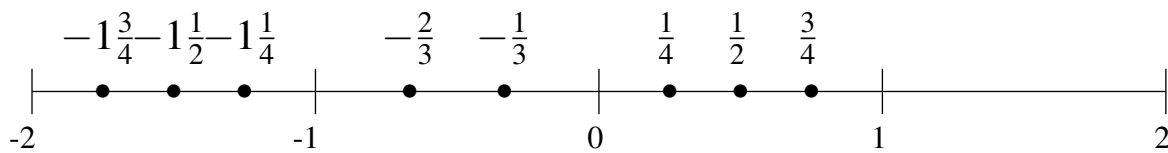


Ordenar Fracciones (C) Respuestas

Ordene cada conjunto de fracciones usando la recta numérica.

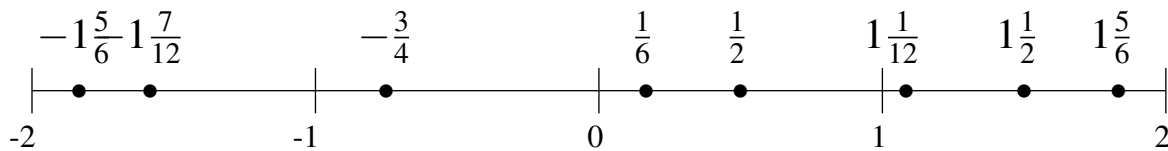
$$\frac{1}{4}, \frac{3}{4}, -\frac{2}{3}, \frac{1}{2}, -\frac{1}{3}, -1\frac{1}{2}, -1\frac{1}{4}, -1\frac{3}{4}$$

$$-1\frac{3}{4}, -1\frac{1}{2}, -1\frac{1}{4}, -\frac{2}{3}, -\frac{1}{3}, \frac{1}{4}, \frac{1}{2}, \frac{3}{4}$$



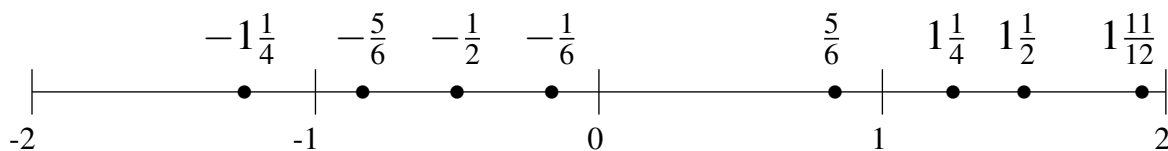
$$-1\frac{5}{6}, 1\frac{1}{2}, -1\frac{7}{12}, 1\frac{1}{12}, \frac{1}{2}, -\frac{3}{4}, 1\frac{5}{6}, \frac{1}{6}$$

$$-1\frac{5}{6}, -1\frac{7}{12}, -\frac{3}{4}, \frac{1}{6}, \frac{1}{2}, 1\frac{1}{12}, 1\frac{1}{2}, 1\frac{5}{6}$$



$$-\frac{5}{6}, -\frac{1}{6}, 1\frac{1}{4}, 1\frac{1}{2}, 1\frac{11}{12}, -1\frac{1}{4}, -\frac{1}{2}, \frac{5}{6}$$

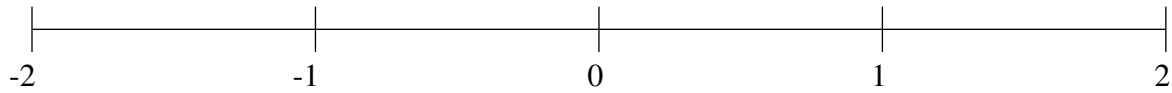
$$-1\frac{1}{4}, -\frac{5}{6}, -\frac{1}{2}, -\frac{1}{6}, \frac{5}{6}, 1\frac{1}{4}, 1\frac{1}{2}, 1\frac{11}{12}$$



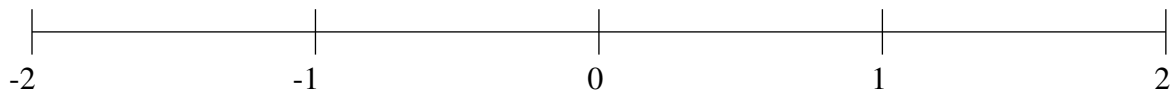
Ordenar Fracciones (D)

Ordene cada conjunto de fracciones usando la recta numérica.

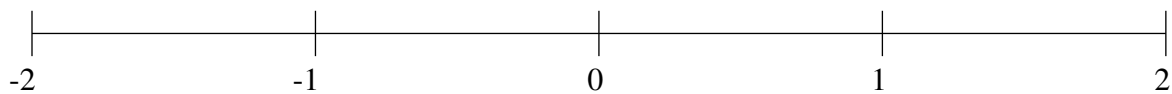
$$1\frac{2}{3}, 1\frac{1}{3}, \frac{3}{4}, \frac{1}{2}, -1\frac{2}{3}, -1\frac{1}{4}, -\frac{2}{3}, -\frac{1}{4}$$



$$-1\frac{2}{3}, -1\frac{1}{12}, 1\frac{7}{8}, -\frac{2}{3}, -1\frac{1}{3}, \frac{2}{3}, -\frac{1}{4}, 1\frac{1}{4}$$



$$-1\frac{7}{8}, -\frac{1}{4}, \frac{7}{8}, 1\frac{2}{3}, -\frac{2}{3}, \frac{1}{4}, \frac{1}{2}, -1\frac{1}{2}$$

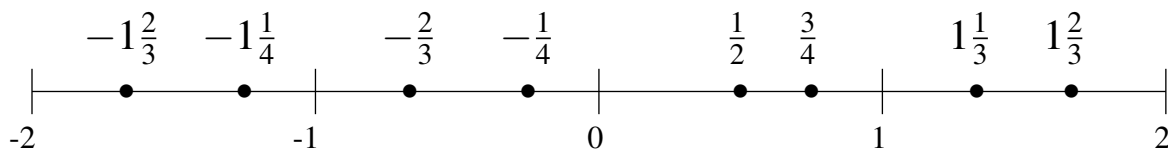


Ordenar Fracciones (D) Respuestas

Ordene cada conjunto de fracciones usando la recta numérica.

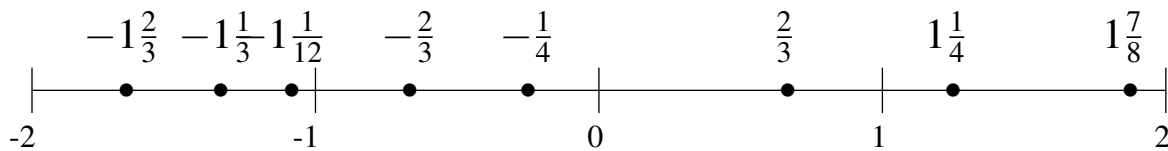
$$1\frac{2}{3}, 1\frac{1}{3}, \frac{3}{4}, \frac{1}{2}, -1\frac{2}{3}, -1\frac{1}{4}, -\frac{2}{3}, -\frac{1}{4}$$

$$-1\frac{2}{3}, -1\frac{1}{4}, -\frac{2}{3}, -\frac{1}{4}, \frac{1}{2}, \frac{3}{4}, 1\frac{1}{3}, 1\frac{2}{3}$$



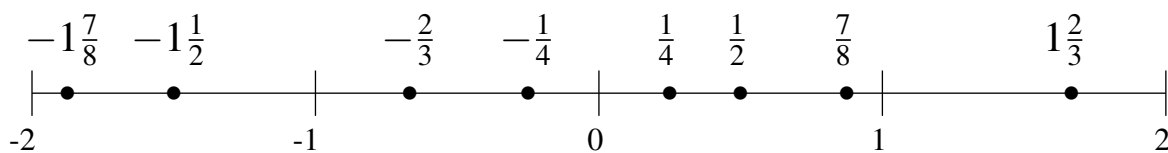
$$-1\frac{2}{3}, -1\frac{1}{12}, 1\frac{7}{8}, -\frac{2}{3}, -1\frac{1}{3}, \frac{2}{3}, -\frac{1}{4}, 1\frac{1}{4}$$

$$-1\frac{2}{3}, -1\frac{1}{3}, -1\frac{1}{12}, -\frac{2}{3}, -\frac{1}{4}, \frac{2}{3}, 1\frac{1}{4}, 1\frac{7}{8}$$



$$-1\frac{7}{8}, -\frac{1}{4}, \frac{7}{8}, 1\frac{2}{3}, -\frac{2}{3}, \frac{1}{4}, \frac{1}{2}, -1\frac{1}{2}$$

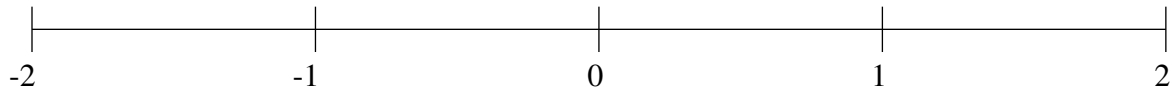
$$-1\frac{7}{8}, -1\frac{1}{2}, -\frac{2}{3}, -\frac{1}{4}, \frac{1}{4}, \frac{1}{2}, \frac{7}{8}, 1\frac{2}{3}$$



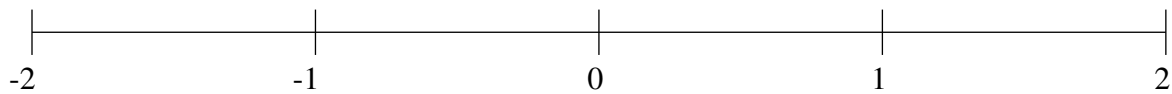
Ordenar Fracciones (E)

Ordene cada conjunto de fracciones usando la recta numérica.

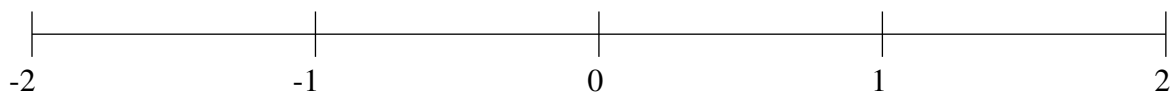
$$1\frac{1}{6}, -1\frac{1}{8}, 1\frac{11}{12}, -\frac{3}{4}, -1\frac{1}{2}, \frac{7}{8}, 1\frac{2}{3}, \frac{1}{4}$$



$$1\frac{1}{4}, -1\frac{1}{2}, -\frac{1}{8}, -\frac{5}{6}, -1\frac{1}{6}, -1\frac{3}{4}, 1\frac{1}{2}, \frac{3}{4}$$



$$\frac{5}{6}, -\frac{5}{8}, -\frac{5}{6}, 1\frac{2}{3}, \frac{1}{2}, -1\frac{3}{4}, 1\frac{1}{3}, -\frac{1}{3}$$

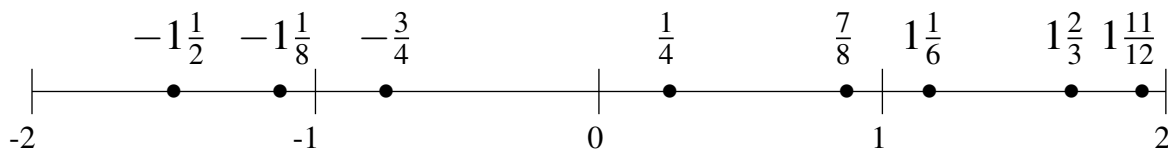


Ordenar Fracciones (E) Respuestas

Ordene cada conjunto de fracciones usando la recta numérica.

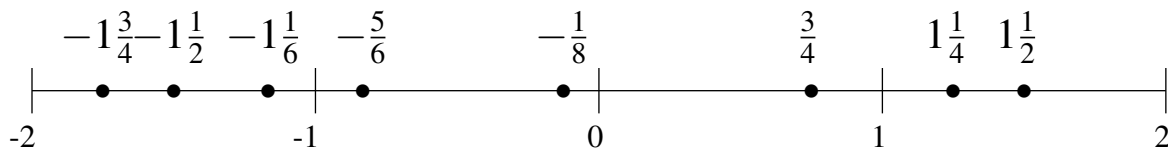
$$1\frac{1}{6}, -1\frac{1}{8}, 1\frac{11}{12}, -\frac{3}{4}, -1\frac{1}{2}, \frac{7}{8}, 1\frac{2}{3}, \frac{1}{4}$$

$$-1\frac{1}{2}, -1\frac{1}{8}, -\frac{3}{4}, \frac{1}{4}, \frac{7}{8}, 1\frac{1}{6}, 1\frac{2}{3}, 1\frac{11}{12}$$



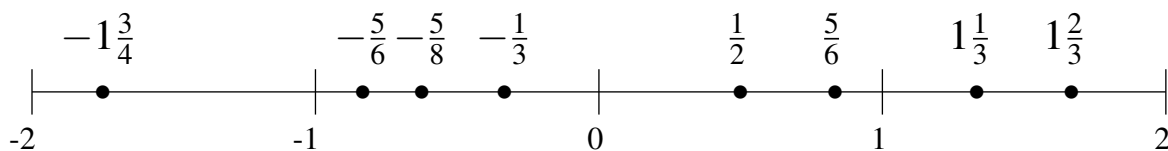
$$1\frac{1}{4}, -1\frac{1}{2}, -\frac{1}{8}, -\frac{5}{6}, -1\frac{1}{6}, -1\frac{3}{4}, 1\frac{1}{2}, \frac{3}{4}$$

$$-1\frac{3}{4}, -1\frac{1}{2}, -1\frac{1}{6}, -\frac{5}{6}, -\frac{1}{8}, \frac{3}{4}, 1\frac{1}{4}, 1\frac{1}{2}$$



$$\frac{5}{6}, -\frac{5}{8}, -\frac{5}{6}, 1\frac{2}{3}, \frac{1}{2}, -1\frac{3}{4}, 1\frac{1}{3}, -\frac{1}{3}$$

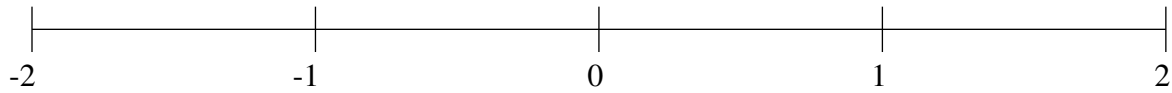
$$-1\frac{3}{4}, -\frac{5}{6}, -\frac{5}{8}, -\frac{1}{3}, \frac{1}{2}, \frac{5}{6}, 1\frac{1}{3}, 1\frac{2}{3}$$



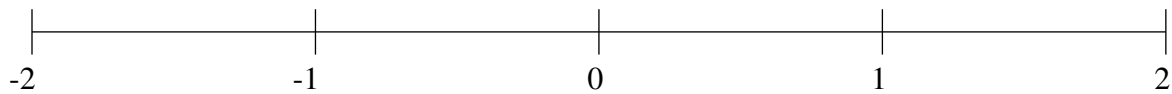
Ordenar Fracciones (F)

Ordene cada conjunto de fracciones usando la recta numérica.

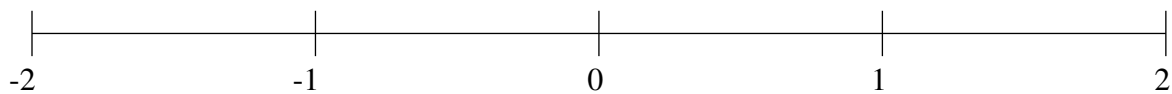
$$1\frac{1}{6}, \frac{3}{4}, -1\frac{2}{3}, 1\frac{2}{3}, 1\frac{11}{12}, -\frac{1}{3}, -1\frac{3}{8}, -\frac{2}{3}$$



$$-1\frac{1}{2}, -\frac{1}{12}, \frac{2}{3}, -\frac{1}{2}, 1\frac{1}{2}, -1\frac{1}{4}, 1\frac{3}{4}, 1\frac{1}{4}$$



$$\frac{1}{12}, -\frac{3}{4}, \frac{1}{3}, 1\frac{1}{2}, 1\frac{7}{8}, -\frac{1}{2}, -1\frac{1}{3}, -1\frac{3}{4}$$

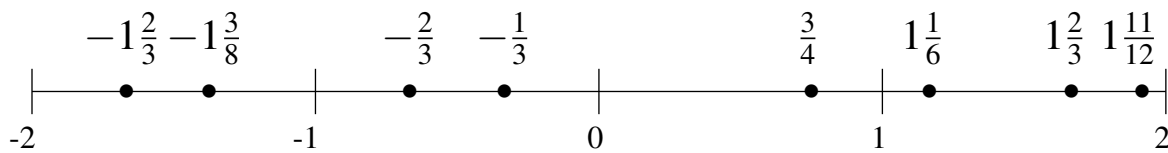


Ordenar Fracciones (F) Respuestas

Ordene cada conjunto de fracciones usando la recta numérica.

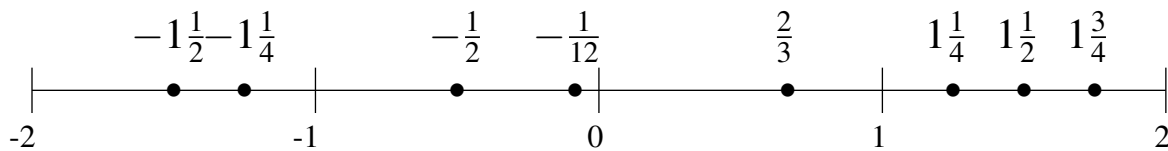
$$1\frac{1}{6}, \frac{3}{4}, -1\frac{2}{3}, 1\frac{2}{3}, 1\frac{11}{12}, -\frac{1}{3}, -1\frac{3}{8}, -\frac{2}{3}$$

$$-1\frac{2}{3}, -1\frac{3}{8}, -\frac{2}{3}, -\frac{1}{3}, \frac{3}{4}, 1\frac{1}{6}, 1\frac{2}{3}, 1\frac{11}{12}$$



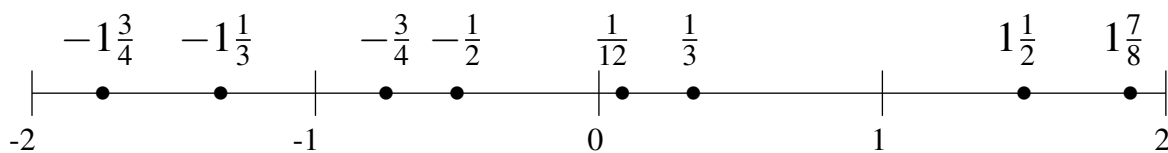
$$-1\frac{1}{2}, -\frac{1}{12}, \frac{2}{3}, -\frac{1}{2}, 1\frac{1}{2}, -1\frac{1}{4}, 1\frac{3}{4}, 1\frac{1}{4}$$

$$-1\frac{1}{2}, -1\frac{1}{4}, -\frac{1}{2}, -\frac{1}{12}, \frac{2}{3}, 1\frac{1}{4}, 1\frac{1}{2}, 1\frac{3}{4}$$



$$\frac{1}{12}, -\frac{3}{4}, \frac{1}{3}, 1\frac{1}{2}, 1\frac{7}{8}, -\frac{1}{2}, -1\frac{1}{3}, -1\frac{3}{4}$$

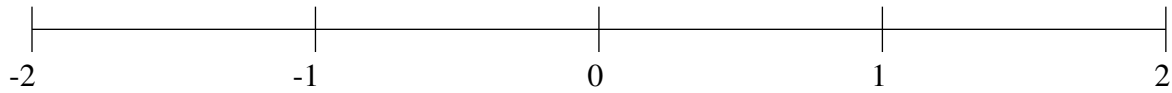
$$-1\frac{3}{4}, -1\frac{1}{3}, -\frac{3}{4}, -\frac{1}{2}, \frac{1}{12}, \frac{1}{3}, 1\frac{1}{2}, 1\frac{7}{8}$$



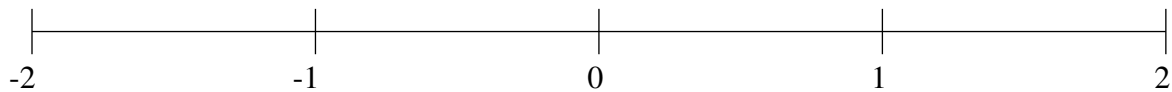
Ordenar Fracciones (G)

Ordene cada conjunto de fracciones usando la recta numérica.

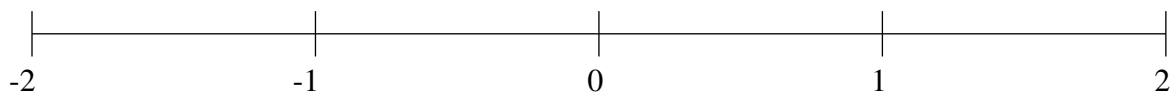
$$1\frac{1}{3}, -\frac{2}{3}, -1\frac{2}{3}, -\frac{1}{4}, \frac{2}{3}, 1\frac{3}{4}, \frac{1}{4}, -1\frac{1}{3}$$



$$-1\frac{2}{3}, \frac{1}{2}, \frac{1}{4}, -\frac{3}{4}, -\frac{1}{6}, 1\frac{11}{12}, -\frac{3}{8}, 1\frac{2}{3}$$



$$-\frac{1}{3}, -1\frac{1}{2}, \frac{7}{8}, \frac{1}{4}, 1\frac{1}{2}, -\frac{5}{6}, 1\frac{3}{4}, -1\frac{3}{4}$$

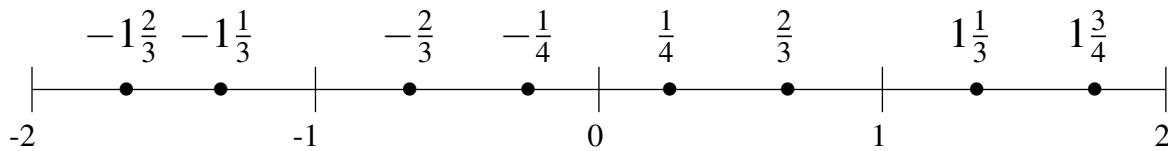


Ordenar Fracciones (G) Respuestas

Ordene cada conjunto de fracciones usando la recta numérica.

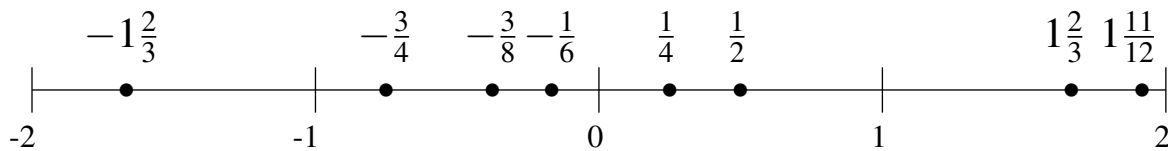
$$1\frac{1}{3}, -\frac{2}{3}, -1\frac{2}{3}, -\frac{1}{4}, \frac{2}{3}, 1\frac{3}{4}, \frac{1}{4}, -1\frac{1}{3}$$

$$-1\frac{2}{3}, -1\frac{1}{3}, -\frac{2}{3}, -\frac{1}{4}, \frac{1}{4}, \frac{2}{3}, 1\frac{1}{3}, 1\frac{3}{4}$$



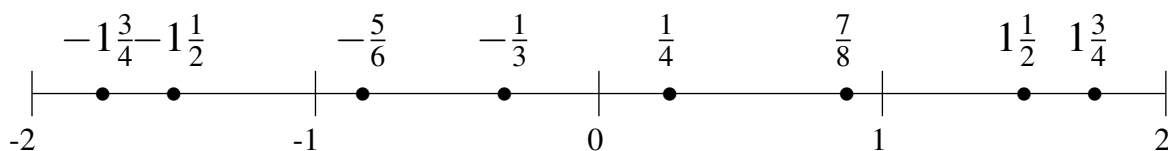
$$-1\frac{2}{3}, \frac{1}{2}, \frac{1}{4}, -\frac{3}{4}, -\frac{1}{6}, 1\frac{11}{12}, -\frac{3}{8}, 1\frac{2}{3}$$

$$-1\frac{2}{3}, -\frac{3}{4}, -\frac{3}{8}, -\frac{1}{6}, \frac{1}{4}, \frac{1}{2}, 1\frac{2}{3}, 1\frac{11}{12}$$



$$-\frac{1}{3}, -1\frac{1}{2}, \frac{7}{8}, \frac{1}{4}, 1\frac{1}{2}, -\frac{5}{6}, 1\frac{3}{4}, -1\frac{3}{4}$$

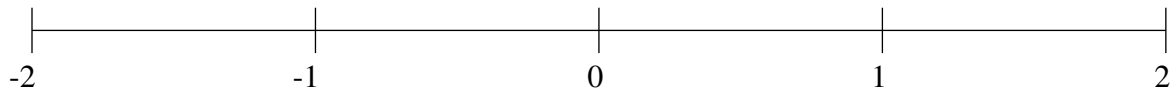
$$-1\frac{3}{4}, -1\frac{1}{2}, -\frac{5}{6}, -\frac{1}{3}, \frac{1}{4}, \frac{7}{8}, 1\frac{1}{2}, 1\frac{3}{4}$$



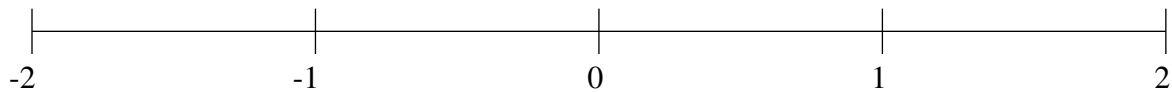
Ordenar Fracciones (H)

Ordene cada conjunto de fracciones usando la recta numérica.

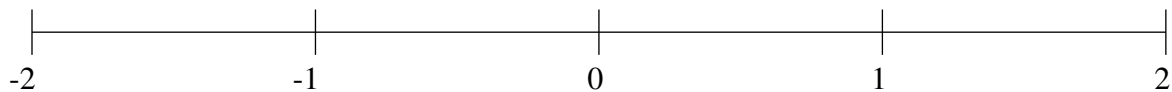
$$-\frac{1}{3}, -\frac{5}{6}, 1\frac{3}{4}, -1\frac{1}{8}, \frac{1}{2}, 1\frac{1}{2}, \frac{11}{12}, \frac{1}{6}$$



$$-\frac{1}{3}, 1\frac{19}{24}, -1\frac{11}{12}, 1\frac{1}{2}, \frac{1}{8}, \frac{7}{8}, -\frac{5}{6}, \frac{1}{2}$$



$$-1\frac{1}{2}, -1\frac{1}{4}, 1\frac{19}{24}, \frac{2}{3}, \frac{7}{8}, 1\frac{1}{2}, \frac{1}{6}, -\frac{1}{6}$$

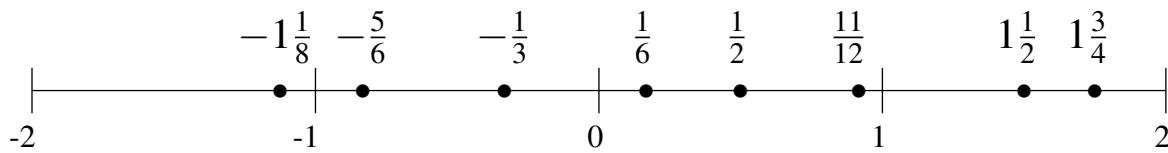


Ordenar Fracciones (H) Respuestas

Ordene cada conjunto de fracciones usando la recta numérica.

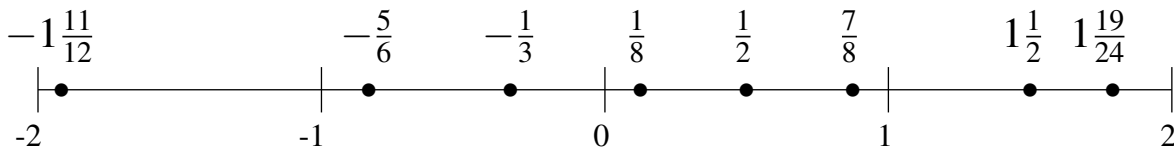
$$-\frac{1}{3}, -\frac{5}{6}, 1\frac{3}{4}, -1\frac{1}{8}, \frac{1}{2}, 1\frac{1}{2}, \frac{11}{12}, \frac{1}{6}$$

$$-1\frac{1}{8}, -\frac{5}{6}, -\frac{1}{3}, \frac{1}{6}, \frac{1}{2}, \frac{11}{12}, 1\frac{1}{2}, 1\frac{3}{4}$$



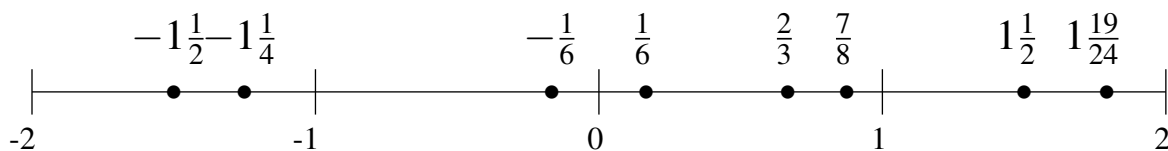
$$-\frac{1}{3}, 1\frac{19}{24}, -1\frac{11}{12}, 1\frac{1}{2}, \frac{1}{8}, \frac{7}{8}, -\frac{5}{6}, \frac{1}{2}$$

$$-1\frac{11}{12}, -\frac{5}{6}, -\frac{1}{3}, \frac{1}{8}, \frac{1}{2}, \frac{7}{8}, 1\frac{1}{2}, 1\frac{19}{24}$$



$$-1\frac{1}{2}, -1\frac{1}{4}, 1\frac{19}{24}, \frac{2}{3}, \frac{7}{8}, 1\frac{1}{2}, \frac{1}{6}, -\frac{1}{6}$$

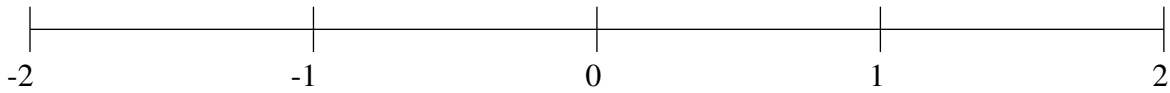
$$-1\frac{1}{2}, -1\frac{1}{4}, -\frac{1}{6}, \frac{1}{6}, \frac{2}{3}, \frac{7}{8}, 1\frac{1}{2}, 1\frac{19}{24}$$



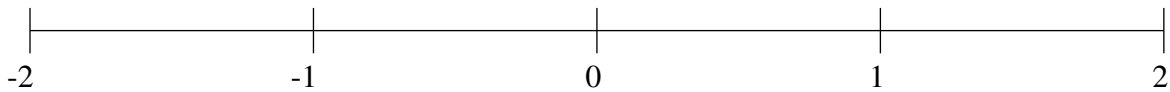
Ordenar Fracciones (I)

Ordene cada conjunto de fracciones usando la recta numérica.

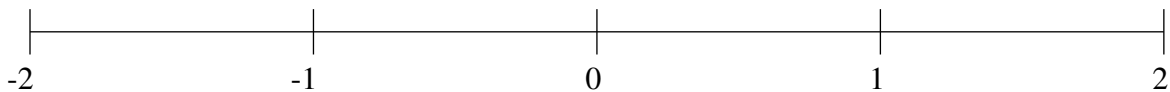
$$\frac{1}{2}, -\frac{3}{4}, \frac{1}{8}, -1\frac{3}{4}, \frac{7}{8}, -\frac{1}{3}, -1\frac{1}{2}, -1\frac{1}{4}$$



$$-1\frac{1}{2}, \frac{1}{4}, -\frac{5}{6}, 1\frac{1}{2}, 1\frac{1}{6}, \frac{1}{2}, \frac{7}{8}, -\frac{1}{2}$$



$$1\frac{3}{4}, \frac{1}{8}, -1\frac{2}{3}, 1\frac{1}{12}, \frac{1}{2}, -\frac{2}{3}, 1\frac{1}{2}, -\frac{1}{12}$$

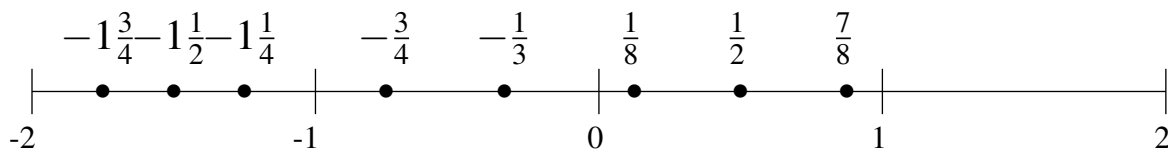


Ordenar Fracciones (I) Respuestas

Ordene cada conjunto de fracciones usando la recta numérica.

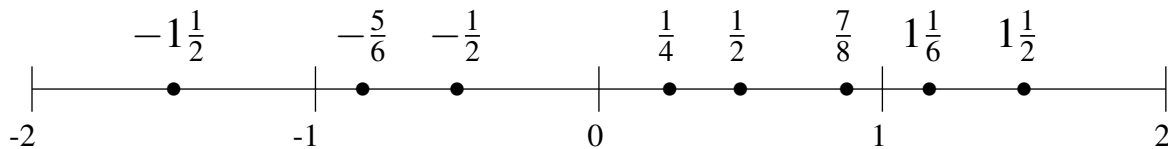
$$\frac{1}{2}, -\frac{3}{4}, \frac{1}{8}, -1\frac{3}{4}, \frac{7}{8}, -\frac{1}{3}, -1\frac{1}{2}, -1\frac{1}{4}$$

$$-1\frac{3}{4}, -1\frac{1}{2}, -1\frac{1}{4}, -\frac{3}{4}, -\frac{1}{3}, \frac{1}{8}, \frac{1}{2}, \frac{7}{8}$$



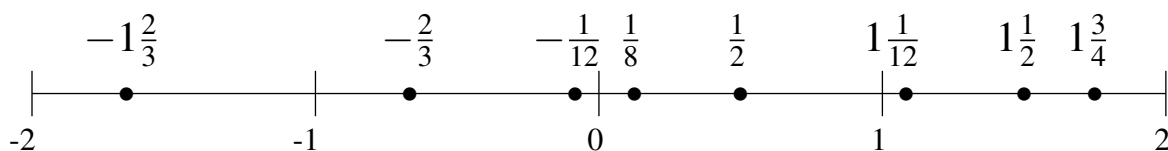
$$-1\frac{1}{2}, \frac{1}{4}, -\frac{5}{6}, 1\frac{1}{2}, 1\frac{1}{6}, \frac{1}{2}, \frac{7}{8}, -\frac{1}{2}$$

$$-1\frac{1}{2}, -\frac{5}{6}, -\frac{1}{2}, \frac{1}{4}, \frac{1}{2}, \frac{7}{8}, 1\frac{1}{6}, 1\frac{1}{2}$$



$$1\frac{3}{4}, \frac{1}{8}, -1\frac{2}{3}, 1\frac{1}{12}, \frac{1}{2}, -\frac{2}{3}, 1\frac{1}{2}, -\frac{1}{12}$$

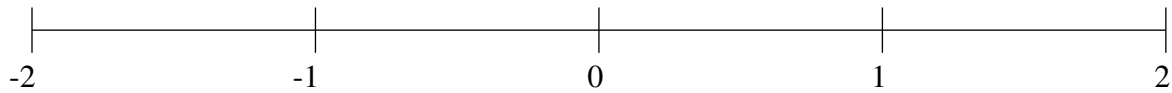
$$-1\frac{2}{3}, -\frac{2}{3}, -\frac{1}{12}, \frac{1}{8}, \frac{1}{2}, 1\frac{1}{12}, 1\frac{1}{2}, 1\frac{3}{4}$$



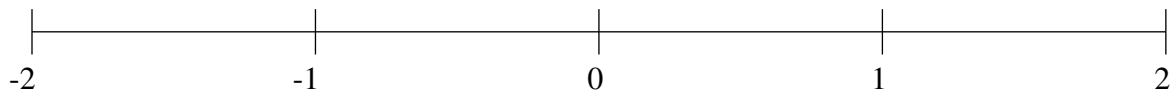
Ordenar Fracciones (J)

Ordene cada conjunto de fracciones usando la recta numérica.

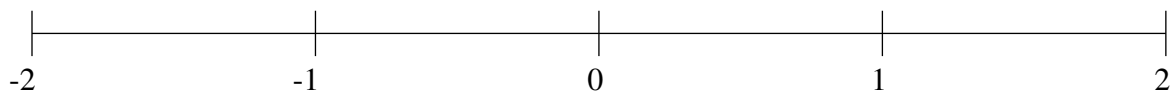
$$-1\frac{1}{2}, 1\frac{1}{2}, -\frac{1}{12}, -\frac{1}{2}, -1\frac{1}{4}, \frac{3}{4}, -1\frac{3}{4}, 1\frac{1}{4}$$



$$-1\frac{7}{8}, \frac{1}{8}, -\frac{1}{3}, -1\frac{2}{3}, -\frac{5}{8}, 1\frac{1}{8}, 1\frac{1}{3}, -1\frac{1}{3}$$



$$-1\frac{1}{6}, 1\frac{1}{2}, -\frac{1}{8}, -\frac{2}{3}, \frac{1}{4}, -1\frac{3}{8}, \frac{3}{4}, \frac{1}{2}$$

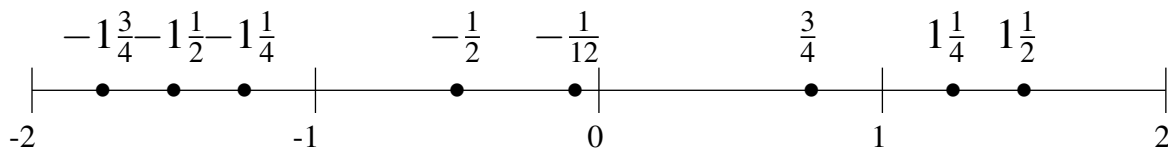


Ordenar Fracciones (J) Respuestas

Ordene cada conjunto de fracciones usando la recta numérica.

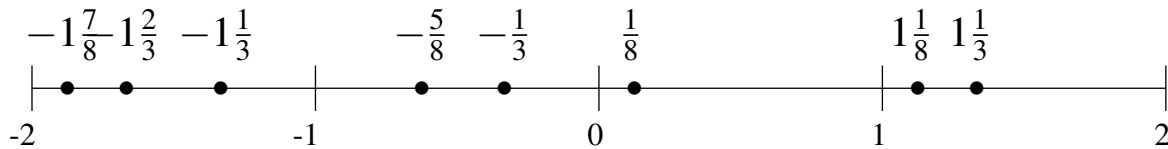
$$-1\frac{1}{2}, 1\frac{1}{2}, -\frac{1}{12}, -\frac{1}{2}, -1\frac{1}{4}, \frac{3}{4}, -1\frac{3}{4}, 1\frac{1}{4}$$

$$-1\frac{3}{4}, -1\frac{1}{2}, -1\frac{1}{4}, -\frac{1}{2}, -\frac{1}{12}, \frac{3}{4}, 1\frac{1}{4}, 1\frac{1}{2}$$



$$-1\frac{7}{8}, \frac{1}{8}, -\frac{1}{3}, -1\frac{2}{3}, -\frac{5}{8}, 1\frac{1}{8}, 1\frac{1}{3}, -1\frac{1}{3}$$

$$-1\frac{7}{8}, -1\frac{2}{3}, -1\frac{1}{3}, -\frac{5}{8}, -\frac{1}{3}, \frac{1}{8}, 1\frac{1}{8}, 1\frac{1}{3}$$



$$-1\frac{1}{6}, 1\frac{1}{2}, -\frac{1}{8}, -\frac{2}{3}, \frac{1}{4}, -1\frac{3}{8}, \frac{3}{4}, \frac{1}{2}$$

$$-1\frac{3}{8}, -1\frac{1}{6}, -\frac{2}{3}, -\frac{1}{8}, \frac{1}{4}, \frac{1}{2}, \frac{3}{4}, 1\frac{1}{2}$$

