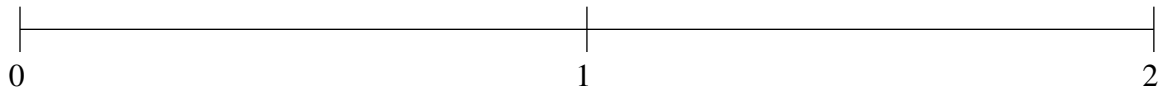


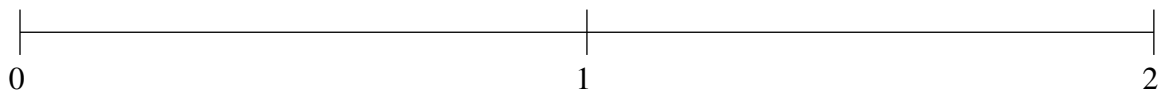
Ordenar Fracciones (A)

Ordene cada conjunto de fracciones usando la recta numérica.

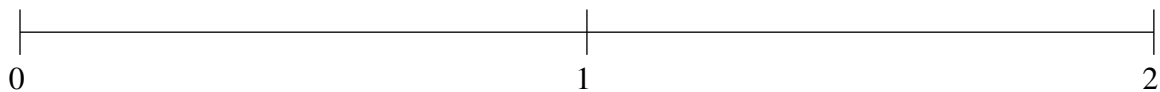
$$\frac{1}{3}, \frac{1}{12}, 1\frac{3}{4}, 1\frac{1}{4}, \frac{2}{3}$$



$$\frac{2}{3}, 1\frac{1}{3}, 1\frac{1}{8}, 1\frac{5}{6}, \frac{1}{3}$$



$$1\frac{1}{2}, \frac{5}{12}, 1\frac{3}{4}, 1\frac{1}{4}, \frac{5}{8}$$

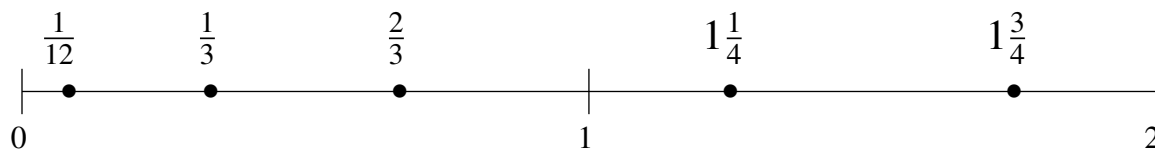


Ordenar Fracciones (A) Respuestas

Ordene cada conjunto de fracciones usando la recta numérica.

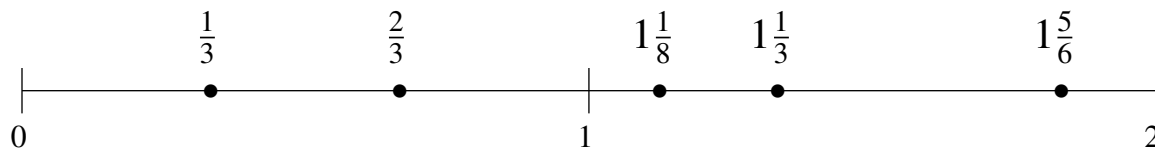
$$\frac{1}{3}, \frac{1}{12}, 1\frac{3}{4}, 1\frac{1}{4}, \frac{2}{3}$$

$$\frac{1}{12}, \frac{1}{3}, \frac{2}{3}, 1\frac{1}{4}, 1\frac{3}{4}$$



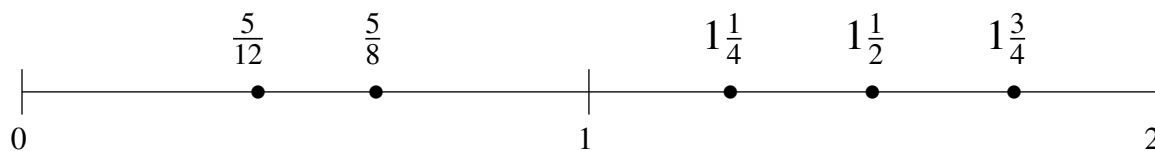
$$\frac{2}{3}, 1\frac{1}{3}, 1\frac{1}{8}, 1\frac{5}{6}, \frac{1}{3}$$

$$\frac{1}{3}, \frac{2}{3}, 1\frac{1}{8}, 1\frac{1}{3}, 1\frac{5}{6}$$



$$1\frac{1}{2}, \frac{5}{12}, 1\frac{3}{4}, 1\frac{1}{4}, \frac{5}{8}$$

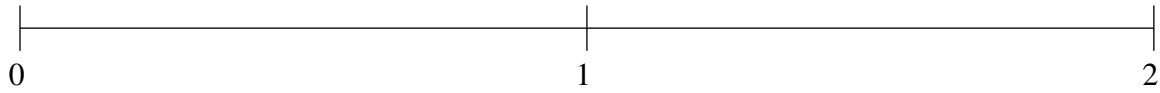
$$\frac{5}{12}, \frac{5}{8}, 1\frac{1}{4}, 1\frac{1}{2}, 1\frac{3}{4}$$



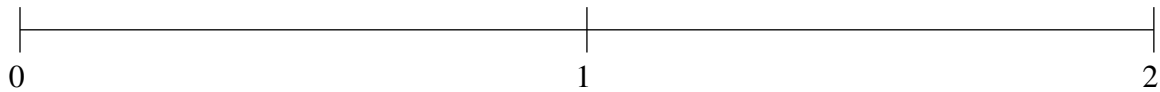
Ordenar Fracciones (B)

Ordene cada conjunto de fracciones usando la recta numérica.

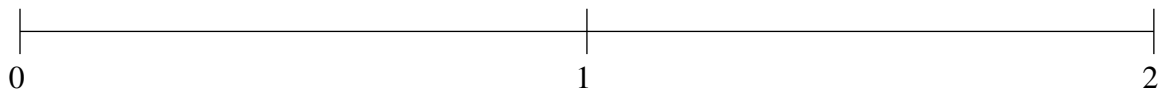
$$\frac{1}{4}, 1\frac{3}{4}, \frac{1}{2}, 1\frac{1}{12}, 1\frac{1}{2}$$



$$\frac{5}{6}, \frac{1}{2}, 1\frac{2}{3}, \frac{1}{6}, 1\frac{1}{3}$$



$$1\frac{1}{6}, 1\frac{1}{2}, \frac{1}{2}, 1\frac{3}{4}, \frac{3}{4}$$

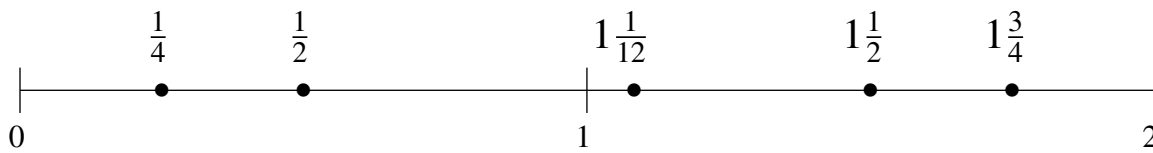


Ordenar Fracciones (B) Respuestas

Ordene cada conjunto de fracciones usando la recta numérica.

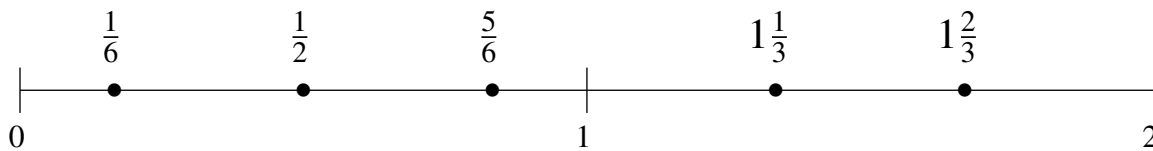
$$\frac{1}{4}, 1\frac{3}{4}, \frac{1}{2}, 1\frac{1}{12}, 1\frac{1}{2}$$

$$\frac{1}{4}, \frac{1}{2}, 1\frac{1}{12}, 1\frac{1}{2}, 1\frac{3}{4}$$



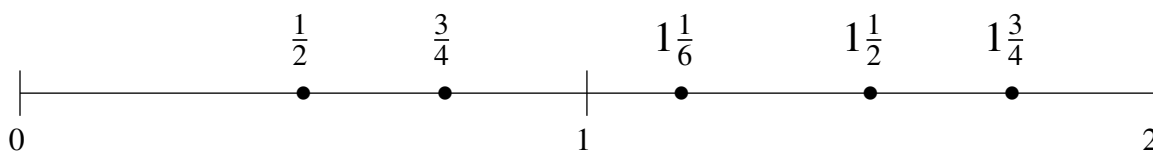
$$\frac{5}{6}, \frac{1}{2}, 1\frac{2}{3}, \frac{1}{6}, 1\frac{1}{3}$$

$$\frac{1}{6}, \frac{1}{2}, \frac{5}{6}, 1\frac{1}{3}, 1\frac{2}{3}$$



$$1\frac{1}{6}, 1\frac{1}{2}, \frac{1}{2}, 1\frac{3}{4}, \frac{3}{4}$$

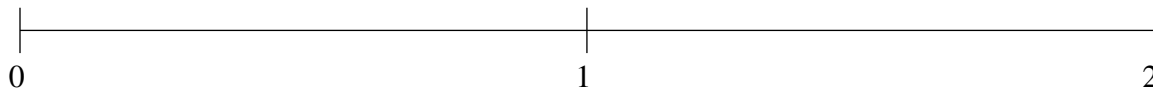
$$\frac{1}{2}, \frac{3}{4}, 1\frac{1}{6}, 1\frac{1}{2}, 1\frac{3}{4}$$



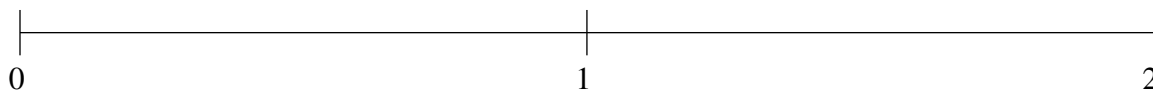
Ordenar Fracciones (C)

Ordene cada conjunto de fracciones usando la recta numérica.

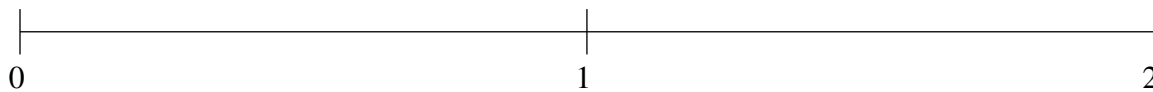
$$1\frac{1}{6}, 1\frac{3}{4}, \frac{1}{2}, 1\frac{1}{2}, \frac{5}{6}$$



$$1\frac{3}{4}, \frac{3}{8}, 1\frac{1}{6}, \frac{3}{4}, 1\frac{1}{2}$$



$$\frac{3}{4}, \frac{5}{24}, 1\frac{1}{2}, \frac{1}{2}, 1\frac{1}{4}$$

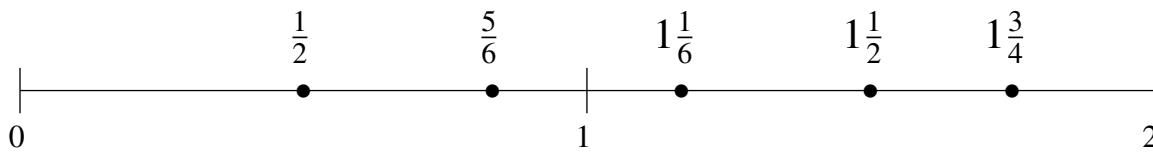


Ordenar Fracciones (C) Respuestas

Ordene cada conjunto de fracciones usando la recta numérica.

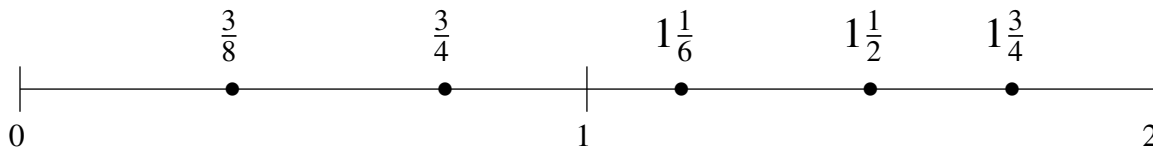
$$1\frac{1}{6}, 1\frac{3}{4}, \frac{1}{2}, 1\frac{1}{2}, \frac{5}{6}$$

$$\frac{1}{2}, \frac{5}{6}, 1\frac{1}{6}, 1\frac{1}{2}, 1\frac{3}{4}$$



$$1\frac{3}{4}, \frac{3}{8}, 1\frac{1}{6}, \frac{3}{4}, 1\frac{1}{2}$$

$$\frac{3}{8}, \frac{3}{4}, 1\frac{1}{6}, 1\frac{1}{2}, 1\frac{3}{4}$$



$$\frac{3}{4}, \frac{5}{24}, 1\frac{1}{2}, \frac{1}{2}, 1\frac{1}{4}$$

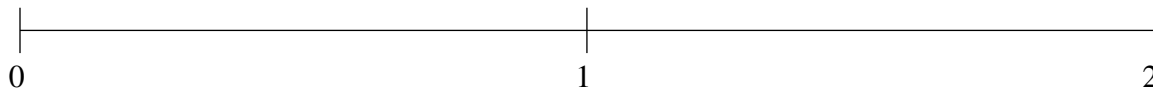
$$\frac{5}{24}, \frac{1}{2}, \frac{3}{4}, 1\frac{1}{4}, 1\frac{1}{2}$$



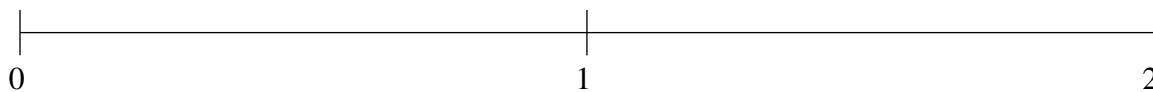
Ordenar Fracciones (D)

Ordene cada conjunto de fracciones usando la recta numérica.

$$\frac{1}{8}, \frac{1}{3}, 1\frac{1}{2}, 1\frac{1}{6}, \frac{5}{6}$$



$$\frac{7}{8}, 1\frac{1}{2}, 1\frac{1}{6}, \frac{1}{3}, 1\frac{3}{4}$$



$$\frac{1}{3}, \frac{1}{12}, \frac{2}{3}, 1\frac{1}{3}, 1\frac{2}{3}$$



Ordenar Fracciones (D) Respuestas

Ordene cada conjunto de fracciones usando la recta numérica.

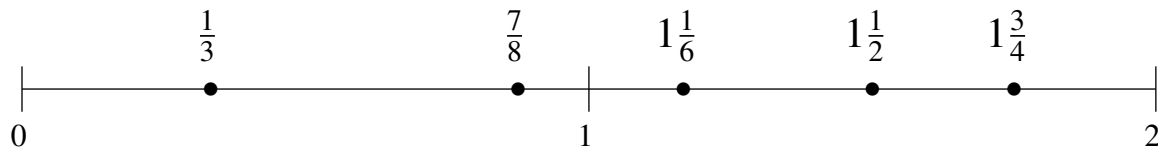
$$\frac{1}{8}, \frac{1}{3}, 1\frac{1}{2}, 1\frac{1}{6}, \frac{5}{6}$$

$$\frac{1}{8}, \frac{1}{3}, \frac{5}{6}, 1\frac{1}{6}, 1\frac{1}{2}$$



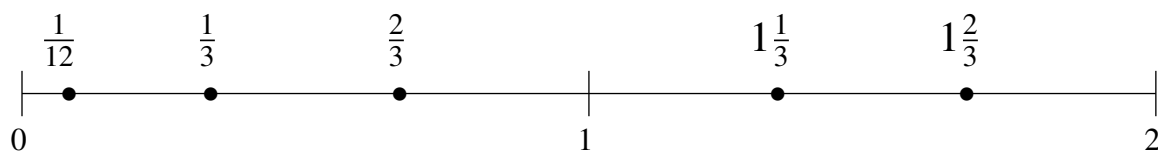
$$\frac{7}{8}, 1\frac{1}{2}, 1\frac{1}{6}, \frac{1}{3}, 1\frac{3}{4}$$

$$\frac{1}{3}, \frac{7}{8}, 1\frac{1}{6}, 1\frac{1}{2}, 1\frac{3}{4}$$



$$\frac{1}{3}, \frac{1}{12}, \frac{2}{3}, 1\frac{1}{3}, 1\frac{2}{3}$$

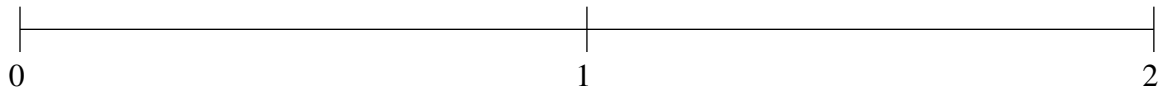
$$\frac{1}{12}, \frac{1}{3}, \frac{2}{3}, 1\frac{1}{3}, 1\frac{2}{3}$$



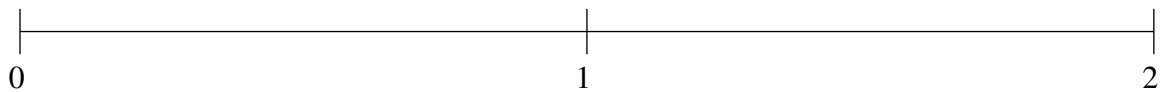
Ordenar Fracciones (E)

Ordene cada conjunto de fracciones usando la recta numérica.

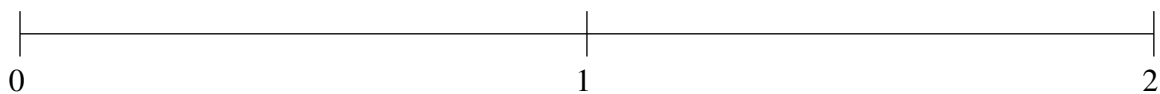
$$\frac{11}{12}, 1\frac{1}{4}, \frac{1}{8}, 1\frac{1}{2}, \frac{1}{2}$$



$$\frac{11}{12}, 1\frac{3}{4}, 1\frac{1}{3}, \frac{1}{4}, \frac{2}{3}$$



$$1\frac{1}{2}, 1\frac{3}{4}, \frac{5}{6}, \frac{1}{4}, 1\frac{1}{4}$$

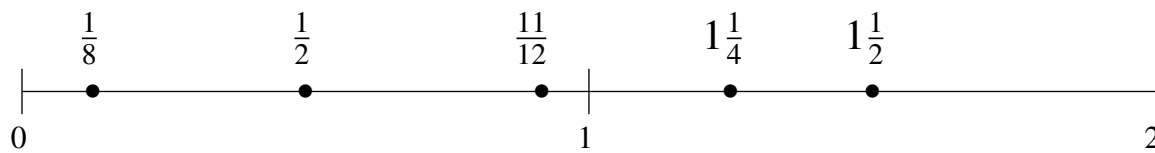


Ordenar Fracciones (E) Respuestas

Ordene cada conjunto de fracciones usando la recta numérica.

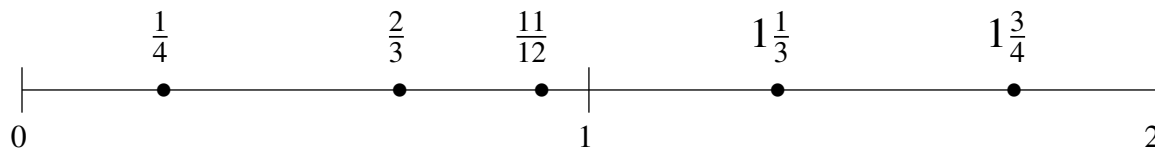
$$\frac{11}{12}, 1\frac{1}{4}, \frac{1}{8}, 1\frac{1}{2}, \frac{1}{2}$$

$$\frac{1}{8}, \frac{1}{2}, \frac{11}{12}, 1\frac{1}{4}, 1\frac{1}{2}$$



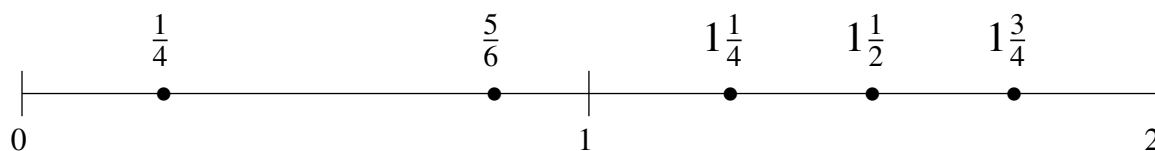
$$\frac{11}{12}, 1\frac{3}{4}, 1\frac{1}{3}, \frac{1}{4}, \frac{2}{3}$$

$$\frac{1}{4}, \frac{2}{3}, \frac{11}{12}, 1\frac{1}{3}, 1\frac{3}{4}$$



$$1\frac{1}{2}, 1\frac{3}{4}, \frac{5}{6}, \frac{1}{4}, 1\frac{1}{4}$$

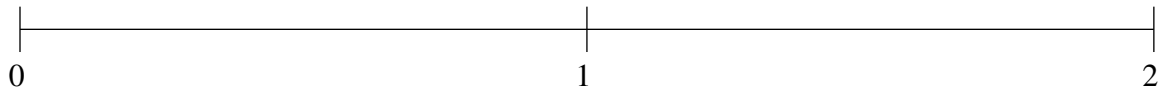
$$\frac{1}{4}, \frac{5}{6}, 1\frac{1}{4}, 1\frac{1}{2}, 1\frac{3}{4}$$



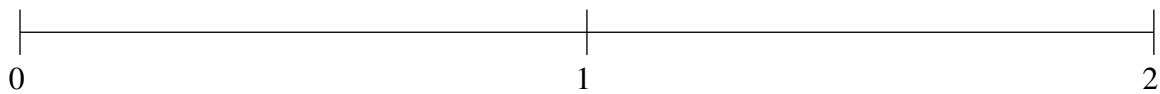
Ordenar Fracciones (F)

Ordene cada conjunto de fracciones usando la recta numérica.

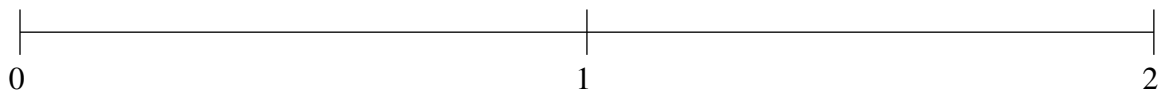
$$\frac{1}{4}, \frac{7}{8}, 1\frac{2}{3}, 1\frac{1}{6}, 1\frac{7}{8}$$



$$\frac{1}{3}, \frac{2}{3}, 1\frac{1}{4}, 1\frac{1}{2}, 1\frac{5}{6}$$



$$1\frac{5}{6}, 1\frac{1}{6}, \frac{1}{3}, 1\frac{1}{2}, \frac{5}{6}$$

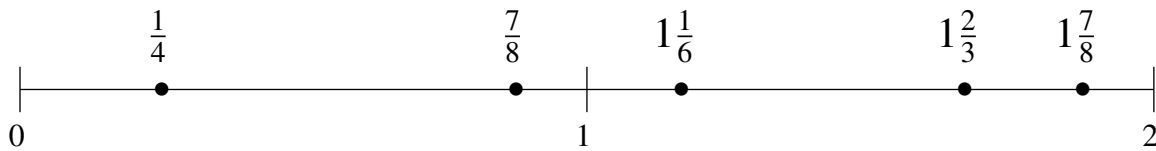


Ordenar Fracciones (F) Respuestas

Ordene cada conjunto de fracciones usando la recta numérica.

$$\frac{1}{4}, \frac{7}{8}, 1\frac{2}{3}, 1\frac{1}{6}, 1\frac{7}{8}$$

$$\frac{1}{4}, \frac{7}{8}, 1\frac{1}{6}, 1\frac{2}{3}, 1\frac{7}{8}$$



$$\frac{1}{3}, \frac{2}{3}, 1\frac{1}{4}, 1\frac{1}{2}, 1\frac{5}{6}$$

$$\frac{1}{3}, \frac{2}{3}, 1\frac{1}{4}, 1\frac{1}{2}, 1\frac{5}{6}$$



$$1\frac{5}{6}, 1\frac{1}{6}, \frac{1}{3}, 1\frac{1}{2}, \frac{5}{6}$$

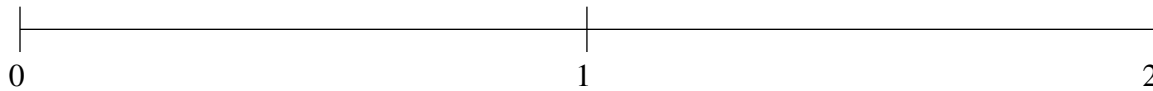
$$\frac{1}{3}, \frac{5}{6}, 1\frac{1}{6}, 1\frac{1}{2}, 1\frac{5}{6}$$



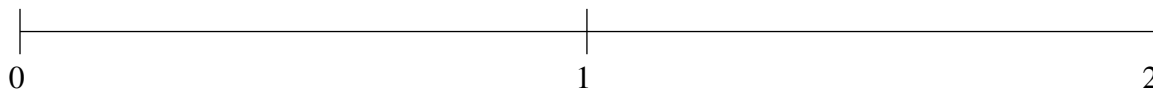
Ordenar Fracciones (G)

Ordene cada conjunto de fracciones usando la recta numérica.

$$\frac{1}{12}, 1\frac{2}{3}, \frac{3}{8}, \frac{2}{3}, 1\frac{1}{6}$$



$$\frac{1}{4}, 1\frac{1}{6}, 1\frac{3}{4}, 1\frac{1}{2}, \frac{2}{3}$$



$$1\frac{5}{6}, \frac{1}{8}, \frac{1}{3}, 1\frac{1}{2}, \frac{2}{3}$$

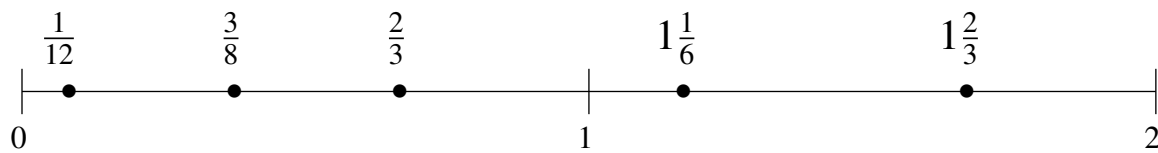


Ordenar Fracciones (G) Respuestas

Ordene cada conjunto de fracciones usando la recta numérica.

$$\frac{1}{12}, 1\frac{2}{3}, \frac{3}{8}, \frac{2}{3}, 1\frac{1}{6}$$

$$\frac{1}{12}, \frac{3}{8}, \frac{2}{3}, 1\frac{1}{6}, 1\frac{2}{3}$$



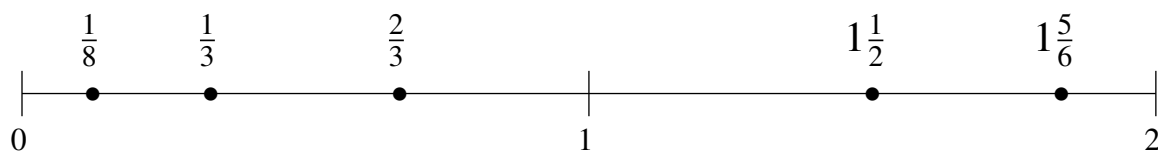
$$\frac{1}{4}, 1\frac{1}{6}, 1\frac{3}{4}, 1\frac{1}{2}, \frac{2}{3}$$

$$\frac{1}{4}, \frac{2}{3}, 1\frac{1}{6}, 1\frac{1}{2}, 1\frac{3}{4}$$



$$1\frac{5}{6}, \frac{1}{8}, \frac{1}{3}, 1\frac{1}{2}, \frac{2}{3}$$

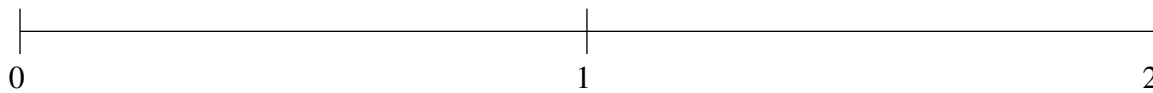
$$\frac{1}{8}, \frac{1}{3}, \frac{2}{3}, 1\frac{1}{2}, 1\frac{5}{6}$$



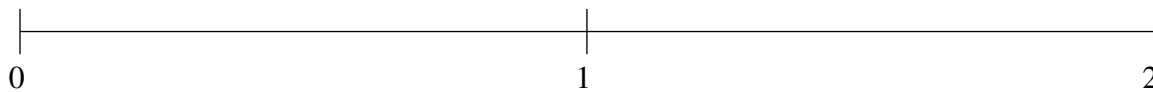
Ordenar Fracciones (H)

Ordene cada conjunto de fracciones usando la recta numérica.

$$\frac{1}{3}, 1\frac{1}{2}, 1\frac{1}{6}, 1\frac{3}{4}, \frac{3}{4}$$



$$\frac{1}{2}, \frac{3}{4}, \frac{1}{8}, 1\frac{1}{3}, 1\frac{2}{3}$$



$$1\frac{5}{6}, 1\frac{1}{2}, \frac{11}{12}, \frac{1}{4}, \frac{5}{8}$$

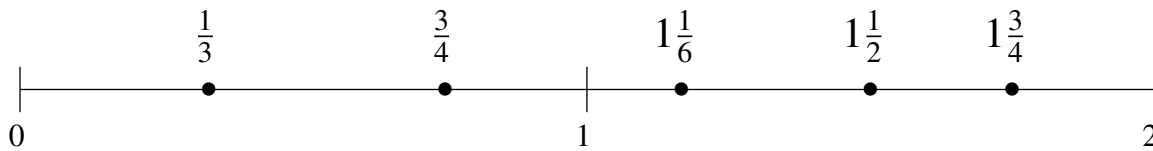


Ordenar Fracciones (H) Respuestas

Ordene cada conjunto de fracciones usando la recta numérica.

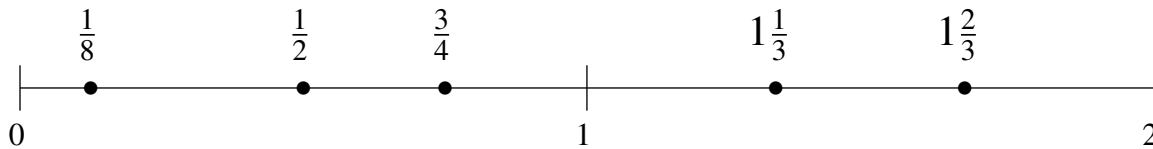
$$\frac{1}{3}, 1\frac{1}{2}, 1\frac{1}{6}, 1\frac{3}{4}, \frac{3}{4}$$

$$\frac{1}{3}, \frac{3}{4}, 1\frac{1}{6}, 1\frac{1}{2}, 1\frac{3}{4}$$



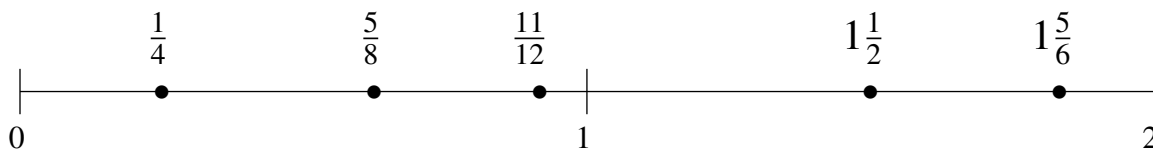
$$\frac{1}{2}, \frac{3}{4}, \frac{1}{8}, 1\frac{1}{3}, 1\frac{2}{3}$$

$$\frac{1}{8}, \frac{1}{2}, \frac{3}{4}, 1\frac{1}{3}, 1\frac{2}{3}$$



$$1\frac{5}{6}, 1\frac{1}{2}, \frac{11}{12}, \frac{1}{4}, \frac{5}{8}$$

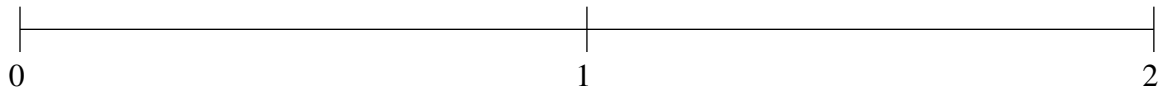
$$\frac{1}{4}, \frac{5}{8}, \frac{11}{12}, 1\frac{1}{2}, 1\frac{5}{6}$$



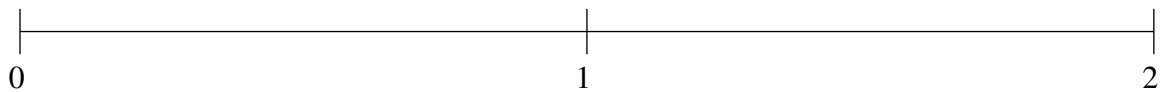
Ordenar Fracciones (I)

Ordene cada conjunto de fracciones usando la recta numérica.

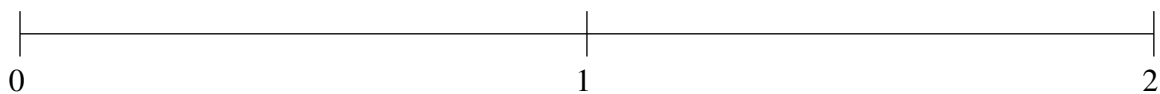
$$1\frac{1}{8}, \frac{1}{4}, 1\frac{1}{3}, \frac{1}{2}, \frac{3}{4}$$



$$1\frac{1}{8}, 1\frac{7}{8}, 1\frac{2}{3}, \frac{1}{4}, 1\frac{1}{3}$$



$$\frac{2}{3}, 1\frac{5}{6}, 1\frac{1}{2}, \frac{1}{3}, 1\frac{1}{6}$$

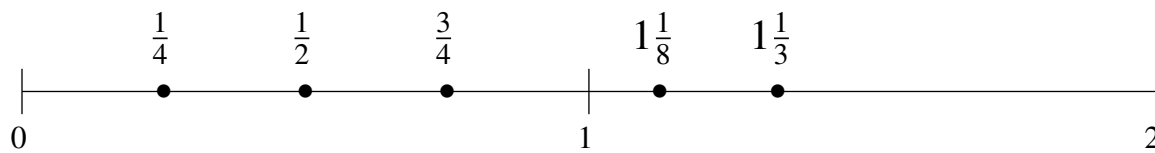


Ordenar Fracciones (I) Respuestas

Ordene cada conjunto de fracciones usando la recta numérica.

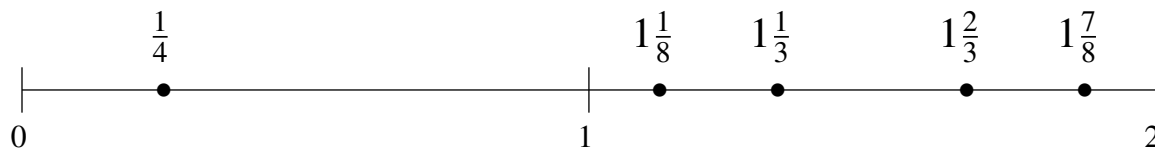
$$1\frac{1}{8}, \frac{1}{4}, 1\frac{1}{3}, \frac{1}{2}, \frac{3}{4}$$

$$\frac{1}{4}, \frac{1}{2}, \frac{3}{4}, 1\frac{1}{8}, 1\frac{1}{3}$$



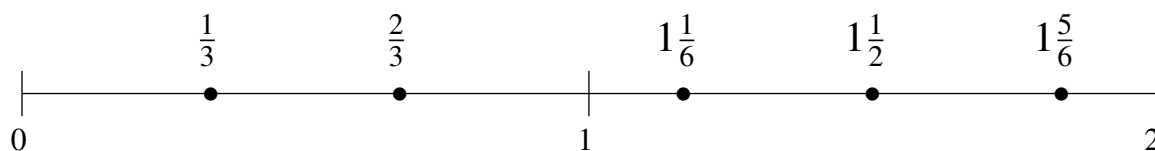
$$1\frac{1}{8}, 1\frac{7}{8}, 1\frac{2}{3}, \frac{1}{4}, 1\frac{1}{3}$$

$$\frac{1}{4}, 1\frac{1}{8}, 1\frac{1}{3}, 1\frac{2}{3}, 1\frac{7}{8}$$



$$\frac{2}{3}, 1\frac{5}{6}, 1\frac{1}{2}, \frac{1}{3}, 1\frac{1}{6}$$

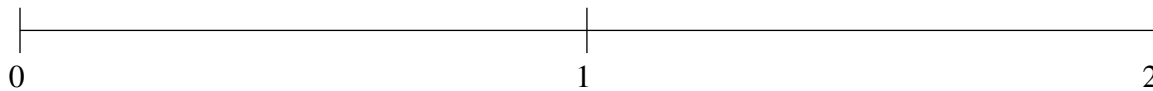
$$\frac{1}{3}, \frac{2}{3}, 1\frac{1}{6}, 1\frac{1}{2}, 1\frac{5}{6}$$



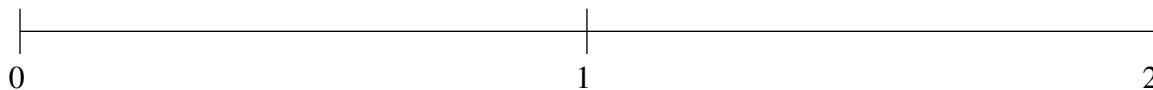
Ordenar Fracciones (J)

Ordene cada conjunto de fracciones usando la recta numérica.

$$\frac{1}{4}, 1\frac{1}{3}, \frac{2}{3}, 1\frac{7}{8}, 1\frac{5}{8}$$



$$1\frac{1}{4}, 1\frac{7}{8}, 1\frac{2}{3}, \frac{5}{6}, \frac{7}{12}$$



$$\frac{1}{4}, 1\frac{1}{24}, 1\frac{1}{2}, 1\frac{1}{4}, \frac{2}{3}$$

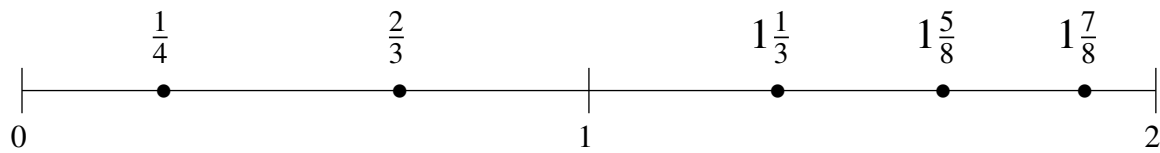


Ordenar Fracciones (J) Respuestas

Ordene cada conjunto de fracciones usando la recta numérica.

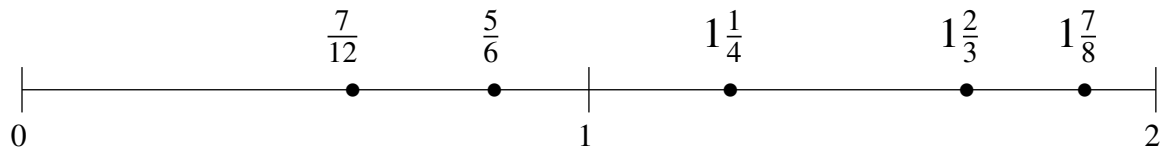
$$\frac{1}{4}, 1\frac{1}{3}, \frac{2}{3}, 1\frac{7}{8}, 1\frac{5}{8}$$

$$\frac{1}{4}, \frac{2}{3}, 1\frac{1}{3}, 1\frac{5}{8}, 1\frac{7}{8}$$



$$1\frac{1}{4}, 1\frac{7}{8}, 1\frac{2}{3}, \frac{5}{6}, \frac{7}{12}$$

$$\frac{7}{12}, \frac{5}{6}, 1\frac{1}{4}, 1\frac{2}{3}, 1\frac{7}{8}$$



$$\frac{1}{4}, 1\frac{1}{24}, 1\frac{1}{2}, 1\frac{1}{4}, \frac{2}{3}$$

$$\frac{1}{4}, \frac{2}{3}, 1\frac{1}{24}, 1\frac{1}{4}, 1\frac{1}{2}$$

