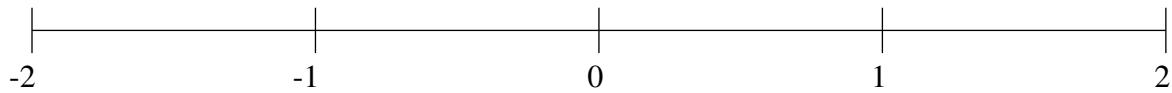


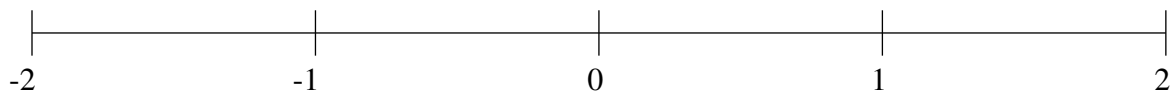
Ordenar Fracciones (E)

Ordene cada conjunto de fracciones usando la recta numérica.

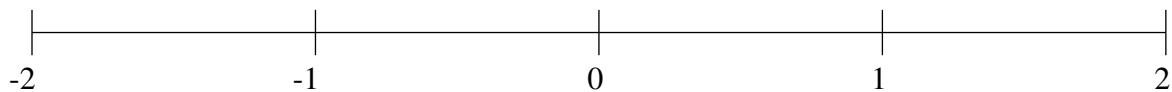
$$1\frac{7}{8}, -\frac{2}{3}, \frac{1}{3}, -1\frac{3}{11}, -\frac{16}{17}, -\frac{1}{7}, \frac{3}{5}, 1\frac{4}{11}$$



$$-\frac{2}{7}, \frac{1}{7}, -1\frac{7}{8}, -\frac{3}{5}, 1\frac{2}{3}, -1\frac{2}{3}, \frac{5}{7}, 1\frac{10}{11}$$



$$-\frac{1}{7}, 1\frac{2}{3}, -\frac{4}{5}, -1\frac{1}{3}, \frac{4}{11}, -\frac{1}{2}, 1\frac{3}{7}, \frac{6}{7}$$

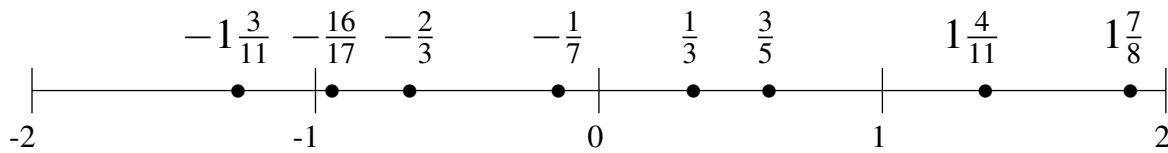


Ordenar Fracciones (E) Respuestas

Ordene cada conjunto de fracciones usando la recta numérica.

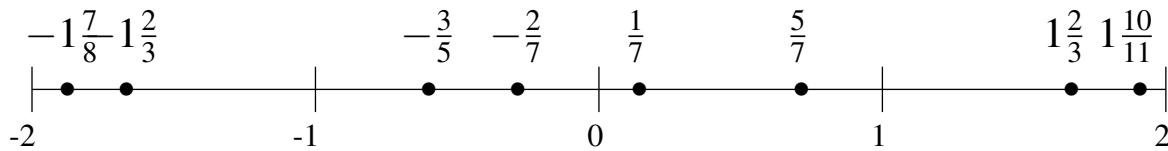
$$1\frac{7}{8}, -\frac{2}{3}, \frac{1}{3}, -1\frac{3}{11}, -\frac{16}{17}, -\frac{1}{7}, \frac{3}{5}, 1\frac{4}{11}$$

$$-1\frac{3}{11}, -\frac{16}{17}, -\frac{2}{3}, -\frac{1}{7}, \frac{1}{3}, \frac{3}{5}, 1\frac{4}{11}, 1\frac{7}{8}$$



$$-\frac{2}{7}, \frac{1}{7}, -1\frac{7}{8}, -\frac{3}{5}, 1\frac{2}{3}, -1\frac{2}{3}, \frac{5}{7}, 1\frac{10}{11}$$

$$-1\frac{7}{8}, -1\frac{2}{3}, -\frac{3}{5}, -\frac{2}{7}, \frac{1}{7}, \frac{5}{7}, 1\frac{2}{3}, 1\frac{10}{11}$$



$$-\frac{1}{7}, 1\frac{2}{3}, -\frac{4}{5}, -1\frac{1}{3}, \frac{4}{11}, -\frac{1}{2}, 1\frac{3}{7}, \frac{6}{7}$$

$$-1\frac{1}{3}, -\frac{4}{5}, -\frac{1}{2}, -\frac{1}{7}, \frac{4}{11}, \frac{6}{7}, 1\frac{3}{7}, 1\frac{2}{3}$$

