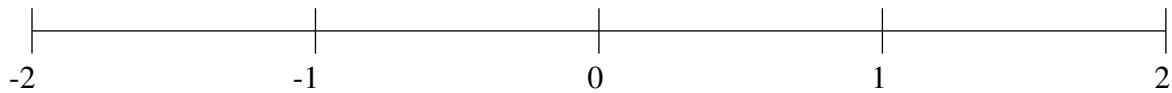


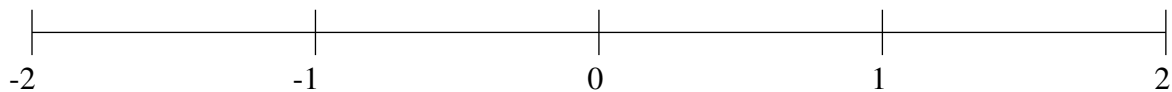
Ordenar Fracciones (I)

Ordene cada conjunto de fracciones usando la recta numérica.

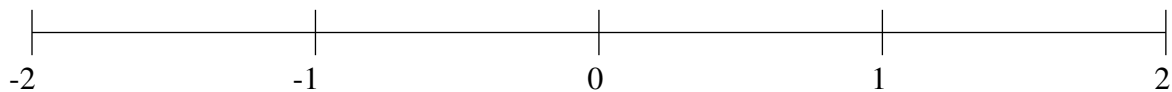
$$\frac{7}{9}, 1\frac{17}{18}, 1\frac{6}{13}, -1\frac{6}{7}, 1\frac{1}{7}, 1\frac{2}{3}, -\frac{7}{16}, -\frac{2}{3}$$



$$1\frac{4}{7}, -1\frac{19}{22}, \frac{2}{7}, -\frac{1}{5}, -1\frac{2}{5}, 1\frac{3}{11}, \frac{1}{2}, -\frac{4}{5}$$



$$-1\frac{17}{21}, \frac{1}{3}, \frac{4}{7}, \frac{1}{9}, -\frac{5}{13}, 1\frac{4}{5}, \frac{4}{5}, -1\frac{4}{9}$$

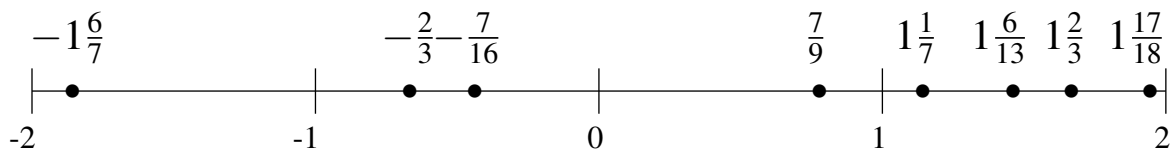


Ordenar Fracciones (I) Respuestas

Ordene cada conjunto de fracciones usando la recta numérica.

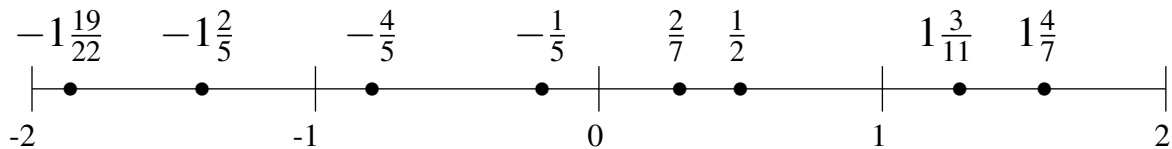
$$\frac{7}{9}, 1\frac{17}{18}, 1\frac{6}{13}, -1\frac{6}{7}, 1\frac{1}{7}, 1\frac{2}{3}, -\frac{7}{16}, -\frac{2}{3}$$

$$-1\frac{6}{7}, -\frac{2}{3}, -\frac{7}{16}, \frac{7}{9}, 1\frac{1}{7}, 1\frac{6}{13}, 1\frac{2}{3}, 1\frac{17}{18}$$



$$1\frac{4}{7}, -1\frac{19}{22}, \frac{2}{7}, -\frac{1}{5}, -1\frac{2}{5}, 1\frac{3}{11}, \frac{1}{2}, -\frac{4}{5}$$

$$-1\frac{19}{22}, -1\frac{2}{5}, -\frac{4}{5}, -\frac{1}{5}, \frac{2}{7}, \frac{1}{2}, 1\frac{3}{11}, 1\frac{4}{7}$$



$$-1\frac{17}{21}, \frac{1}{3}, \frac{4}{7}, \frac{1}{9}, -\frac{5}{13}, 1\frac{4}{5}, \frac{4}{5}, -1\frac{4}{9}$$

$$-1\frac{17}{21}, -1\frac{4}{9}, -\frac{5}{13}, \frac{1}{9}, \frac{1}{3}, \frac{4}{7}, \frac{4}{5}, 1\frac{4}{5}$$

