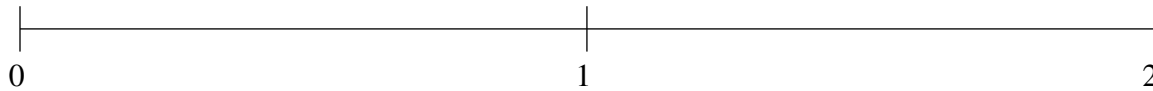


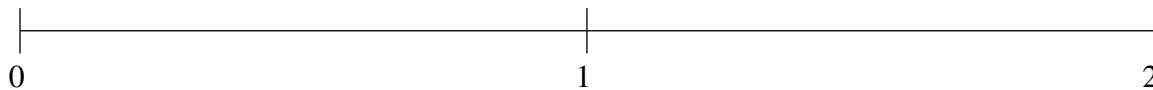
Ordenar Fracciones (A)

Ordene cada conjunto de fracciones usando la recta numérica.

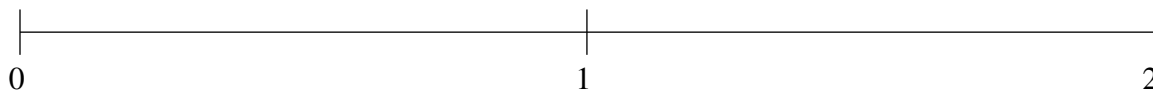
$$\frac{8}{9}, 1\frac{1}{7}, 1\frac{5}{6}, 1\frac{1}{2}, \frac{8}{19}$$



$$1\frac{2}{15}, \frac{1}{5}, 1\frac{1}{2}, \frac{3}{4}, 1\frac{8}{11}$$



$$1\frac{1}{4}, \frac{4}{5}, 1\frac{7}{9}, 1\frac{1}{2}, \frac{1}{2}$$

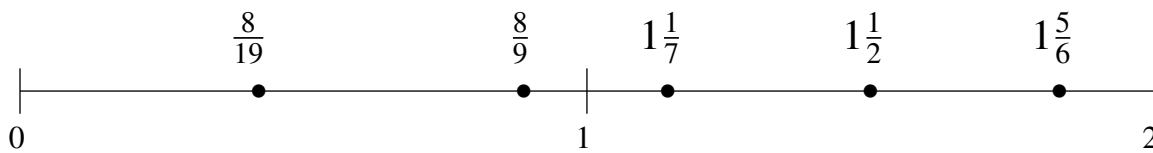


Ordenar Fracciones (A) Respuestas

Ordene cada conjunto de fracciones usando la recta numérica.

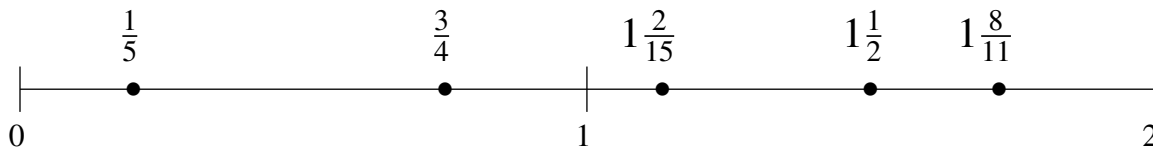
$$\frac{8}{9}, 1\frac{1}{7}, 1\frac{5}{6}, 1\frac{1}{2}, \frac{8}{19}$$

$$\frac{8}{19}, \frac{8}{9}, 1\frac{1}{7}, 1\frac{1}{2}, 1\frac{5}{6}$$



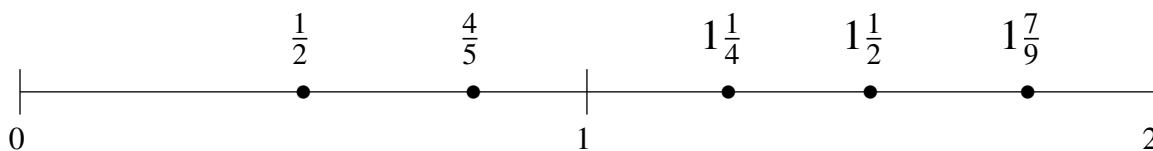
$$1\frac{2}{15}, \frac{1}{5}, 1\frac{1}{2}, \frac{3}{4}, 1\frac{8}{11}$$

$$\frac{1}{5}, \frac{3}{4}, 1\frac{2}{15}, 1\frac{1}{2}, 1\frac{8}{11}$$



$$1\frac{1}{4}, \frac{4}{5}, 1\frac{7}{9}, 1\frac{1}{2}, \frac{1}{2}$$

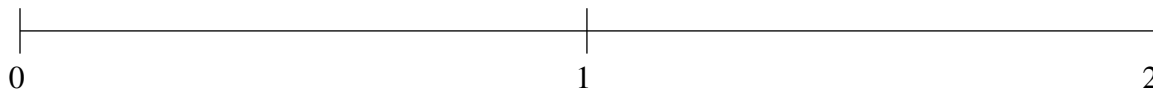
$$\frac{1}{2}, \frac{4}{5}, 1\frac{1}{4}, 1\frac{1}{2}, 1\frac{7}{9}$$



Ordenar Fracciones (B)

Ordene cada conjunto de fracciones usando la recta numérica.

$$\frac{1}{2}, 1\frac{1}{7}, \frac{16}{19}, \frac{1}{16}, 1\frac{2}{3}$$



$$\frac{1}{5}, \frac{1}{2}, 1\frac{4}{5}, \frac{11}{13}, 1\frac{1}{6}$$



$$1\frac{1}{3}, 1\frac{5}{8}, \frac{5}{6}, \frac{1}{7}, \frac{1}{2}$$

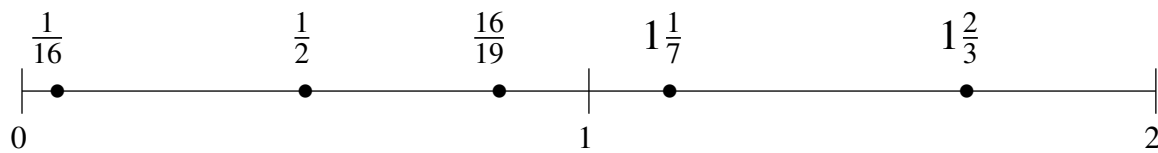


Ordenar Fracciones (B) Respuestas

Ordene cada conjunto de fracciones usando la recta numérica.

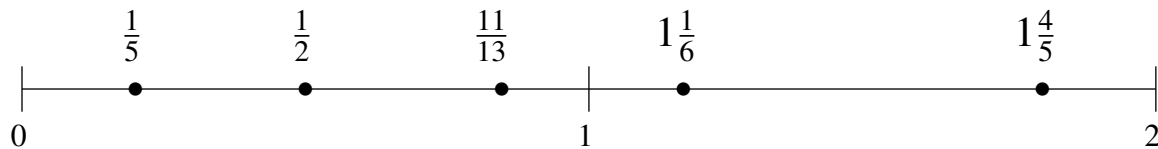
$$\frac{1}{2}, 1\frac{1}{7}, \frac{16}{19}, \frac{1}{16}, 1\frac{2}{3}$$

$$\frac{1}{16}, \frac{1}{2}, \frac{16}{19}, 1\frac{1}{7}, 1\frac{2}{3}$$



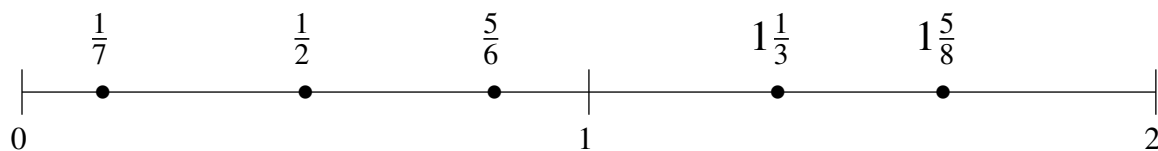
$$\frac{1}{5}, \frac{1}{2}, 1\frac{4}{5}, \frac{11}{13}, 1\frac{1}{6}$$

$$\frac{1}{5}, \frac{1}{2}, \frac{11}{13}, 1\frac{1}{6}, 1\frac{4}{5}$$



$$1\frac{1}{3}, 1\frac{5}{8}, \frac{5}{6}, \frac{1}{7}, \frac{1}{2}$$

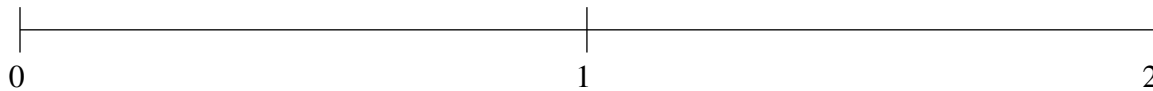
$$\frac{1}{7}, \frac{1}{2}, \frac{5}{6}, 1\frac{1}{3}, 1\frac{5}{8}$$



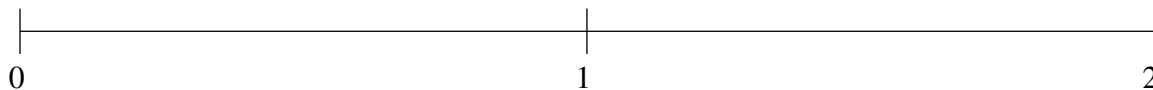
Ordenar Fracciones (C)

Ordene cada conjunto de fracciones usando la recta numérica.

$$1\frac{1}{2}, 1\frac{2}{9}, 1\frac{7}{8}, \frac{4}{17}, \frac{12}{19}$$



$$1\frac{1}{6}, \frac{1}{6}, 1\frac{8}{9}, 1\frac{3}{5}, \frac{5}{12}$$



$$\frac{7}{11}, 1\frac{19}{22}, 1\frac{1}{6}, 1\frac{3}{7}, \frac{2}{5}$$

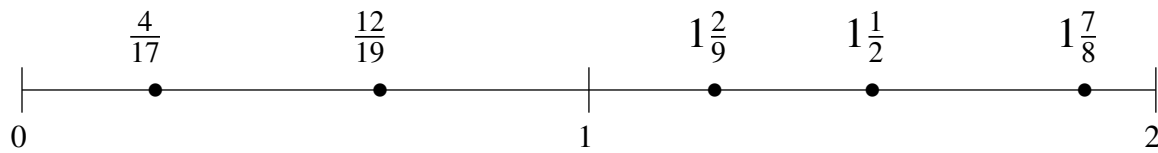


Ordenar Fracciones (C) Respuestas

Ordene cada conjunto de fracciones usando la recta numérica.

$$1\frac{1}{2}, 1\frac{2}{9}, 1\frac{7}{8}, \frac{4}{17}, \frac{12}{19}$$

$$\frac{4}{17}, \frac{12}{19}, 1\frac{2}{9}, 1\frac{1}{2}, 1\frac{7}{8}$$



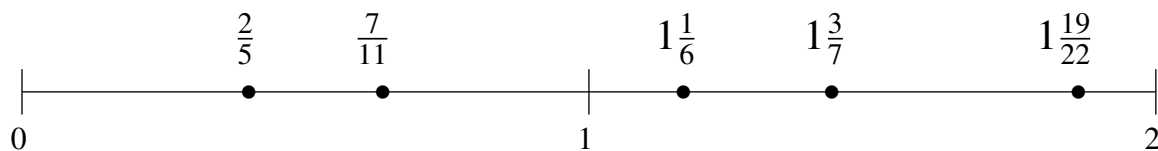
$$1\frac{1}{6}, \frac{1}{6}, 1\frac{8}{9}, 1\frac{3}{5}, \frac{5}{12}$$

$$\frac{1}{6}, \frac{5}{12}, 1\frac{1}{6}, 1\frac{3}{5}, 1\frac{8}{9}$$



$$\frac{7}{11}, 1\frac{19}{22}, 1\frac{1}{6}, 1\frac{3}{7}, \frac{2}{5}$$

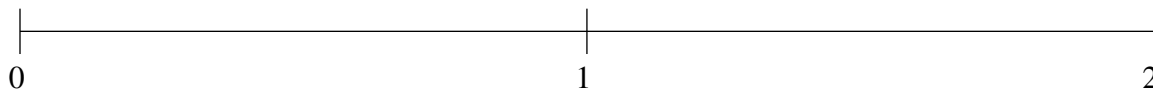
$$\frac{2}{5}, \frac{7}{11}, 1\frac{1}{6}, 1\frac{3}{7}, 1\frac{19}{22}$$



Ordenar Fracciones (D)

Ordene cada conjunto de fracciones usando la recta numérica.

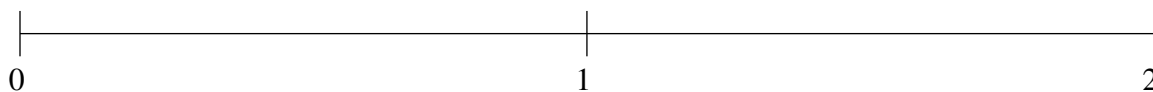
$$1\frac{1}{6}, \frac{3}{4}, 1\frac{2}{3}, \frac{3}{17}, \frac{7}{16}$$



$$1\frac{8}{9}, 1\frac{1}{2}, \frac{9}{10}, \frac{1}{2}, \frac{1}{7}$$



$$1\frac{2}{7}, \frac{10}{11}, 1\frac{4}{5}, 1\frac{1}{2}, \frac{3}{5}$$

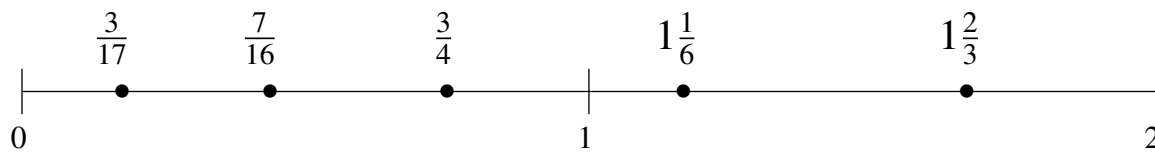


Ordenar Fracciones (D) Respuestas

Ordene cada conjunto de fracciones usando la recta numérica.

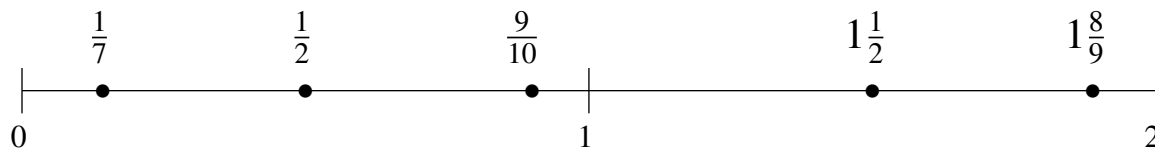
$$1\frac{1}{6}, \frac{3}{4}, 1\frac{2}{3}, \frac{3}{17}, \frac{7}{16}$$

$$\frac{3}{17}, \frac{7}{16}, \frac{3}{4}, 1\frac{1}{6}, 1\frac{2}{3}$$



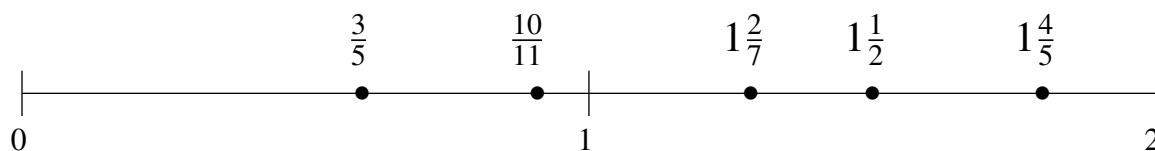
$$1\frac{8}{9}, 1\frac{1}{2}, \frac{9}{10}, \frac{1}{2}, \frac{1}{7}$$

$$\frac{1}{7}, \frac{1}{2}, \frac{9}{10}, 1\frac{1}{2}, 1\frac{8}{9}$$



$$1\frac{2}{7}, \frac{10}{11}, 1\frac{4}{5}, 1\frac{1}{2}, \frac{3}{5}$$

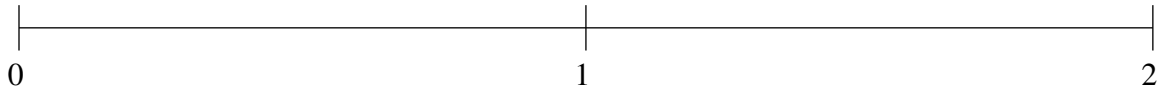
$$\frac{3}{5}, \frac{10}{11}, 1\frac{2}{7}, 1\frac{1}{2}, 1\frac{4}{5}$$



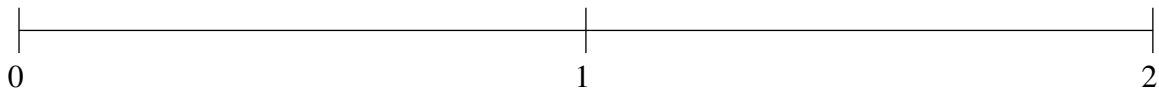
Ordenar Fracciones (E)

Ordene cada conjunto de fracciones usando la recta numérica.

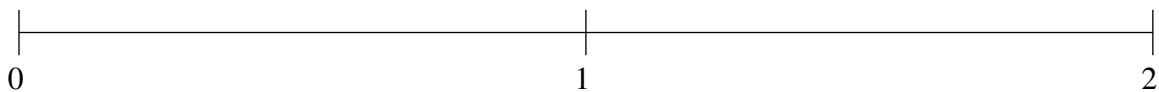
$$1\frac{4}{11}, 1\frac{2}{17}, \frac{4}{7}, \frac{2}{9}, 1\frac{7}{11}$$



$$\frac{12}{13}, \frac{1}{2}, 1\frac{3}{5}, 1\frac{6}{7}, 1\frac{3}{14}$$



$$1\frac{16}{17}, 1\frac{1}{3}, \frac{3}{4}, \frac{1}{3}, 1\frac{5}{9}$$

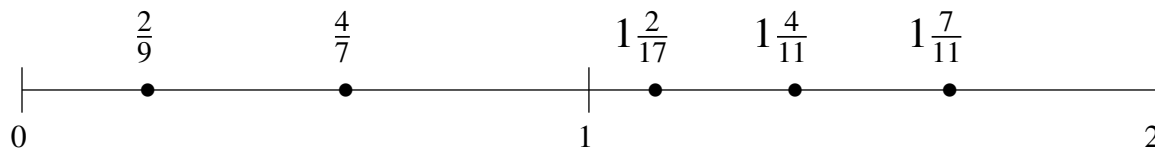


Ordenar Fracciones (E) Respuestas

Ordene cada conjunto de fracciones usando la recta numérica.

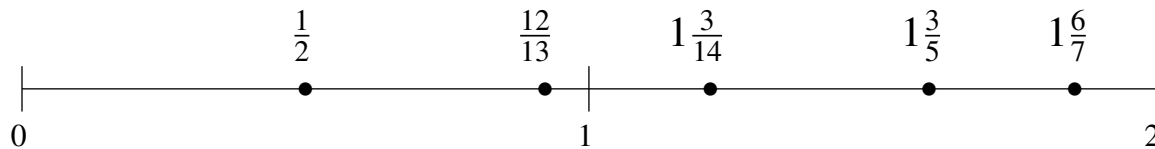
$$1\frac{4}{11}, 1\frac{2}{17}, \frac{4}{7}, \frac{2}{9}, 1\frac{7}{11}$$

$$\frac{2}{9}, \frac{4}{7}, 1\frac{2}{17}, 1\frac{4}{11}, 1\frac{7}{11}$$



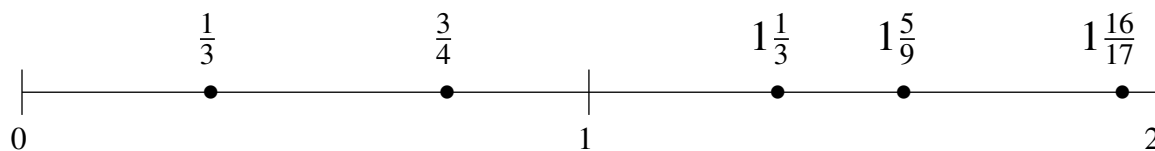
$$\frac{12}{13}, \frac{1}{2}, 1\frac{3}{5}, 1\frac{6}{7}, 1\frac{3}{14}$$

$$\frac{1}{2}, \frac{12}{13}, 1\frac{3}{14}, 1\frac{3}{5}, 1\frac{6}{7}$$



$$1\frac{16}{17}, 1\frac{1}{3}, \frac{3}{4}, \frac{1}{3}, 1\frac{5}{9}$$

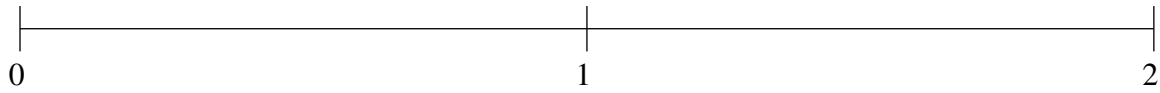
$$\frac{1}{3}, \frac{3}{4}, 1\frac{1}{3}, 1\frac{5}{9}, 1\frac{16}{17}$$



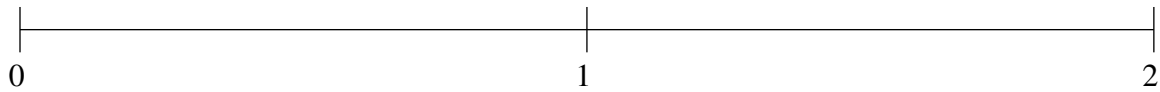
Ordenar Fracciones (F)

Ordene cada conjunto de fracciones usando la recta numérica.

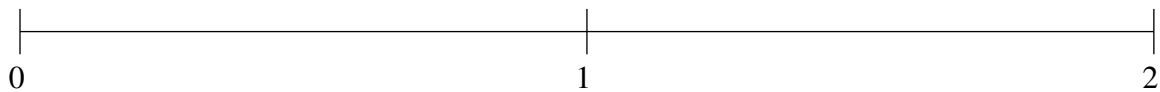
$$\frac{1}{4}, 1\frac{1}{2}, 1\frac{1}{7}, \frac{1}{2}, \frac{11}{12}$$



$$\frac{11}{23}, 1\frac{9}{10}, \frac{1}{4}, 1\frac{2}{3}, \frac{8}{9}$$



$$1\frac{3}{7}, 1\frac{10}{11}, 1\frac{1}{17}, \frac{4}{9}, 1\frac{2}{3}$$

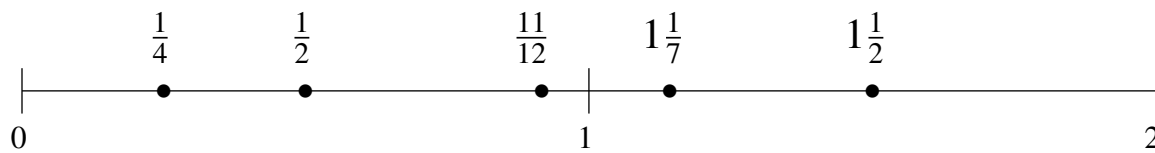


Ordenar Fracciones (F) Respuestas

Ordene cada conjunto de fracciones usando la recta numérica.

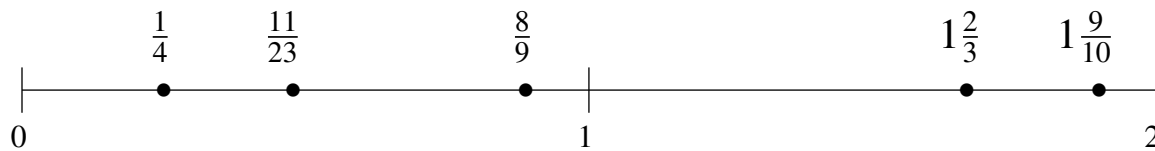
$$\frac{1}{4}, 1\frac{1}{2}, 1\frac{1}{7}, \frac{1}{2}, \frac{11}{12}$$

$$\frac{1}{4}, \frac{1}{2}, \frac{11}{12}, 1\frac{1}{7}, 1\frac{1}{2}$$



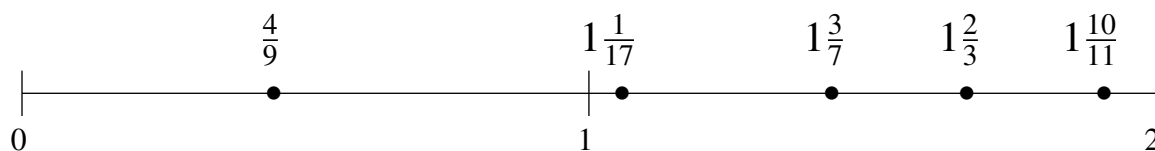
$$\frac{11}{23}, 1\frac{9}{10}, \frac{1}{4}, 1\frac{2}{3}, \frac{8}{9}$$

$$\frac{1}{4}, \frac{11}{23}, \frac{8}{9}, 1\frac{2}{3}, 1\frac{9}{10}$$



$$1\frac{3}{7}, 1\frac{10}{11}, 1\frac{1}{17}, \frac{4}{9}, 1\frac{2}{3}$$

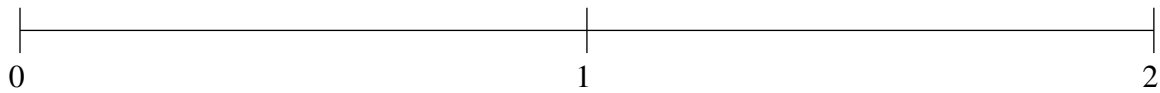
$$\frac{4}{9}, 1\frac{1}{17}, 1\frac{3}{7}, 1\frac{2}{3}, 1\frac{10}{11}$$



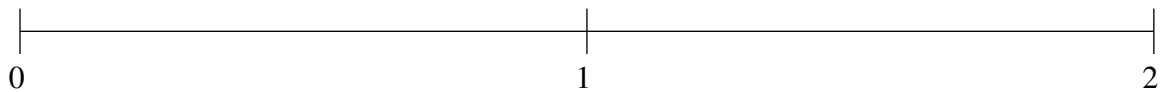
Ordenar Fracciones (G)

Ordene cada conjunto de fracciones usando la recta numérica.

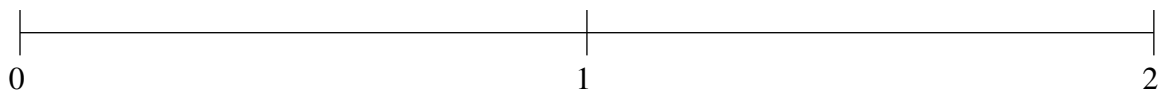
$$1\frac{1}{6}, \frac{1}{2}, 1\frac{3}{7}, 1\frac{2}{3}, \frac{5}{17}$$



$$\frac{2}{19}, \frac{1}{3}, 1\frac{5}{6}, 1\frac{12}{23}, 1\frac{1}{5}$$



$$\frac{1}{10}, \frac{3}{5}, 1\frac{5}{14}, 1\frac{6}{7}, \frac{5}{13}$$

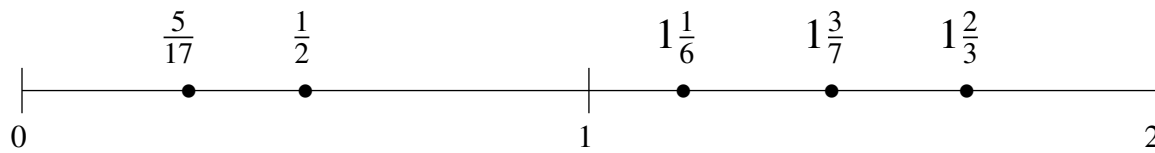


Ordenar Fracciones (G) Respuestas

Ordene cada conjunto de fracciones usando la recta numérica.

$$1\frac{1}{6}, \frac{1}{2}, 1\frac{3}{7}, 1\frac{2}{3}, \frac{5}{17}$$

$$\frac{5}{17}, \frac{1}{2}, 1\frac{1}{6}, 1\frac{3}{7}, 1\frac{2}{3}$$



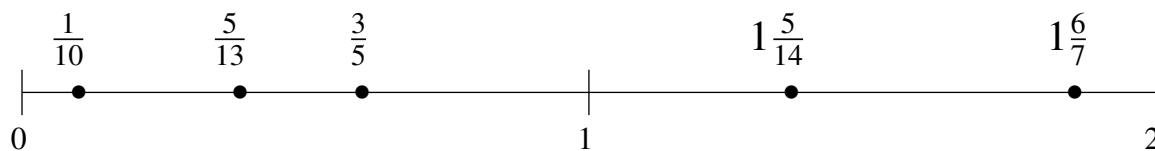
$$\frac{2}{19}, \frac{1}{3}, 1\frac{5}{6}, 1\frac{12}{23}, 1\frac{1}{5}$$

$$\frac{2}{19}, \frac{1}{3}, 1\frac{1}{5}, 1\frac{12}{23}, 1\frac{5}{6}$$



$$\frac{1}{10}, \frac{3}{5}, 1\frac{5}{14}, 1\frac{6}{7}, \frac{5}{13}$$

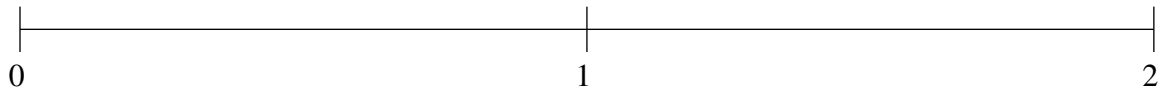
$$\frac{1}{10}, \frac{5}{13}, \frac{3}{5}, 1\frac{5}{14}, 1\frac{6}{7}$$



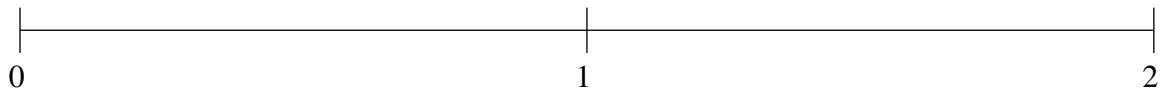
Ordenar Fracciones (H)

Ordene cada conjunto de fracciones usando la recta numérica.

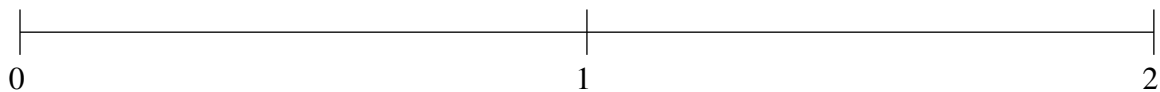
$$\frac{1}{21}, 1\frac{7}{8}, 1\frac{3}{10}, \frac{9}{14}, 1\frac{2}{3}$$



$$\frac{2}{15}, 1\frac{1}{2}, \frac{5}{8}, \frac{21}{22}, 1\frac{13}{14}$$



$$1\frac{1}{2}, \frac{2}{3}, 1\frac{1}{4}, 1\frac{5}{6}, \frac{1}{3}$$

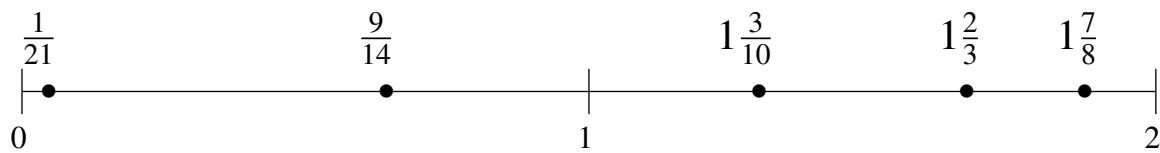


Ordenar Fracciones (H) Respuestas

Ordene cada conjunto de fracciones usando la recta numérica.

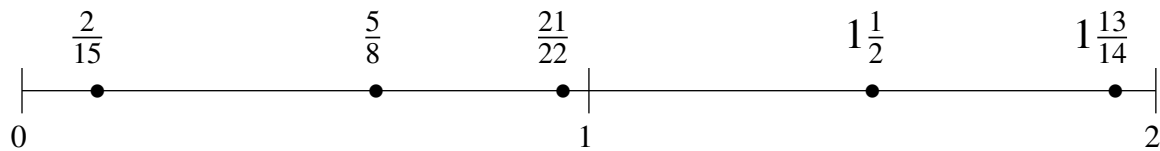
$$\frac{1}{21}, 1\frac{7}{8}, 1\frac{3}{10}, \frac{9}{14}, 1\frac{2}{3}$$

$$\frac{1}{21}, \frac{9}{14}, 1\frac{3}{10}, 1\frac{2}{3}, 1\frac{7}{8}$$



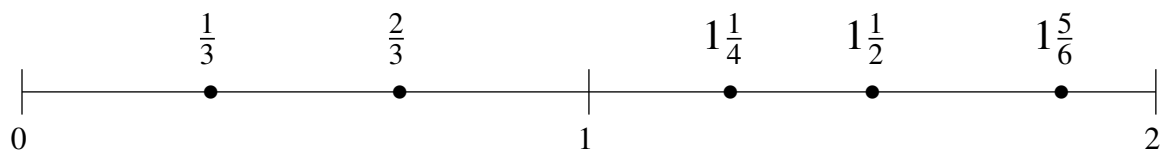
$$\frac{2}{15}, 1\frac{1}{2}, \frac{5}{8}, \frac{21}{22}, 1\frac{13}{14}$$

$$\frac{2}{15}, \frac{5}{8}, \frac{21}{22}, 1\frac{1}{2}, 1\frac{13}{14}$$



$$1\frac{1}{2}, \frac{2}{3}, 1\frac{1}{4}, 1\frac{5}{6}, \frac{1}{3}$$

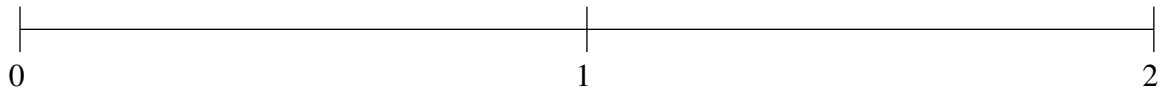
$$\frac{1}{3}, \frac{2}{3}, 1\frac{1}{4}, 1\frac{1}{2}, 1\frac{5}{6}$$



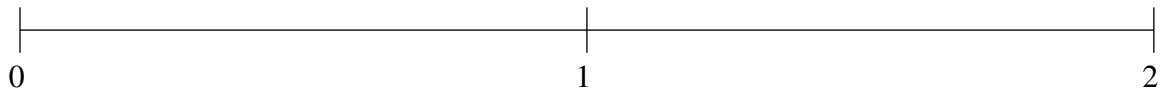
Ordenar Fracciones (I)

Ordene cada conjunto de fracciones usando la recta numérica.

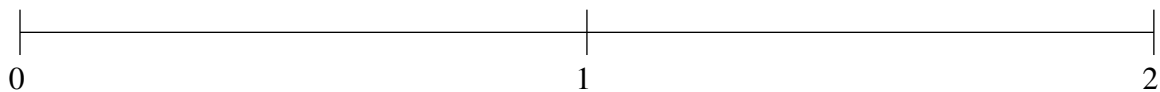
$$1\frac{1}{4}, \frac{3}{4}, \frac{2}{13}, 1\frac{1}{2}, 1\frac{9}{10}$$



$$1\frac{2}{7}, \frac{1}{5}, 1\frac{13}{21}, \frac{2}{3}, 1\frac{5}{6}$$



$$\frac{1}{2}, 1\frac{1}{6}, \frac{16}{21}, 1\frac{7}{18}, 1\frac{16}{19}$$

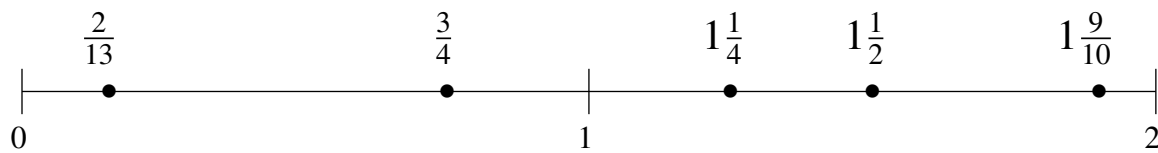


Ordenar Fracciones (I) Respuestas

Ordene cada conjunto de fracciones usando la recta numérica.

$$1\frac{1}{4}, \frac{3}{4}, \frac{2}{13}, 1\frac{1}{2}, 1\frac{9}{10}$$

$$\frac{2}{13}, \frac{3}{4}, 1\frac{1}{4}, 1\frac{1}{2}, 1\frac{9}{10}$$



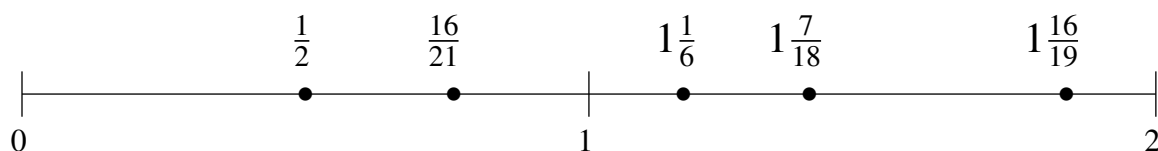
$$1\frac{2}{7}, \frac{1}{5}, 1\frac{13}{21}, \frac{2}{3}, 1\frac{5}{6}$$

$$\frac{1}{5}, \frac{2}{3}, 1\frac{2}{7}, 1\frac{13}{21}, 1\frac{5}{6}$$



$$\frac{1}{2}, 1\frac{1}{6}, \frac{16}{21}, 1\frac{7}{18}, 1\frac{16}{19}$$

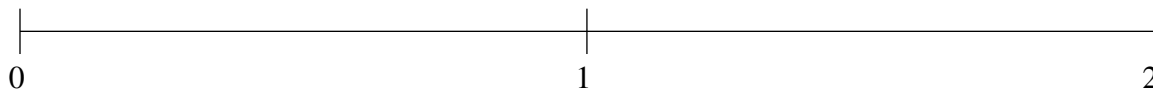
$$\frac{1}{2}, \frac{16}{21}, 1\frac{1}{6}, 1\frac{7}{18}, 1\frac{16}{19}$$



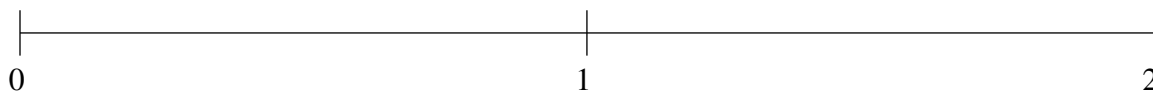
Ordenar Fracciones (J)

Ordene cada conjunto de fracciones usando la recta numérica.

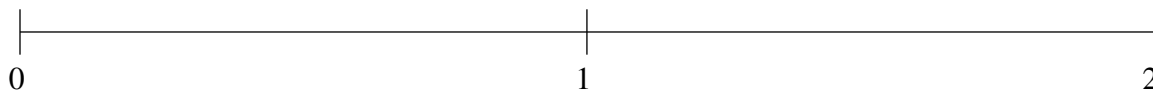
$$\frac{3}{8}, 1\frac{13}{14}, \frac{7}{12}, 1\frac{2}{3}, 1\frac{1}{8}$$



$$\frac{9}{10}, 1\frac{9}{11}, 1\frac{10}{19}, \frac{5}{12}, \frac{1}{11}$$



$$\frac{1}{2}, 1\frac{2}{5}, \frac{1}{6}, \frac{13}{16}, 1\frac{1}{6}$$

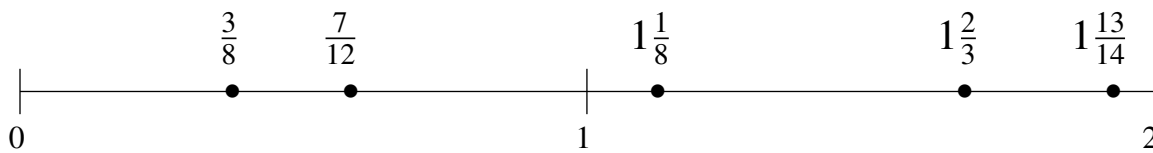


Ordenar Fracciones (J) Respuestas

Ordene cada conjunto de fracciones usando la recta numérica.

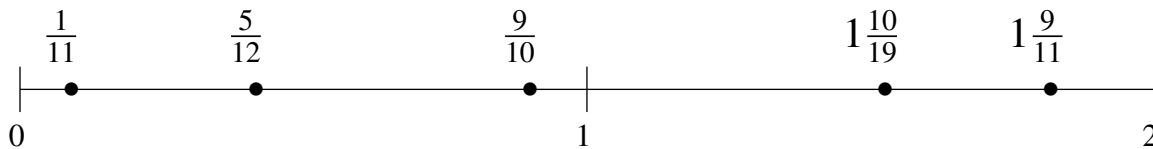
$$\frac{3}{8}, 1\frac{13}{14}, \frac{7}{12}, 1\frac{2}{3}, 1\frac{1}{8}$$

$$\frac{3}{8}, \frac{7}{12}, 1\frac{1}{8}, 1\frac{2}{3}, 1\frac{13}{14}$$



$$\frac{9}{10}, 1\frac{9}{11}, 1\frac{10}{19}, \frac{5}{12}, \frac{1}{11}$$

$$\frac{1}{11}, \frac{5}{12}, \frac{9}{10}, 1\frac{10}{19}, 1\frac{9}{11}$$



$$\frac{1}{2}, 1\frac{2}{5}, \frac{1}{6}, \frac{13}{16}, 1\frac{1}{6}$$

$$\frac{1}{6}, \frac{1}{2}, \frac{13}{16}, 1\frac{1}{6}, 1\frac{2}{5}$$

