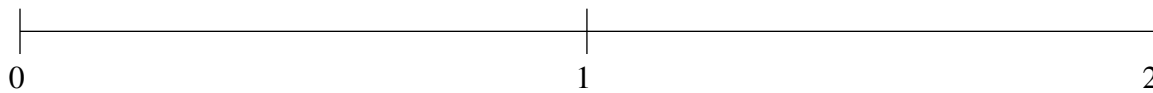


## Ordenar Fracciones (B)

Ordene cada conjunto de fracciones usando la recta numérica.

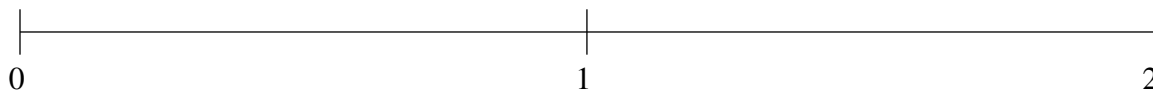
$$\frac{2}{25}, \frac{41}{43}, 1\frac{1}{2}, 1\frac{7}{8}, 1\frac{1}{5}$$



$$1\frac{1}{4}, \frac{29}{32}, 1\frac{35}{43}, \frac{2}{5}, \frac{33}{50}$$



$$\frac{1}{5}, 1\frac{9}{17}, 1\frac{3}{4}, \frac{2}{3}, \frac{8}{19}$$

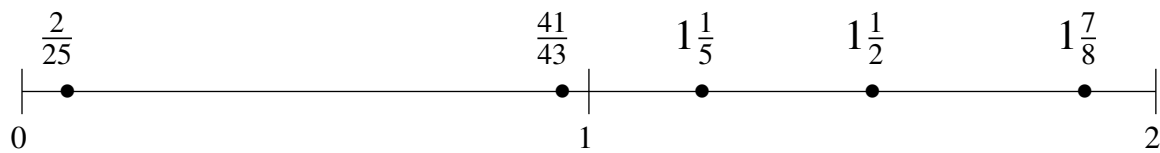


## Ordenar Fracciones (B) Respuestas

Ordene cada conjunto de fracciones usando la recta numérica.

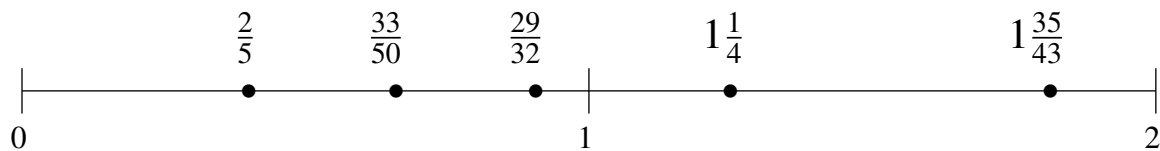
$$\frac{2}{25}, \frac{41}{43}, 1\frac{1}{2}, 1\frac{7}{8}, 1\frac{1}{5}$$

$$\frac{2}{25}, \frac{41}{43}, 1\frac{1}{5}, 1\frac{1}{2}, 1\frac{7}{8}$$



$$1\frac{1}{4}, \frac{29}{32}, 1\frac{35}{43}, \frac{2}{5}, \frac{33}{50}$$

$$\frac{2}{5}, \frac{33}{50}, \frac{29}{32}, 1\frac{1}{4}, 1\frac{35}{43}$$



$$\frac{1}{5}, 1\frac{9}{17}, 1\frac{3}{4}, \frac{2}{3}, \frac{8}{19}$$

$$\frac{1}{5}, \frac{8}{19}, \frac{2}{3}, 1\frac{9}{17}, 1\frac{3}{4}$$

