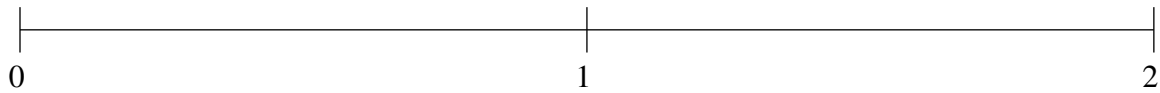


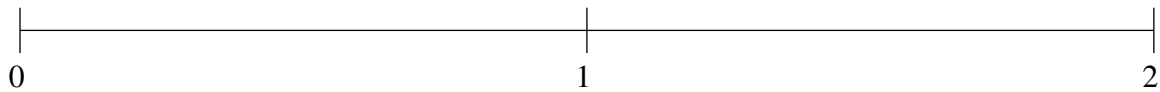
## Ordenar Fracciones (E)

Ordene cada conjunto de fracciones usando la recta numérica.

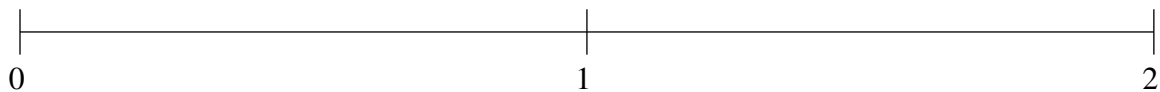
$$1\frac{31}{54}, 1\frac{8}{9}, 1\frac{2}{11}, \frac{7}{11}, \frac{1}{4}$$



$$\frac{4}{5}, \frac{1}{3}, 1\frac{13}{34}, 1\frac{8}{9}, \frac{4}{7}$$



$$\frac{2}{5}, \frac{1}{19}, \frac{2}{3}, 1\frac{17}{46}, 1\frac{9}{14}$$

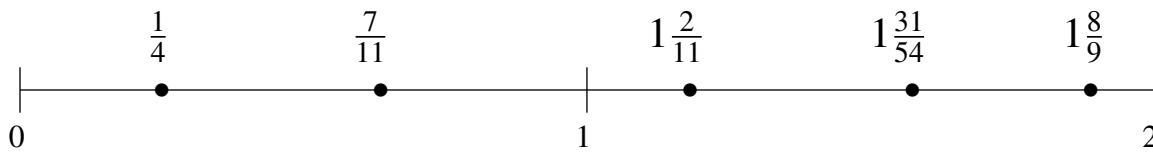


## Ordenar Fracciones (E) Respuestas

Ordene cada conjunto de fracciones usando la recta numérica.

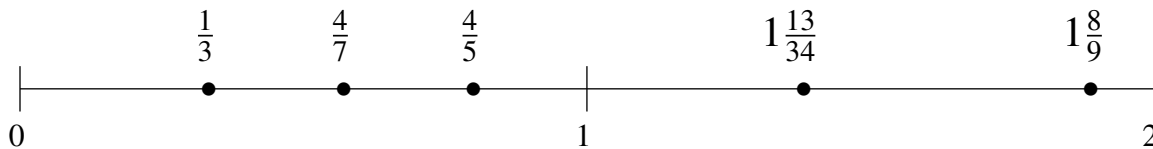
$$1\frac{31}{54}, 1\frac{8}{9}, 1\frac{2}{11}, \frac{7}{11}, \frac{1}{4}$$

$$\frac{1}{4}, \frac{7}{11}, 1\frac{2}{11}, 1\frac{31}{54}, 1\frac{8}{9}$$



$$\frac{4}{5}, \frac{1}{3}, 1\frac{13}{34}, 1\frac{8}{9}, \frac{4}{7}$$

$$\frac{1}{3}, \frac{4}{7}, \frac{4}{5}, 1\frac{13}{34}, 1\frac{8}{9}$$



$$\frac{2}{5}, \frac{1}{19}, \frac{2}{3}, 1\frac{17}{46}, 1\frac{9}{14}$$

$$\frac{1}{19}, \frac{2}{5}, \frac{2}{3}, 1\frac{17}{46}, 1\frac{9}{14}$$

