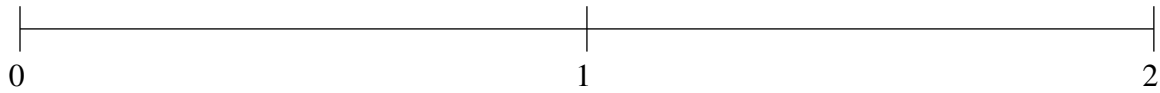


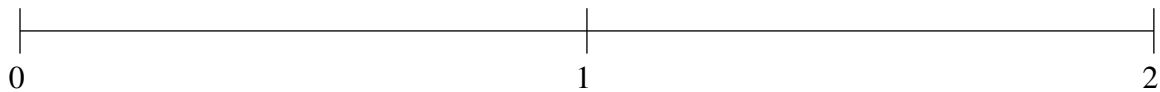
Ordenar Fracciones (F)

Ordene cada conjunto de fracciones usando la recta numérica.

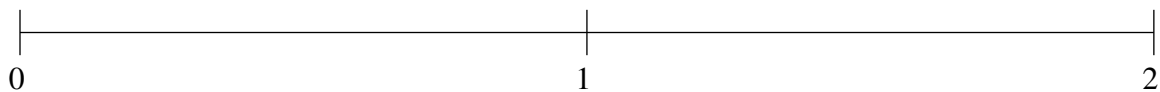
$$1\frac{5}{29}, 1\frac{9}{19}, \frac{8}{11}, 1\frac{30}{31}, \frac{1}{29}$$



$$\frac{1}{39}, \frac{3}{4}, 1\frac{11}{12}, 1\frac{14}{31}, 1\frac{1}{8}$$



$$\frac{10}{11}, 1\frac{1}{3}, 1\frac{5}{6}, \frac{2}{3}, \frac{1}{8}$$

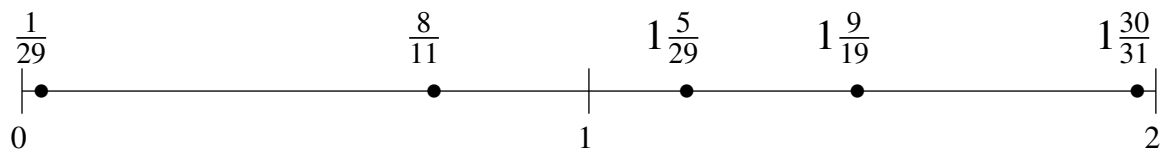


Ordenar Fracciones (F) Respuestas

Ordene cada conjunto de fracciones usando la recta numérica.

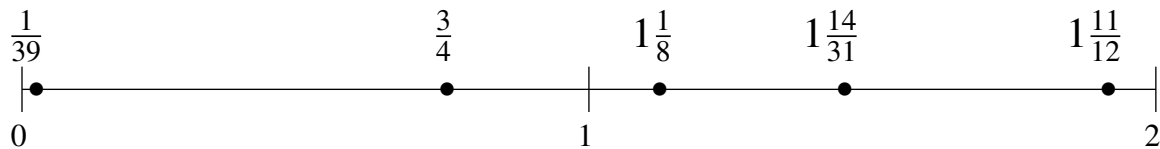
$$1\frac{5}{29}, 1\frac{9}{19}, \frac{8}{11}, 1\frac{30}{31}, \frac{1}{29}$$

$$\frac{1}{29}, \frac{8}{11}, 1\frac{5}{29}, 1\frac{9}{19}, 1\frac{30}{31}$$



$$\frac{1}{39}, \frac{3}{4}, 1\frac{11}{12}, 1\frac{14}{31}, 1\frac{1}{8}$$

$$\frac{1}{39}, \frac{3}{4}, 1\frac{1}{8}, 1\frac{14}{31}, 1\frac{11}{12}$$



$$\frac{10}{11}, 1\frac{1}{3}, 1\frac{5}{6}, \frac{2}{3}, \frac{1}{8}$$

$$\frac{1}{8}, \frac{2}{3}, \frac{10}{11}, 1\frac{1}{3}, 1\frac{5}{6}$$

