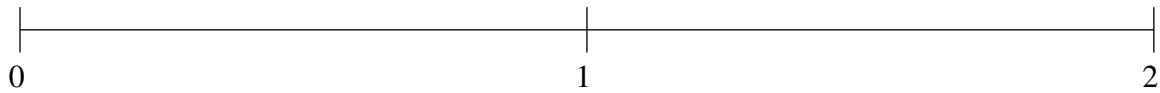


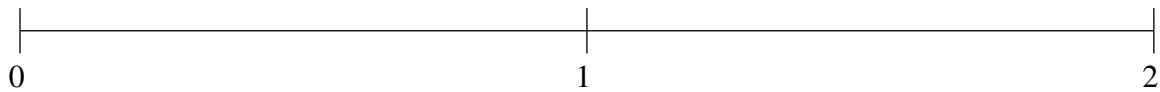
## Ordenar Fracciones (H)

Ordene cada conjunto de fracciones usando la recta numérica.

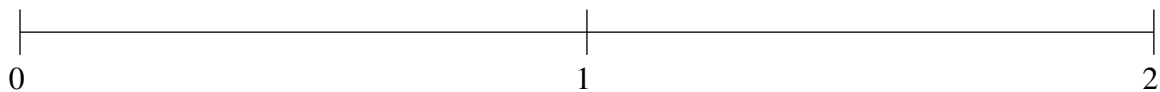
$$1\frac{2}{3}, \frac{1}{19}, \frac{1}{2}, \frac{4}{5}, 1\frac{10}{11}$$



$$\frac{1}{2}, 1\frac{6}{7}, \frac{22}{25}, 1\frac{3}{8}, 1\frac{5}{33}$$



$$1\frac{1}{2}, 1\frac{3}{13}, \frac{49}{58}, \frac{4}{9}, 1\frac{20}{21}$$



## Ordenar Fracciones (H) Respuestas

Ordene cada conjunto de fracciones usando la recta numérica.

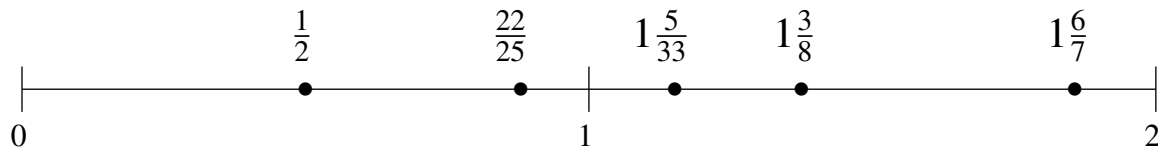
$$1\frac{2}{3}, \frac{1}{19}, \frac{1}{2}, \frac{4}{5}, 1\frac{10}{11}$$

$$\frac{1}{19}, \frac{1}{2}, \frac{4}{5}, 1\frac{2}{3}, 1\frac{10}{11}$$



$$\frac{1}{2}, 1\frac{6}{7}, \frac{22}{25}, 1\frac{3}{8}, 1\frac{5}{33}$$

$$\frac{1}{2}, \frac{22}{25}, 1\frac{5}{33}, 1\frac{3}{8}, 1\frac{6}{7}$$



$$1\frac{1}{2}, 1\frac{3}{13}, \frac{49}{58}, \frac{4}{9}, 1\frac{20}{21}$$

$$\frac{4}{9}, \frac{49}{58}, 1\frac{3}{13}, 1\frac{1}{2}, 1\frac{20}{21}$$

