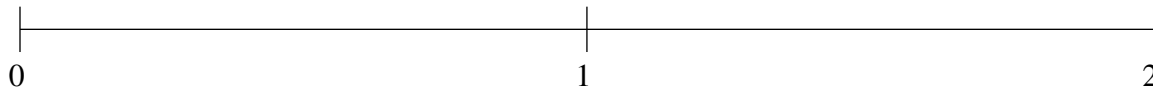


## Ordenar Fracciones (I)

Ordene cada conjunto de fracciones usando la recta numérica.

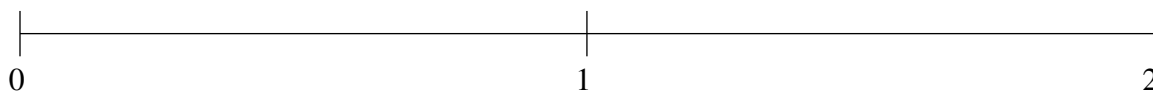
$$\frac{3}{8}, \frac{4}{5}, 1\frac{11}{13}, \frac{1}{7}, 1\frac{4}{27}$$



$$1\frac{2}{7}, 1\frac{1}{20}, \frac{18}{31}, \frac{1}{3}, 1\frac{14}{23}$$



$$1\frac{11}{28}, 1\frac{8}{53}, \frac{29}{39}, \frac{1}{9}, 1\frac{3}{5}$$

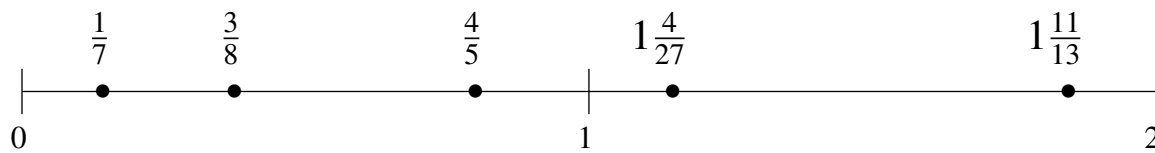


## Ordenar Fracciones (I) Respuestas

Ordene cada conjunto de fracciones usando la recta numérica.

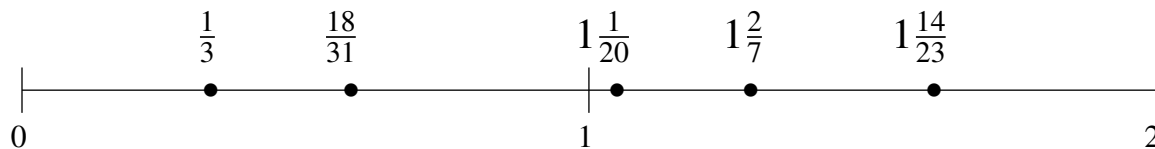
$$\frac{3}{8}, \frac{4}{5}, 1\frac{11}{13}, \frac{1}{7}, 1\frac{4}{27}$$

$$\frac{1}{7}, \frac{3}{8}, \frac{4}{5}, 1\frac{4}{27}, 1\frac{11}{13}$$



$$1\frac{2}{7}, 1\frac{1}{20}, \frac{18}{31}, \frac{1}{3}, 1\frac{14}{23}$$

$$\frac{1}{3}, \frac{18}{31}, 1\frac{1}{20}, 1\frac{2}{7}, 1\frac{14}{23}$$



$$1\frac{11}{28}, 1\frac{8}{53}, \frac{29}{39}, \frac{1}{9}, 1\frac{3}{5}$$

$$\frac{1}{9}, \frac{29}{39}, 1\frac{8}{53}, 1\frac{11}{28}, 1\frac{3}{5}$$

