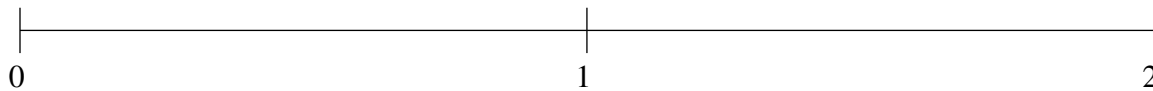


## Ordenar Fracciones (J)

Ordene cada conjunto de fracciones usando la recta numérica.

$$\frac{1}{5}, \frac{11}{27}, 1\frac{1}{2}, 1\frac{11}{12}, 1\frac{5}{7}$$



$$\frac{1}{15}, 1\frac{19}{31}, 1\frac{3}{13}, \frac{13}{48}, \frac{5}{6}$$



$$\frac{5}{6}, 1\frac{4}{5}, \frac{1}{14}, 1\frac{1}{4}, 1\frac{1}{2}$$

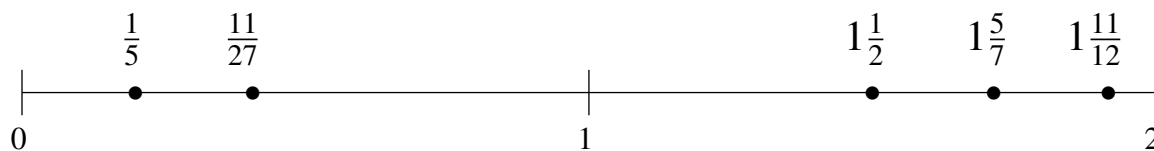


## Ordenar Fracciones (J) Respuestas

Ordene cada conjunto de fracciones usando la recta numérica.

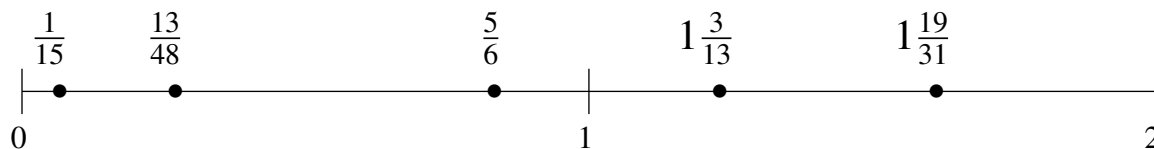
$$\frac{1}{5}, \frac{11}{27}, 1\frac{1}{2}, 1\frac{11}{12}, 1\frac{5}{7}$$

$$\frac{1}{5}, \frac{11}{27}, 1\frac{1}{2}, 1\frac{5}{7}, 1\frac{11}{12}$$



$$\frac{1}{15}, 1\frac{19}{31}, 1\frac{3}{13}, \frac{13}{48}, \frac{5}{6}$$

$$\frac{1}{15}, \frac{13}{48}, \frac{5}{6}, 1\frac{3}{13}, 1\frac{19}{31}$$



$$\frac{5}{6}, 1\frac{4}{5}, \frac{1}{14}, 1\frac{1}{4}, 1\frac{1}{2}$$

$$\frac{1}{14}, \frac{5}{6}, 1\frac{1}{4}, 1\frac{1}{2}, 1\frac{4}{5}$$

