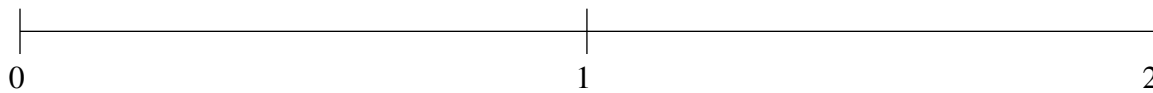


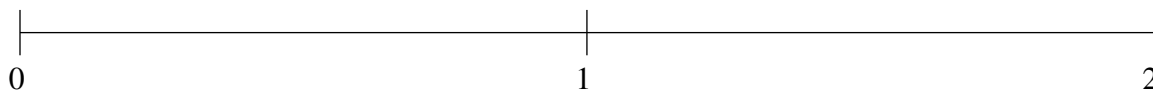
Ordenar Fracciones (B)

Ordene cada conjunto de fracciones usando la recta numérica.

$$1\frac{3}{10}, 1\frac{1}{15}, 1\frac{4}{5}, \frac{3}{4}, \frac{1}{4}$$



$$1\frac{2}{3}, 1\frac{1}{3}, \frac{1}{3}, \frac{5}{6}, 1\frac{29}{30}$$



$$1\frac{1}{5}, \frac{1}{30}, \frac{1}{2}, 1\frac{3}{4}, \frac{4}{5}$$

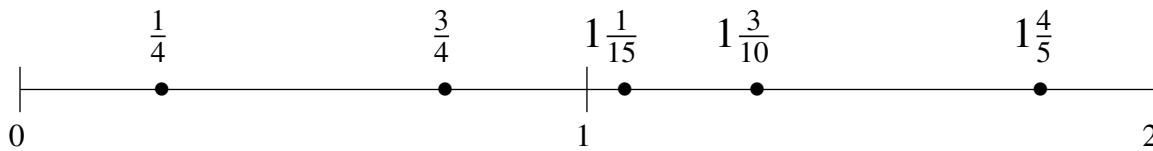


Ordenar Fracciones (B) Respuestas

Ordene cada conjunto de fracciones usando la recta numérica.

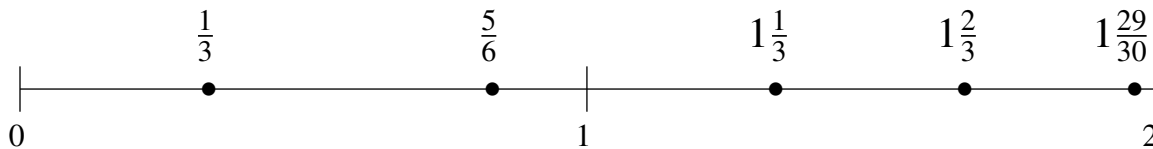
$$1\frac{3}{10}, 1\frac{1}{15}, 1\frac{4}{5}, \frac{3}{4}, \frac{1}{4}$$

$$\frac{1}{4}, \frac{3}{4}, 1\frac{1}{15}, 1\frac{3}{10}, 1\frac{4}{5}$$



$$1\frac{2}{3}, 1\frac{1}{3}, \frac{1}{3}, \frac{5}{6}, 1\frac{29}{30}$$

$$\frac{1}{3}, \frac{5}{6}, 1\frac{1}{3}, 1\frac{2}{3}, 1\frac{29}{30}$$



$$1\frac{1}{5}, \frac{1}{30}, \frac{1}{2}, 1\frac{3}{4}, \frac{4}{5}$$

$$\frac{1}{30}, \frac{1}{2}, \frac{4}{5}, 1\frac{1}{5}, 1\frac{3}{4}$$

