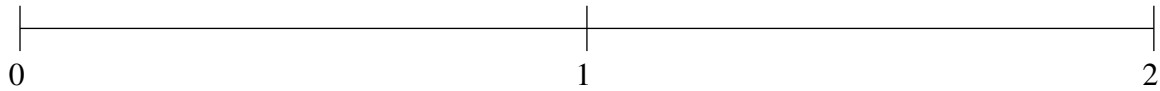


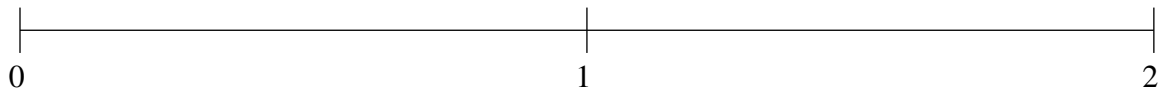
Ordenar Fracciones (C)

Ordene cada conjunto de fracciones usando la recta numérica.

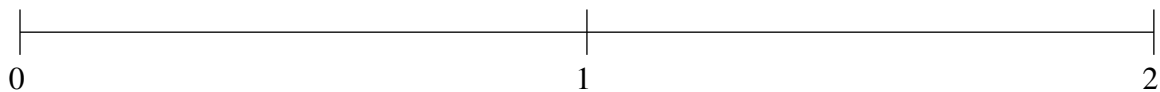
$$\frac{5}{12}, 1\frac{4}{5}, 1\frac{1}{5}, 1\frac{5}{12}, \frac{2}{3}$$



$$\frac{1}{4}, \frac{2}{3}, 1\frac{3}{4}, 1\frac{1}{5}, 1\frac{1}{2}$$



$$1\frac{5}{6}, \frac{4}{5}, 1\frac{1}{10}, \frac{1}{2}, 1\frac{1}{3}$$



Ordenar Fracciones (C) Respuestas

Ordene cada conjunto de fracciones usando la recta numérica.

$$\frac{5}{12}, 1\frac{4}{5}, 1\frac{1}{5}, 1\frac{5}{12}, \frac{2}{3}$$

$$\frac{5}{12}, \frac{2}{3}, 1\frac{1}{5}, 1\frac{5}{12}, 1\frac{4}{5}$$



$$\frac{1}{4}, \frac{2}{3}, 1\frac{3}{4}, 1\frac{1}{5}, 1\frac{1}{2}$$

$$\frac{1}{4}, \frac{2}{3}, 1\frac{1}{5}, 1\frac{1}{2}, 1\frac{3}{4}$$



$$1\frac{5}{6}, \frac{4}{5}, 1\frac{1}{10}, \frac{1}{2}, 1\frac{1}{3}$$

$$\frac{1}{2}, \frac{4}{5}, 1\frac{1}{10}, 1\frac{1}{3}, 1\frac{5}{6}$$

