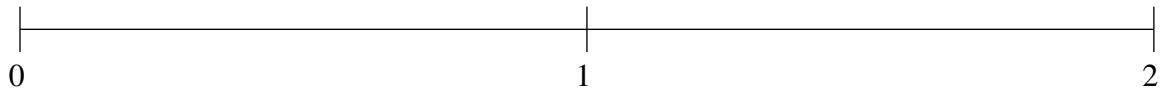


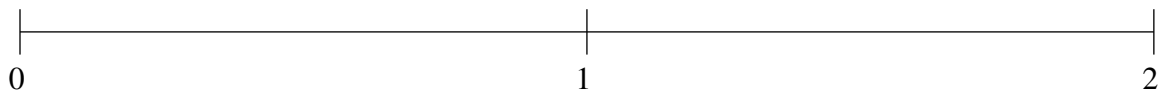
Ordenar Fracciones (E)

Ordene cada conjunto de fracciones usando la recta numérica.

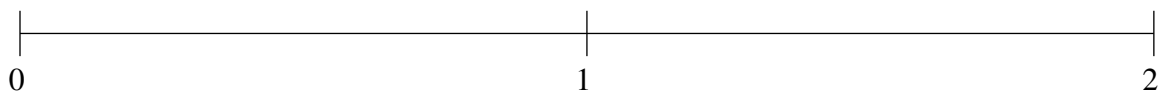
$$\frac{3}{4}, \frac{1}{3}, 1\frac{9}{10}, 1\frac{1}{30}, 1\frac{1}{2}$$



$$1\frac{11}{15}, 1\frac{1}{5}, \frac{1}{2}, \frac{3}{4}, 1\frac{1}{2}$$



$$\frac{13}{20}, 1\frac{1}{2}, 1\frac{3}{4}, \frac{7}{20}, 1\frac{2}{15}$$

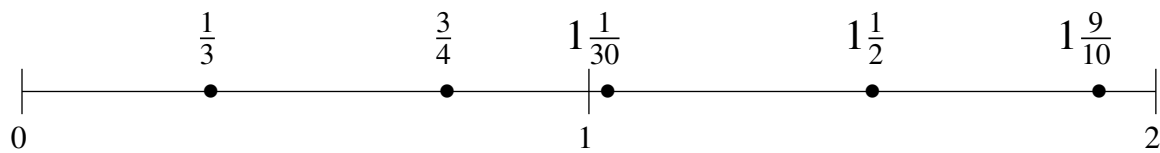


Ordenar Fracciones (E) Respuestas

Ordene cada conjunto de fracciones usando la recta numérica.

$$\frac{3}{4}, \frac{1}{3}, 1\frac{9}{10}, 1\frac{1}{30}, 1\frac{1}{2}$$

$$\frac{1}{3}, \frac{3}{4}, 1\frac{1}{30}, 1\frac{1}{2}, 1\frac{9}{10}$$



$$1\frac{11}{15}, 1\frac{1}{5}, \frac{1}{2}, \frac{3}{4}, 1\frac{1}{2}$$

$$\frac{1}{2}, \frac{3}{4}, 1\frac{1}{5}, 1\frac{1}{2}, 1\frac{11}{15}$$



$$\frac{13}{20}, 1\frac{1}{2}, 1\frac{3}{4}, \frac{7}{20}, 1\frac{2}{15}$$

$$\frac{7}{20}, \frac{13}{20}, 1\frac{2}{15}, 1\frac{1}{2}, 1\frac{3}{4}$$

