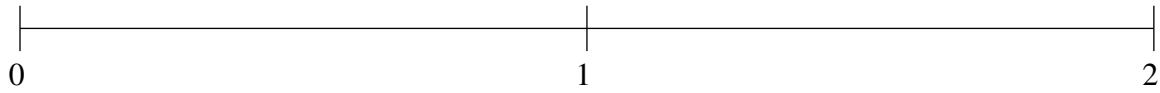


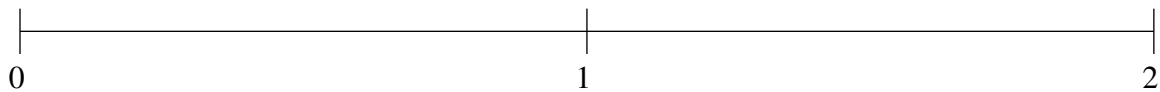
Ordenar Fracciones (F)

Ordene cada conjunto de fracciones usando la recta numérica.

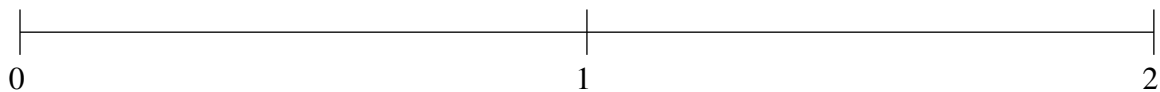
$$1\frac{1}{6}, 1\frac{7}{12}, \frac{5}{6}, 1\frac{14}{15}, \frac{7}{20}$$



$$\frac{2}{5}, 1\frac{1}{2}, 1\frac{5}{6}, 1\frac{1}{12}, \frac{2}{3}$$



$$1\frac{1}{4}, \frac{2}{3}, 1\frac{2}{3}, \frac{14}{15}, \frac{1}{10}$$



Ordenar Fracciones (F) Respuestas

Ordene cada conjunto de fracciones usando la recta numérica.

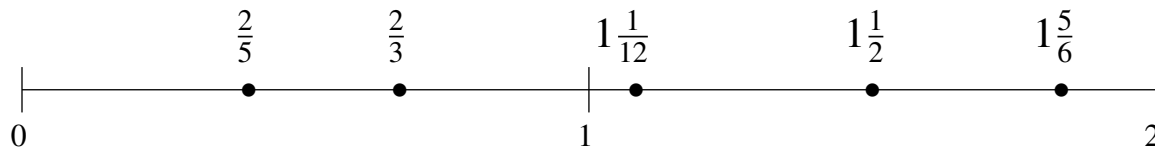
$$1\frac{1}{6}, 1\frac{7}{12}, \frac{5}{6}, 1\frac{14}{15}, \frac{7}{20}$$

$$\frac{7}{20}, \frac{5}{6}, 1\frac{1}{6}, 1\frac{7}{12}, 1\frac{14}{15}$$



$$\frac{2}{5}, 1\frac{1}{2}, 1\frac{5}{6}, 1\frac{1}{12}, \frac{2}{3}$$

$$\frac{2}{5}, \frac{2}{3}, 1\frac{1}{12}, 1\frac{1}{2}, 1\frac{5}{6}$$



$$1\frac{1}{4}, \frac{2}{3}, 1\frac{2}{3}, \frac{14}{15}, \frac{1}{10}$$

$$\frac{1}{10}, \frac{2}{3}, \frac{14}{15}, 1\frac{1}{4}, 1\frac{2}{3}$$

