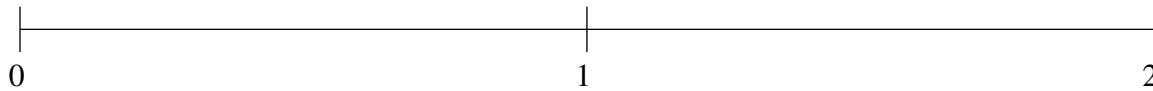


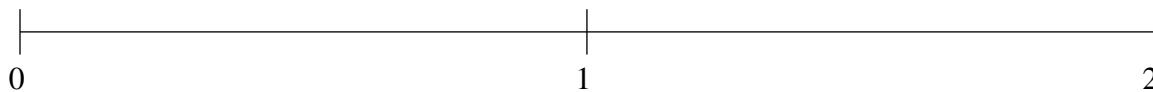
Ordenar Fracciones (G)

Ordene cada conjunto de fracciones usando la recta numérica.

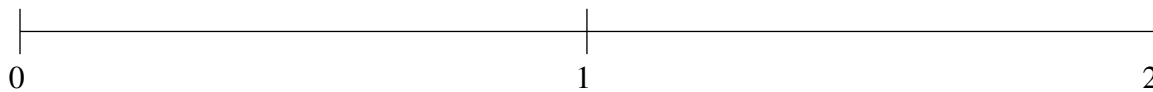
$$\frac{2}{3}, 1\frac{1}{3}, \frac{1}{12}, 1\frac{4}{5}, 1\frac{1}{10}$$



$$1\frac{1}{6}, \frac{14}{15}, 1\frac{3}{4}, 1\frac{1}{2}, \frac{1}{3}$$



$$\frac{2}{3}, 1\frac{1}{6}, \frac{11}{12}, \frac{1}{12}, \frac{1}{3}$$

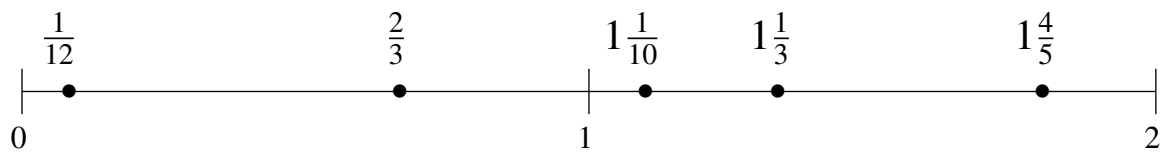


Ordenar Fracciones (G) Respuestas

Ordene cada conjunto de fracciones usando la recta numérica.

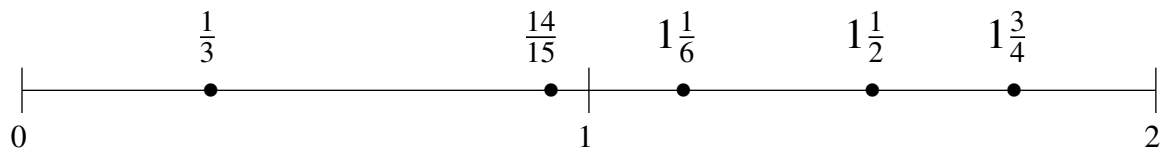
$$\frac{2}{3}, 1\frac{1}{3}, \frac{1}{12}, 1\frac{4}{5}, 1\frac{1}{10}$$

$$\frac{1}{12}, \frac{2}{3}, 1\frac{1}{10}, 1\frac{1}{3}, 1\frac{4}{5}$$



$$1\frac{1}{6}, \frac{14}{15}, 1\frac{3}{4}, 1\frac{1}{2}, \frac{1}{3}$$

$$\frac{1}{3}, \frac{14}{15}, 1\frac{1}{6}, 1\frac{1}{2}, 1\frac{3}{4}$$



$$\frac{2}{3}, 1\frac{1}{6}, \frac{11}{12}, \frac{1}{12}, \frac{1}{3}$$

$$\frac{1}{12}, \frac{1}{3}, \frac{2}{3}, \frac{11}{12}, 1\frac{1}{6}$$

