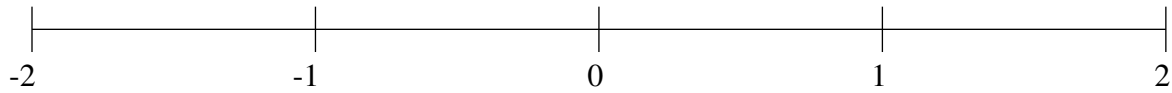


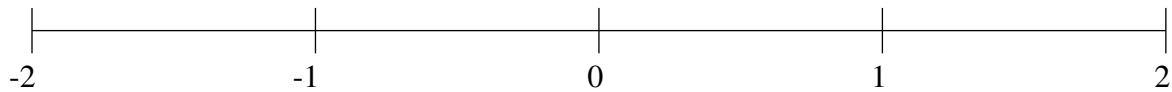
Ordenar Fracciones (A)

Ordene cada conjunto de fracciones usando la recta numérica.

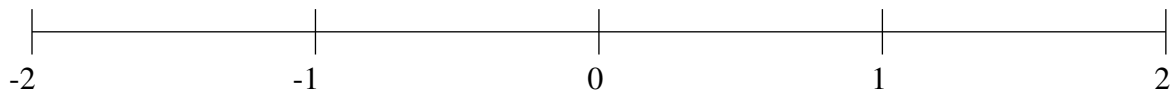
$$1\frac{3}{5}, -\frac{3}{10}, 1\frac{9}{10}, \frac{1}{2}, \frac{3}{4}, \frac{7}{30}, -1\frac{3}{5}, -\frac{3}{5}$$



$$\frac{3}{4}, \frac{1}{3}, -1\frac{1}{6}, -1\frac{1}{2}, 1\frac{2}{3}, -1\frac{53}{60}, -\frac{4}{5}, -\frac{1}{2}$$



$$\frac{1}{2}, 1\frac{7}{30}, \frac{3}{4}, \frac{1}{4}, -\frac{2}{3}, -1\frac{1}{4}, 1\frac{3}{5}, -\frac{1}{5}$$

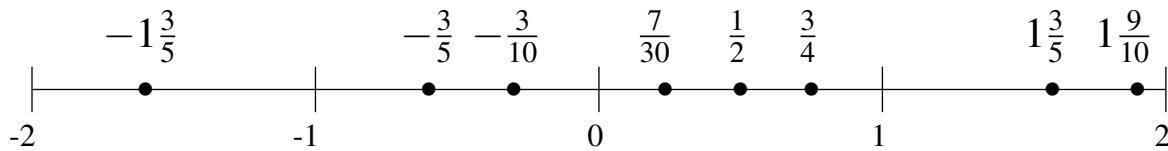


Ordenar Fracciones (A) Respuestas

Ordene cada conjunto de fracciones usando la recta numérica.

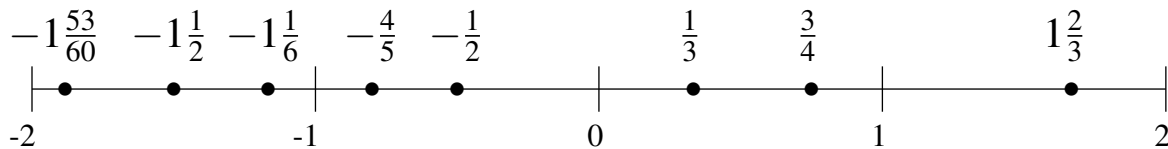
$$1\frac{3}{5}, -\frac{3}{10}, 1\frac{9}{10}, \frac{1}{2}, \frac{3}{4}, \frac{7}{30}, -1\frac{3}{5}, -\frac{3}{5}$$

$$-1\frac{3}{5}, -\frac{3}{5}, -\frac{3}{10}, \frac{7}{30}, \frac{1}{2}, \frac{3}{4}, 1\frac{3}{5}, 1\frac{9}{10}$$



$$\frac{3}{4}, \frac{1}{3}, -1\frac{1}{6}, -1\frac{1}{2}, 1\frac{2}{3}, -1\frac{53}{60}, -\frac{4}{5}, -\frac{1}{2}$$

$$-1\frac{53}{60}, -1\frac{1}{2}, -1\frac{1}{6}, -\frac{4}{5}, -\frac{1}{2}, \frac{1}{3}, \frac{3}{4}, 1\frac{2}{3}$$



$$\frac{1}{2}, 1\frac{7}{30}, \frac{3}{4}, \frac{1}{4}, -\frac{2}{3}, -1\frac{1}{4}, 1\frac{3}{5}, -\frac{1}{5}$$

$$-1\frac{1}{4}, -\frac{2}{3}, -\frac{1}{5}, \frac{1}{4}, \frac{1}{2}, \frac{3}{4}, 1\frac{7}{30}, 1\frac{3}{5}$$

