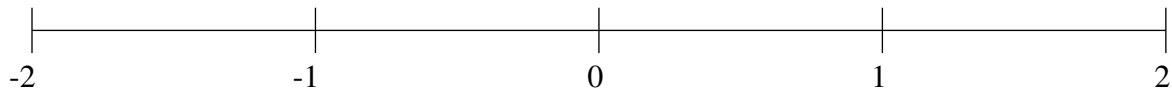


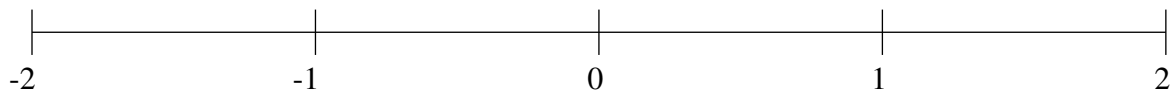
Ordenar Fracciones (F)

Ordene cada conjunto de fracciones usando la recta numérica.

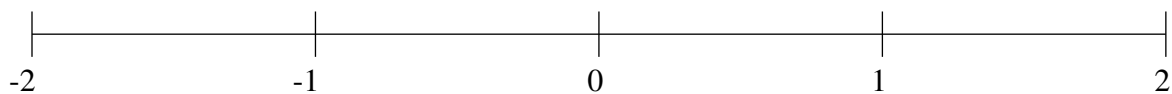
$$-1\frac{5}{6}, -1\frac{7}{12}, -1\frac{1}{3}, 1\frac{1}{5}, -\frac{1}{3}, 1\frac{4}{5}, 1\frac{1}{2}, -\frac{1}{12}$$



$$-1\frac{2}{3}, \frac{2}{3}, -1\frac{1}{30}, -\frac{1}{12}, 1\frac{1}{2}, -\frac{3}{4}, 1\frac{1}{4}, \frac{1}{5}$$



$$-1\frac{1}{3}, -\frac{2}{5}, -1\frac{3}{4}, \frac{5}{6}, -\frac{1}{6}, 1\frac{1}{4}, 1\frac{8}{15}, \frac{1}{2}$$

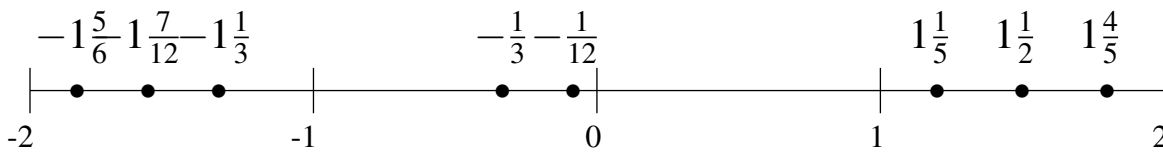


Ordenar Fracciones (F) Respuestas

Ordene cada conjunto de fracciones usando la recta numérica.

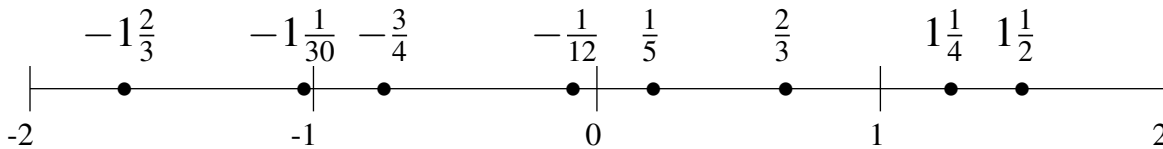
$$-1\frac{5}{6}, -1\frac{7}{12}, -1\frac{1}{3}, 1\frac{1}{5}, -\frac{1}{3}, 1\frac{4}{5}, 1\frac{1}{2}, -\frac{1}{12}$$

$$-1\frac{5}{6}, -1\frac{7}{12}, -1\frac{1}{3}, -\frac{1}{3}, -\frac{1}{12}, 1\frac{1}{5}, 1\frac{1}{2}, 1\frac{4}{5}$$



$$-1\frac{2}{3}, \frac{2}{3}, -1\frac{1}{30}, -\frac{1}{12}, 1\frac{1}{2}, -\frac{3}{4}, 1\frac{1}{4}, \frac{1}{5}$$

$$-1\frac{2}{3}, -1\frac{1}{30}, -\frac{3}{4}, -\frac{1}{12}, \frac{1}{5}, \frac{2}{3}, 1\frac{1}{4}, 1\frac{1}{2}$$



$$-1\frac{1}{3}, -\frac{2}{5}, -1\frac{3}{4}, \frac{5}{6}, -\frac{1}{6}, 1\frac{1}{4}, 1\frac{8}{15}, \frac{1}{2}$$

$$-1\frac{3}{4}, -1\frac{1}{3}, -\frac{2}{5}, -\frac{1}{6}, \frac{1}{2}, \frac{5}{6}, 1\frac{1}{4}, 1\frac{8}{15}$$

