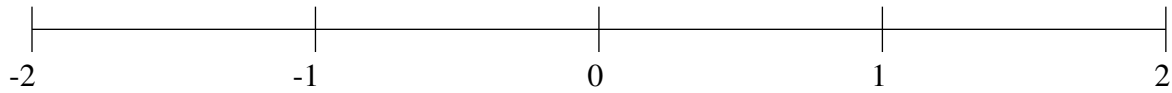


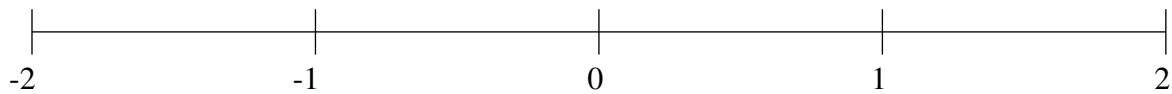
Ordenar Fracciones (G)

Ordene cada conjunto de fracciones usando la recta numérica.

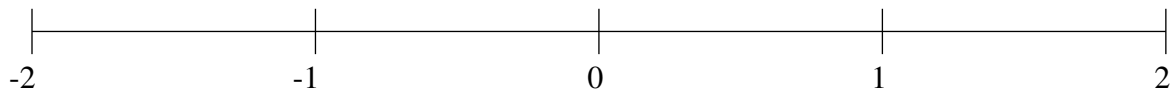
$$1\frac{1}{2}, \frac{3}{4}, \frac{1}{6}, 1\frac{1}{4}, -1\frac{1}{12}, -\frac{1}{4}, -1\frac{1}{3}, 1\frac{9}{10}$$



$$1\frac{1}{10}, -1\frac{1}{3}, -\frac{1}{3}, \frac{1}{2}, \frac{1}{5}, -1\frac{4}{5}, 1\frac{3}{4}, 1\frac{1}{3}$$



$$-\frac{1}{3}, \frac{2}{3}, -1\frac{2}{3}, -1\frac{1}{3}, -1\frac{29}{30}, \frac{2}{5}, 1\frac{9}{10}, -\frac{2}{3}$$

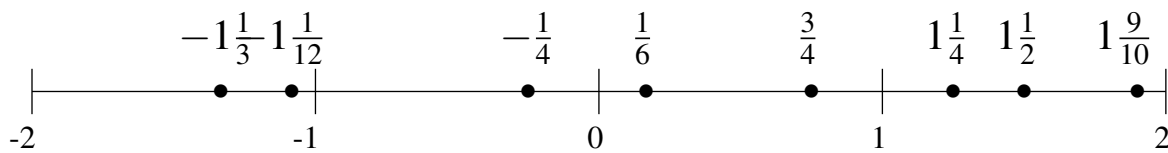


Ordenar Fracciones (G) Respuestas

Ordene cada conjunto de fracciones usando la recta numérica.

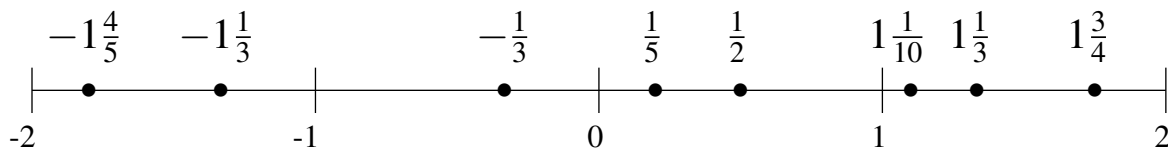
$$1\frac{1}{2}, \frac{3}{4}, \frac{1}{6}, 1\frac{1}{4}, -1\frac{1}{12}, -\frac{1}{4}, -1\frac{1}{3}, 1\frac{9}{10}$$

$$-1\frac{1}{3}, -1\frac{1}{12}, -\frac{1}{4}, \frac{1}{6}, \frac{3}{4}, 1\frac{1}{4}, 1\frac{1}{2}, 1\frac{9}{10}$$



$$1\frac{1}{10}, -1\frac{1}{3}, -\frac{1}{3}, \frac{1}{2}, \frac{1}{5}, -1\frac{4}{5}, 1\frac{3}{4}, 1\frac{1}{3}$$

$$-1\frac{4}{5}, -1\frac{1}{3}, -\frac{1}{3}, \frac{1}{5}, \frac{1}{2}, 1\frac{1}{10}, 1\frac{1}{3}, 1\frac{3}{4}$$



$$-\frac{1}{3}, \frac{2}{3}, -1\frac{2}{3}, -1\frac{1}{3}, -1\frac{29}{30}, \frac{2}{5}, 1\frac{9}{10}, -\frac{2}{3}$$

$$-1\frac{29}{30}, -1\frac{2}{3}, -1\frac{1}{3}, -\frac{2}{3}, -\frac{1}{3}, \frac{2}{5}, \frac{2}{3}, 1\frac{9}{10}$$

