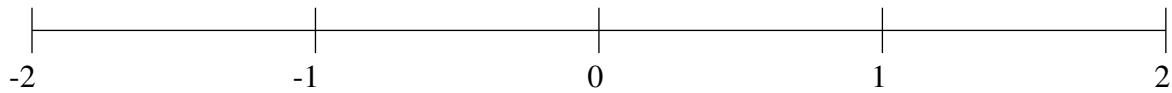


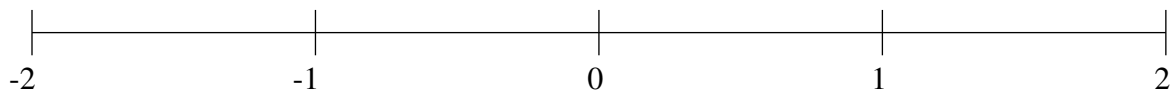
Ordenar Fracciones (H)

Ordene cada conjunto de fracciones usando la recta numérica.

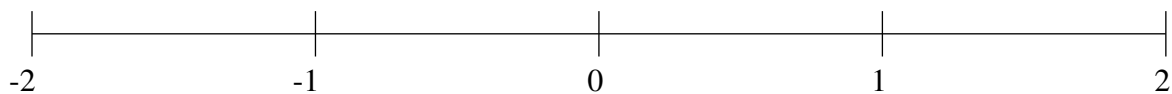
$$-1\frac{1}{3}, 1\frac{5}{6}, 1\frac{3}{20}, -1\frac{3}{4}, -\frac{1}{4}, \frac{1}{6}, -\frac{3}{4}, -\frac{1}{2}$$



$$\frac{4}{5}, 1\frac{1}{10}, \frac{4}{15}, -1\frac{3}{4}, -1\frac{1}{12}, -\frac{1}{2}, -\frac{1}{15}, 1\frac{2}{5}$$



$$-\frac{1}{4}, -1\frac{1}{2}, \frac{1}{6}, -\frac{3}{5}, -1\frac{9}{10}, 1\frac{1}{4}, 1\frac{2}{3}, \frac{23}{30}$$

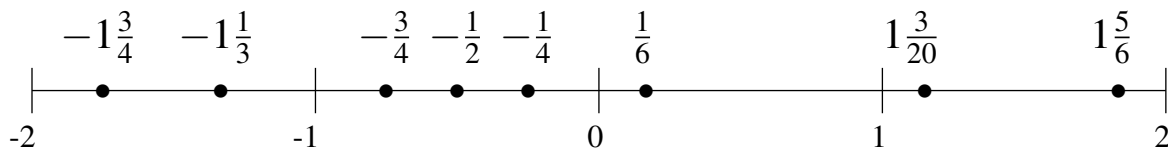


Ordenar Fracciones (H) Respuestas

Ordene cada conjunto de fracciones usando la recta numérica.

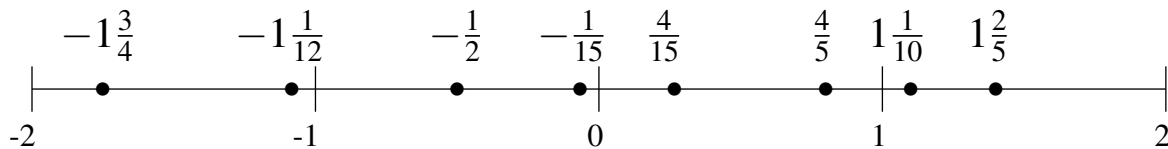
$$-1\frac{1}{3}, 1\frac{5}{6}, 1\frac{3}{20}, -1\frac{3}{4}, -\frac{1}{4}, \frac{1}{6}, -\frac{3}{4}, -\frac{1}{2}$$

$$-1\frac{3}{4}, -1\frac{1}{3}, -\frac{3}{4}, -\frac{1}{2}, -\frac{1}{4}, \frac{1}{6}, 1\frac{3}{20}, 1\frac{5}{6}$$



$$\frac{4}{5}, 1\frac{1}{10}, \frac{4}{15}, -1\frac{3}{4}, -1\frac{1}{12}, -\frac{1}{2}, -\frac{1}{15}, 1\frac{2}{5}$$

$$-1\frac{3}{4}, -1\frac{1}{12}, -\frac{1}{2}, -\frac{1}{15}, \frac{4}{15}, \frac{4}{5}, 1\frac{1}{10}, 1\frac{2}{5}$$



$$-\frac{1}{4}, -1\frac{1}{2}, \frac{1}{6}, -\frac{3}{5}, -1\frac{9}{10}, 1\frac{1}{4}, 1\frac{2}{3}, \frac{23}{30}$$

$$-1\frac{9}{10}, -1\frac{1}{2}, -\frac{3}{5}, -\frac{1}{4}, \frac{1}{6}, \frac{23}{30}, 1\frac{1}{4}, 1\frac{2}{3}$$

