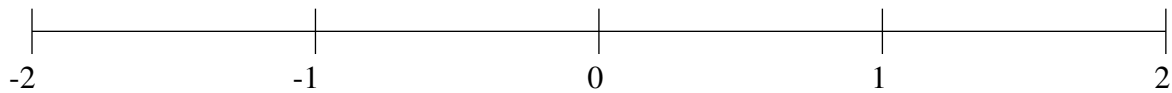


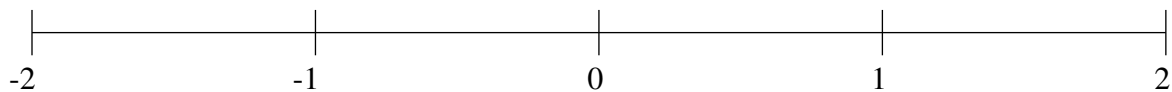
## Ordenar Fracciones (I)

Ordene cada conjunto de fracciones usando la recta numérica.

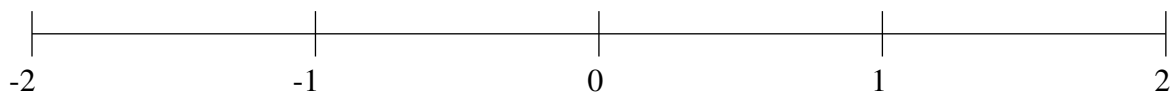
$$\frac{1}{2}, 1\frac{3}{5}, \frac{1}{12}, \frac{3}{4}, -1\frac{1}{3}, 1\frac{11}{12}, -\frac{4}{15}, -\frac{7}{12}$$



$$-\frac{5}{6}, -\frac{1}{6}, -1\frac{3}{4}, \frac{1}{2}, 1\frac{1}{2}, -1\frac{1}{2}, \frac{1}{4}, \frac{3}{4}$$



$$-1\frac{1}{4}, -\frac{7}{15}, \frac{1}{4}, -1\frac{1}{2}, -\frac{4}{5}, \frac{3}{4}, 1\frac{1}{4}, -\frac{1}{4}$$

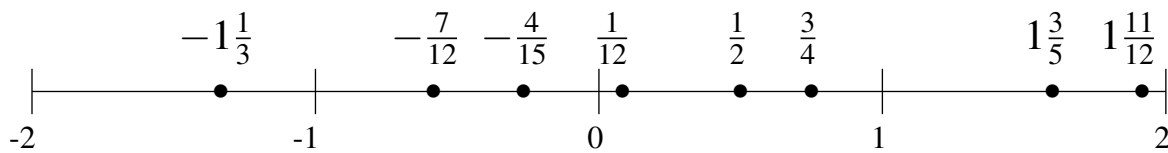


## Ordenar Fracciones (I) Respuestas

Ordene cada conjunto de fracciones usando la recta numérica.

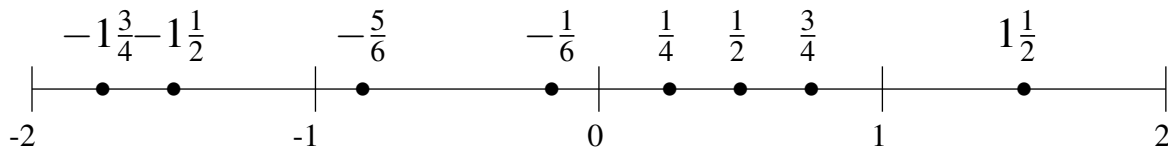
$$\frac{1}{2}, 1\frac{3}{5}, \frac{1}{12}, \frac{3}{4}, -1\frac{1}{3}, 1\frac{11}{12}, -\frac{4}{15}, -\frac{7}{12}$$

$$-1\frac{1}{3}, -\frac{7}{12}, -\frac{4}{15}, \frac{1}{12}, \frac{1}{2}, \frac{3}{4}, 1\frac{3}{5}, 1\frac{11}{12}$$



$$-\frac{5}{6}, -\frac{1}{6}, -1\frac{3}{4}, \frac{1}{2}, 1\frac{1}{2}, -1\frac{1}{2}, \frac{1}{4}, \frac{3}{4}$$

$$-1\frac{3}{4}, -1\frac{1}{2}, -\frac{5}{6}, -\frac{1}{6}, \frac{1}{4}, \frac{1}{2}, \frac{3}{4}, 1\frac{1}{2}$$



$$-1\frac{1}{4}, -\frac{7}{15}, \frac{1}{4}, -1\frac{1}{2}, -\frac{4}{5}, \frac{3}{4}, 1\frac{1}{4}, -\frac{1}{4}$$

$$-1\frac{1}{2}, -1\frac{1}{4}, -\frac{4}{5}, -\frac{7}{15}, -\frac{1}{4}, \frac{1}{4}, \frac{3}{4}, 1\frac{1}{4}$$

