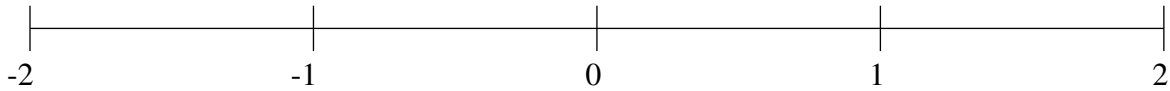


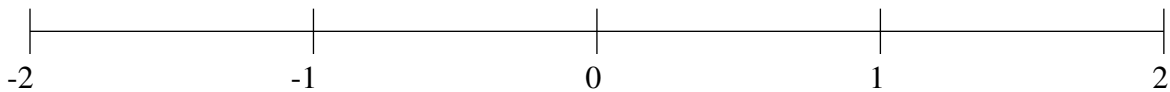
Ordenar Fracciones (J)

Ordene cada conjunto de fracciones usando la recta numérica.

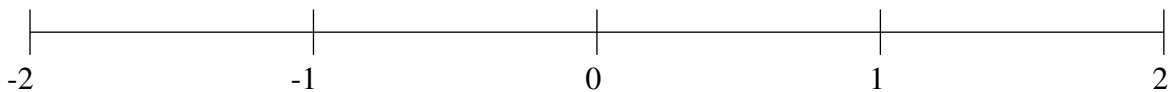
$$1\frac{7}{12}, \frac{5}{6}, -\frac{9}{10}, \frac{1}{12}, -\frac{2}{3}, \frac{1}{2}, -\frac{1}{4}, 1\frac{1}{3}$$



$$\frac{2}{3}, -\frac{9}{20}, 1\frac{1}{2}, 1\frac{3}{4}, 1\frac{1}{5}, -1\frac{5}{6}, \frac{2}{5}, -\frac{4}{5}$$



$$1\frac{1}{5}, -\frac{1}{3}, -\frac{2}{3}, \frac{1}{2}, \frac{4}{5}, -1\frac{1}{3}, -1\frac{2}{3}, \frac{1}{5}$$

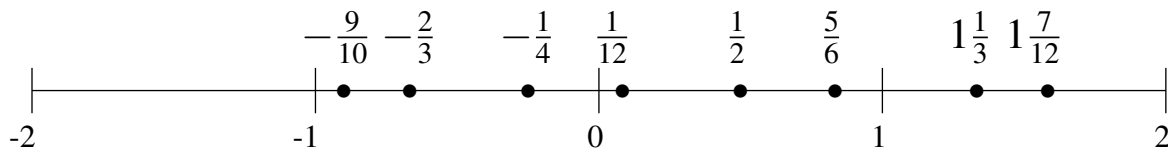


Ordenar Fracciones (J) Respuestas

Ordene cada conjunto de fracciones usando la recta numérica.

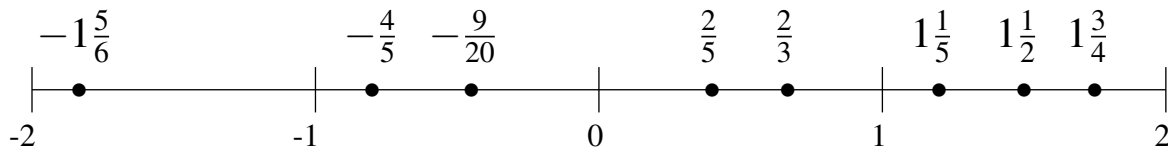
$$1\frac{7}{12}, \frac{5}{6}, -\frac{9}{10}, \frac{1}{12}, -\frac{2}{3}, \frac{1}{2}, -\frac{1}{4}, 1\frac{1}{3}$$

$$-\frac{9}{10}, -\frac{2}{3}, -\frac{1}{4}, \frac{1}{12}, \frac{1}{2}, \frac{5}{6}, 1\frac{1}{3}, 1\frac{7}{12}$$



$$\frac{2}{3}, -\frac{9}{20}, 1\frac{1}{2}, 1\frac{3}{4}, 1\frac{1}{5}, -1\frac{5}{6}, \frac{2}{5}, -\frac{4}{5}$$

$$-1\frac{5}{6}, -\frac{4}{5}, -\frac{9}{20}, \frac{2}{5}, \frac{2}{3}, 1\frac{1}{5}, 1\frac{1}{2}, 1\frac{3}{4}$$



$$1\frac{1}{5}, -\frac{1}{3}, -\frac{2}{3}, \frac{1}{2}, \frac{4}{5}, -1\frac{1}{3}, -1\frac{2}{3}, \frac{1}{5}$$

$$-1\frac{2}{3}, -1\frac{1}{3}, -\frac{2}{3}, -\frac{1}{3}, \frac{1}{5}, \frac{1}{2}, \frac{4}{5}, 1\frac{1}{5}$$

