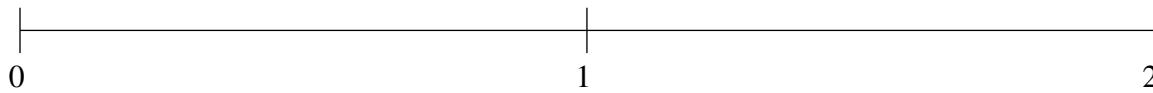


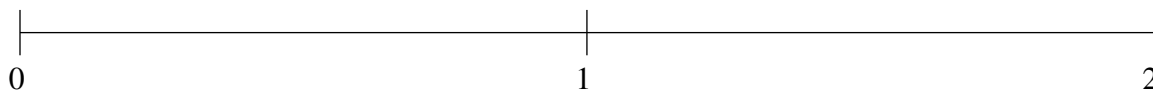
Ordenar Fracciones (A)

Ordene cada conjunto de fracciones usando la recta numérica.

$$\frac{5}{6}, 1\frac{2}{5}, 1\frac{2}{3}, \frac{1}{2}, \frac{1}{4}$$



$$1\frac{2}{3}, 1\frac{11}{12}, \frac{3}{4}, \frac{1}{3}, \frac{1}{10}$$



$$1\frac{1}{2}, \frac{1}{2}, 1\frac{1}{4}, \frac{3}{20}, 1\frac{3}{4}$$



Ordenar Fracciones (A) Respuestas

Ordene cada conjunto de fracciones usando la recta numérica.

$$\frac{5}{6}, 1\frac{2}{5}, 1\frac{2}{3}, \frac{1}{2}, \frac{1}{4}$$

$$\frac{1}{4}, \frac{1}{2}, \frac{5}{6}, 1\frac{2}{5}, 1\frac{2}{3}$$



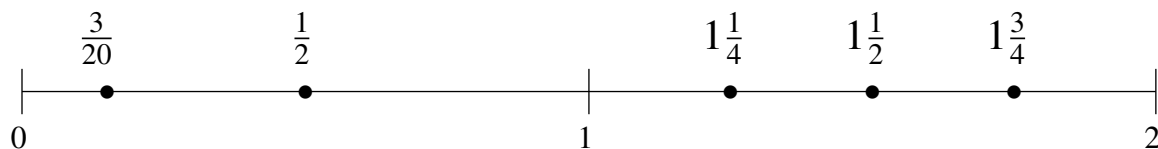
$$1\frac{2}{3}, 1\frac{11}{12}, \frac{3}{4}, \frac{1}{3}, \frac{1}{10}$$

$$\frac{1}{10}, \frac{1}{3}, \frac{3}{4}, 1\frac{2}{3}, 1\frac{11}{12}$$



$$1\frac{1}{2}, \frac{1}{2}, 1\frac{1}{4}, \frac{3}{20}, 1\frac{3}{4}$$

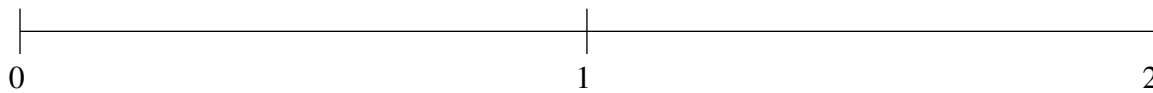
$$\frac{3}{20}, \frac{1}{2}, 1\frac{1}{4}, 1\frac{1}{2}, 1\frac{3}{4}$$



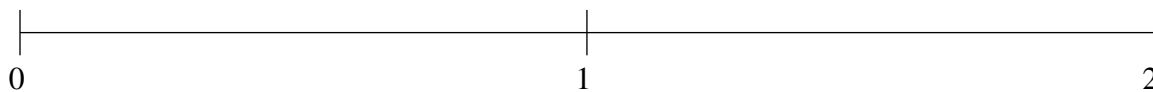
Ordenar Fracciones (B)

Ordene cada conjunto de fracciones usando la recta numérica.

$$1\frac{3}{10}, 1\frac{1}{15}, 1\frac{4}{5}, \frac{3}{4}, \frac{1}{4}$$



$$1\frac{2}{3}, 1\frac{1}{3}, \frac{1}{3}, \frac{5}{6}, 1\frac{29}{30}$$



$$1\frac{1}{5}, \frac{1}{30}, \frac{1}{2}, 1\frac{3}{4}, \frac{4}{5}$$

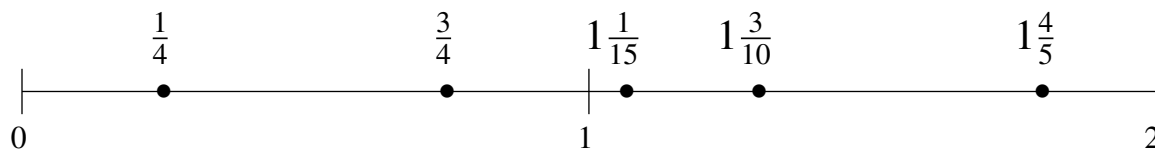


Ordenar Fracciones (B) Respuestas

Ordene cada conjunto de fracciones usando la recta numérica.

$$1\frac{3}{10}, 1\frac{1}{15}, 1\frac{4}{5}, \frac{3}{4}, \frac{1}{4}$$

$$\frac{1}{4}, \frac{3}{4}, 1\frac{1}{15}, 1\frac{3}{10}, 1\frac{4}{5}$$



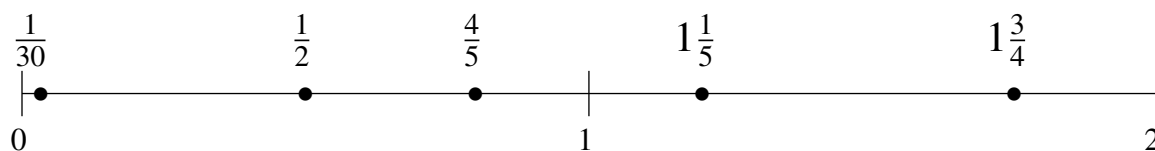
$$1\frac{2}{3}, 1\frac{1}{3}, \frac{1}{3}, \frac{5}{6}, 1\frac{29}{30}$$

$$\frac{1}{3}, \frac{5}{6}, 1\frac{1}{3}, 1\frac{2}{3}, 1\frac{29}{30}$$



$$1\frac{1}{5}, \frac{1}{30}, \frac{1}{2}, 1\frac{3}{4}, \frac{4}{5}$$

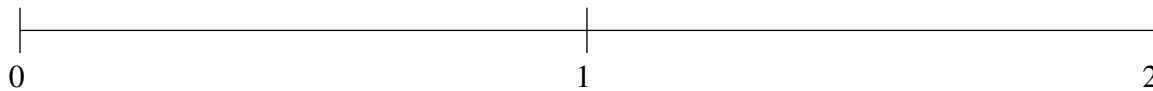
$$\frac{1}{30}, \frac{1}{2}, \frac{4}{5}, 1\frac{1}{5}, 1\frac{3}{4}$$



Ordenar Fracciones (C)

Ordene cada conjunto de fracciones usando la recta numérica.

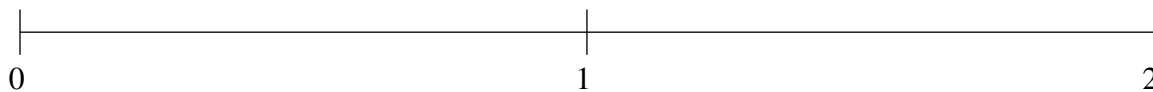
$$\frac{5}{12}, 1\frac{4}{5}, 1\frac{1}{5}, 1\frac{5}{12}, \frac{2}{3}$$



$$\frac{1}{4}, \frac{2}{3}, 1\frac{3}{4}, 1\frac{1}{5}, 1\frac{1}{2}$$



$$1\frac{5}{6}, \frac{4}{5}, 1\frac{1}{10}, \frac{1}{2}, 1\frac{1}{3}$$

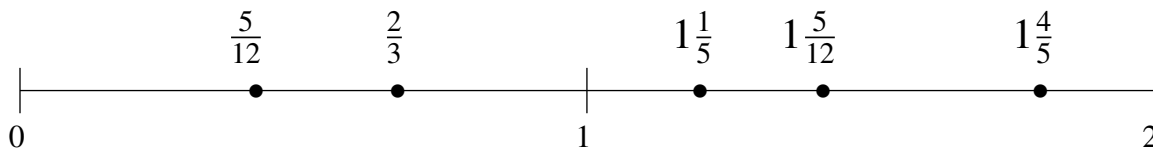


Ordenar Fracciones (C) Respuestas

Ordene cada conjunto de fracciones usando la recta numérica.

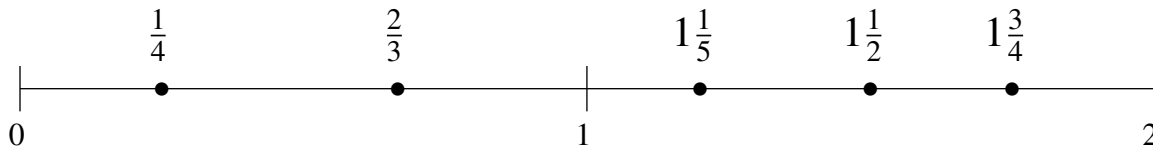
$$\frac{5}{12}, 1\frac{4}{5}, 1\frac{1}{5}, 1\frac{5}{12}, \frac{2}{3}$$

$$\frac{5}{12}, \frac{2}{3}, 1\frac{1}{5}, 1\frac{5}{12}, 1\frac{4}{5}$$



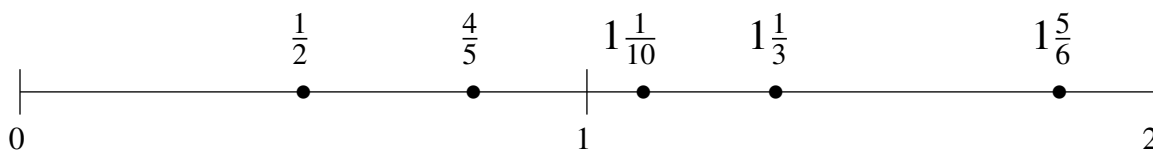
$$\frac{1}{4}, \frac{2}{3}, 1\frac{3}{4}, 1\frac{1}{5}, 1\frac{1}{2}$$

$$\frac{1}{4}, \frac{2}{3}, 1\frac{1}{5}, 1\frac{1}{2}, 1\frac{3}{4}$$



$$1\frac{5}{6}, \frac{4}{5}, 1\frac{1}{10}, \frac{1}{2}, 1\frac{1}{3}$$

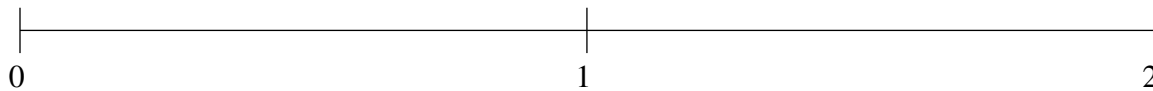
$$\frac{1}{2}, \frac{4}{5}, 1\frac{1}{10}, 1\frac{1}{3}, 1\frac{5}{6}$$



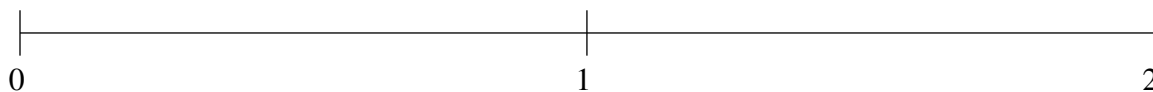
Ordenar Fracciones (D)

Ordene cada conjunto de fracciones usando la recta numérica.

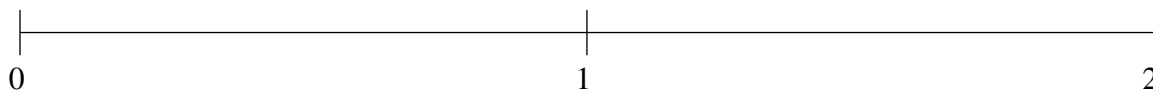
$$1\frac{5}{6}, \frac{2}{3}, \frac{1}{3}, 1\frac{1}{3}, \frac{1}{30}$$



$$1\frac{1}{6}, 1\frac{1}{2}, 1\frac{5}{6}, \frac{1}{4}, \frac{2}{3}$$



$$1\frac{2}{5}, \frac{1}{2}, 1\frac{7}{10}, \frac{5}{6}, 1\frac{11}{12}$$



Ordenar Fracciones (D) Respuestas

Ordene cada conjunto de fracciones usando la recta numérica.

$$1\frac{5}{6}, \frac{2}{3}, \frac{1}{3}, 1\frac{1}{3}, \frac{1}{30}$$

$$\frac{1}{30}, \frac{1}{3}, \frac{2}{3}, 1\frac{1}{3}, 1\frac{5}{6}$$



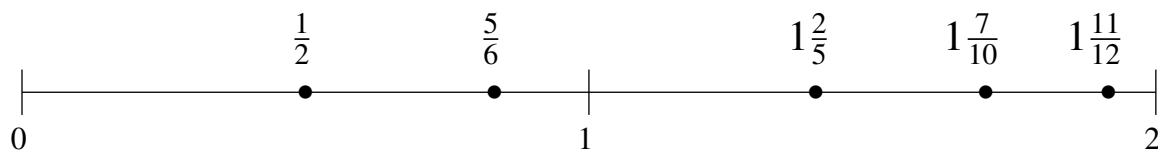
$$1\frac{1}{6}, 1\frac{1}{2}, 1\frac{5}{6}, \frac{1}{4}, \frac{2}{3}$$

$$\frac{1}{4}, \frac{2}{3}, 1\frac{1}{6}, 1\frac{1}{2}, 1\frac{5}{6}$$



$$1\frac{2}{5}, \frac{1}{2}, 1\frac{7}{10}, \frac{5}{6}, 1\frac{11}{12}$$

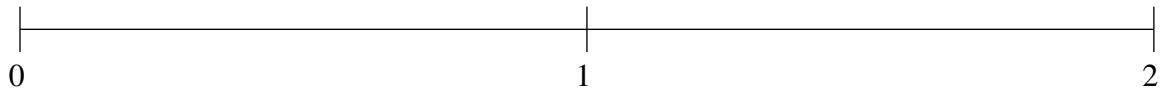
$$\frac{1}{2}, \frac{5}{6}, 1\frac{2}{5}, 1\frac{7}{10}, 1\frac{11}{12}$$



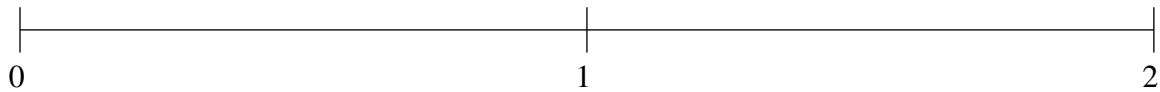
Ordenar Fracciones (E)

Ordene cada conjunto de fracciones usando la recta numérica.

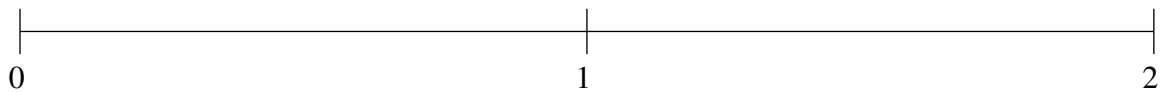
$$\frac{3}{4}, \frac{1}{3}, 1\frac{9}{10}, 1\frac{1}{30}, 1\frac{1}{2}$$



$$1\frac{11}{15}, 1\frac{1}{5}, \frac{1}{2}, \frac{3}{4}, 1\frac{1}{2}$$



$$\frac{13}{20}, 1\frac{1}{2}, 1\frac{3}{4}, \frac{7}{20}, 1\frac{2}{15}$$

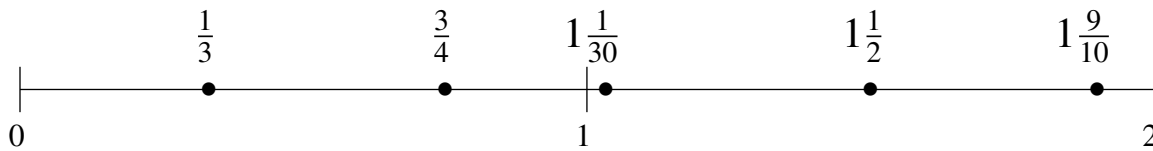


Ordenar Fracciones (E) Respuestas

Ordene cada conjunto de fracciones usando la recta numérica.

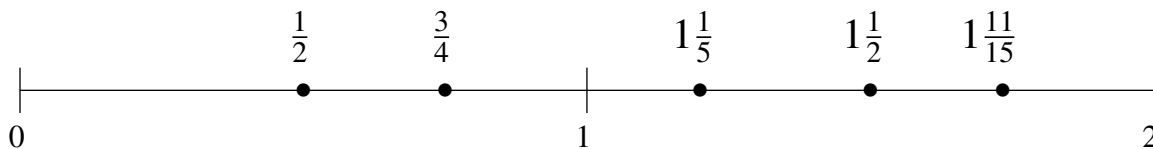
$$\frac{3}{4}, \frac{1}{3}, 1\frac{9}{10}, 1\frac{1}{30}, 1\frac{1}{2}$$

$$\frac{1}{3}, \frac{3}{4}, 1\frac{1}{30}, 1\frac{1}{2}, 1\frac{9}{10}$$



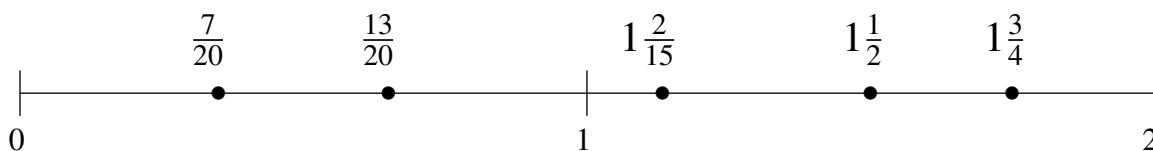
$$1\frac{11}{15}, 1\frac{1}{5}, \frac{1}{2}, \frac{3}{4}, 1\frac{1}{2}$$

$$\frac{1}{2}, \frac{3}{4}, 1\frac{1}{5}, 1\frac{1}{2}, 1\frac{11}{15}$$



$$\frac{13}{20}, 1\frac{1}{2}, 1\frac{3}{4}, \frac{7}{20}, 1\frac{2}{15}$$

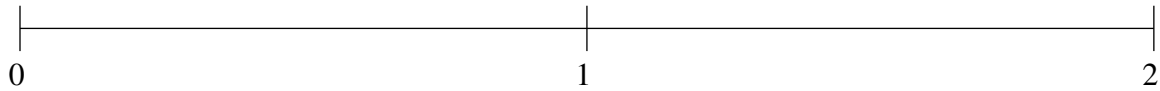
$$\frac{7}{20}, \frac{13}{20}, 1\frac{2}{15}, 1\frac{1}{2}, 1\frac{3}{4}$$



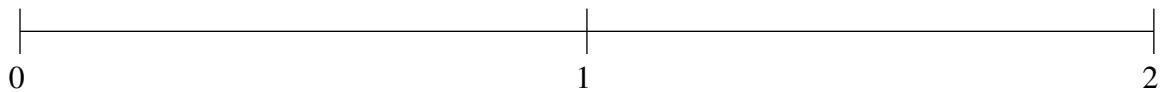
Ordenar Fracciones (F)

Ordene cada conjunto de fracciones usando la recta numérica.

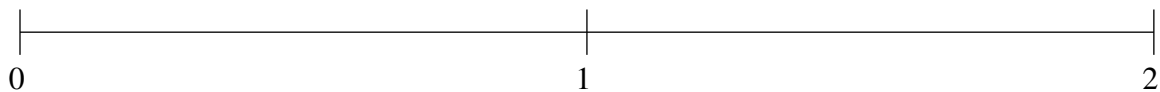
$$1\frac{1}{6}, 1\frac{7}{12}, \frac{5}{6}, 1\frac{14}{15}, \frac{7}{20}$$



$$\frac{2}{5}, 1\frac{1}{2}, 1\frac{5}{6}, 1\frac{1}{12}, \frac{2}{3}$$



$$1\frac{1}{4}, \frac{2}{3}, 1\frac{2}{3}, \frac{14}{15}, \frac{1}{10}$$



Ordenar Fracciones (F) Respuestas

Ordene cada conjunto de fracciones usando la recta numérica.

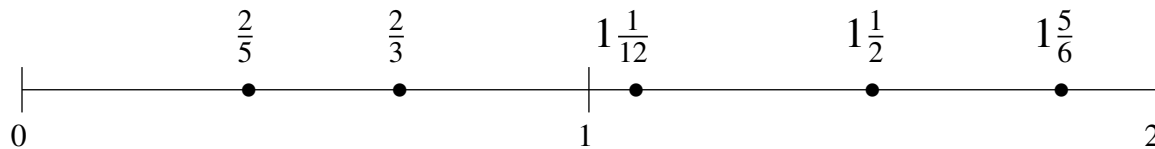
$$1\frac{1}{6}, 1\frac{7}{12}, \frac{5}{6}, 1\frac{14}{15}, \frac{7}{20}$$

$$\frac{7}{20}, \frac{5}{6}, 1\frac{1}{6}, 1\frac{7}{12}, 1\frac{14}{15}$$



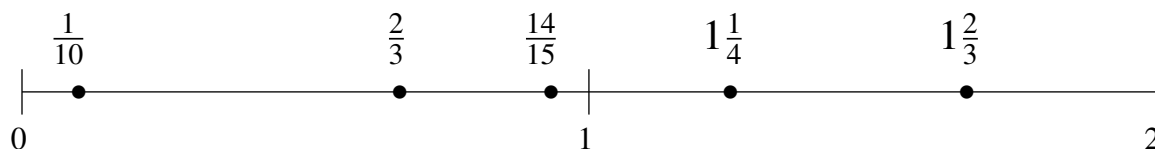
$$\frac{2}{5}, 1\frac{1}{2}, 1\frac{5}{6}, 1\frac{1}{12}, \frac{2}{3}$$

$$\frac{2}{5}, \frac{2}{3}, 1\frac{1}{12}, 1\frac{1}{2}, 1\frac{5}{6}$$



$$1\frac{1}{4}, \frac{2}{3}, 1\frac{2}{3}, \frac{14}{15}, \frac{1}{10}$$

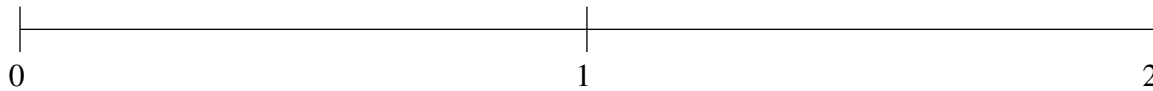
$$\frac{1}{10}, \frac{2}{3}, \frac{14}{15}, 1\frac{1}{4}, 1\frac{2}{3}$$



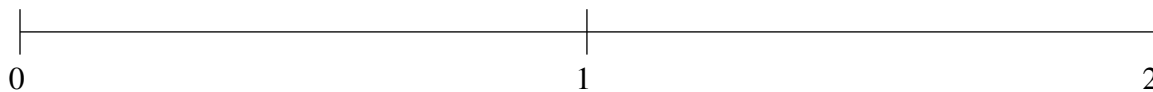
Ordenar Fracciones (G)

Ordene cada conjunto de fracciones usando la recta numérica.

$$\frac{2}{3}, 1\frac{1}{3}, \frac{1}{12}, 1\frac{4}{5}, 1\frac{1}{10}$$



$$1\frac{1}{6}, \frac{14}{15}, 1\frac{3}{4}, 1\frac{1}{2}, \frac{1}{3}$$



$$\frac{2}{3}, 1\frac{1}{6}, \frac{11}{12}, \frac{1}{12}, \frac{1}{3}$$

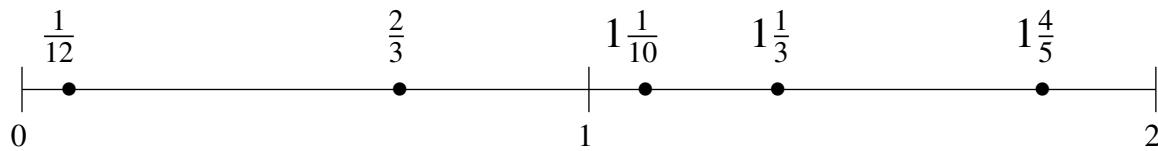


Ordenar Fracciones (G) Respuestas

Ordene cada conjunto de fracciones usando la recta numérica.

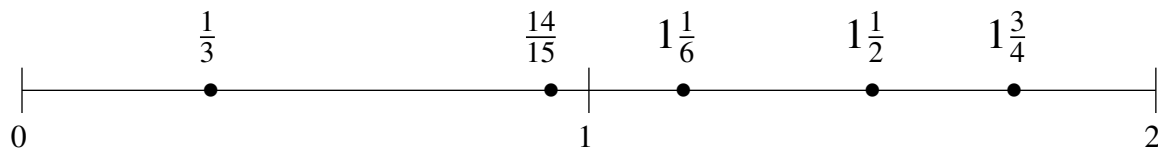
$$\frac{2}{3}, 1\frac{1}{3}, \frac{1}{12}, 1\frac{4}{5}, 1\frac{1}{10}$$

$$\frac{1}{12}, \frac{2}{3}, 1\frac{1}{10}, 1\frac{1}{3}, 1\frac{4}{5}$$



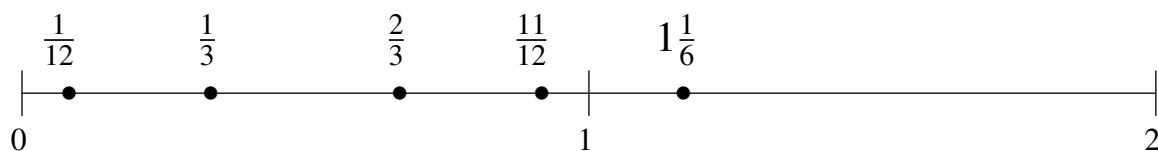
$$1\frac{1}{6}, \frac{14}{15}, 1\frac{3}{4}, 1\frac{1}{2}, \frac{1}{3}$$

$$\frac{1}{3}, \frac{14}{15}, 1\frac{1}{6}, 1\frac{1}{2}, 1\frac{3}{4}$$



$$\frac{2}{3}, 1\frac{1}{6}, \frac{11}{12}, \frac{1}{12}, \frac{1}{3}$$

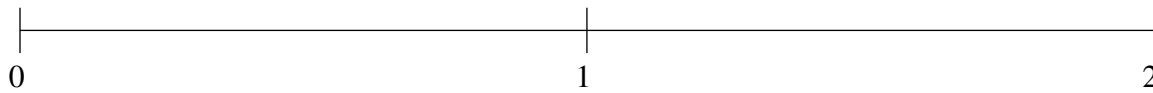
$$\frac{1}{12}, \frac{1}{3}, \frac{2}{3}, \frac{11}{12}, 1\frac{1}{6}$$



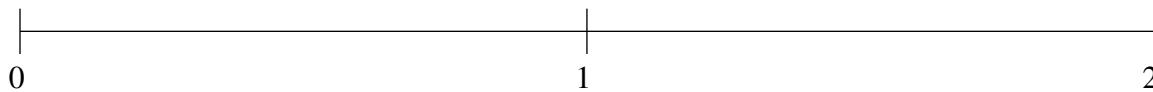
Ordenar Fracciones (H)

Ordene cada conjunto de fracciones usando la recta numérica.

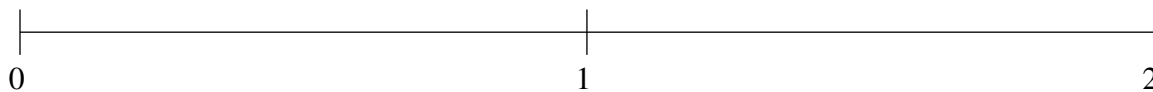
$$\frac{1}{2}, 1\frac{2}{5}, \frac{1}{10}, 1\frac{3}{4}, \frac{5}{6}$$



$$\frac{2}{3}, 1\frac{1}{4}, \frac{5}{12}, 1\frac{1}{2}, 1\frac{14}{15}$$



$$1\frac{7}{15}, 1\frac{13}{15}, \frac{11}{15}, \frac{1}{5}, \frac{1}{2}$$



Ordenar Fracciones (H) Respuestas

Ordene cada conjunto de fracciones usando la recta numérica.

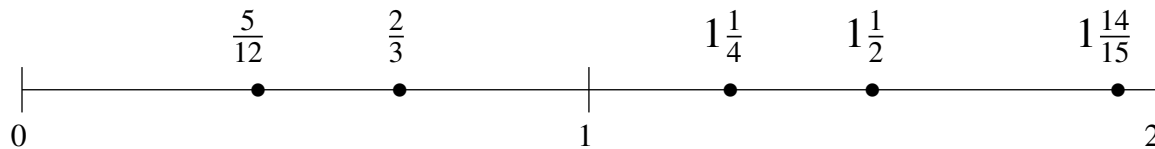
$$\frac{1}{2}, 1\frac{2}{5}, \frac{1}{10}, 1\frac{3}{4}, \frac{5}{6}$$

$$\frac{1}{10}, \frac{1}{2}, \frac{5}{6}, 1\frac{2}{5}, 1\frac{3}{4}$$



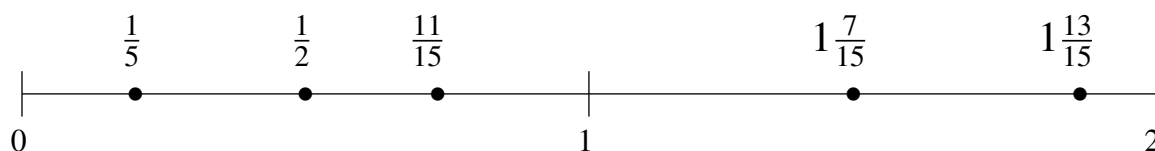
$$\frac{2}{3}, 1\frac{1}{4}, \frac{5}{12}, 1\frac{1}{2}, 1\frac{14}{15}$$

$$\frac{5}{12}, \frac{2}{3}, 1\frac{1}{4}, 1\frac{1}{2}, 1\frac{14}{15}$$



$$1\frac{7}{15}, 1\frac{13}{15}, \frac{11}{15}, \frac{1}{5}, \frac{1}{2}$$

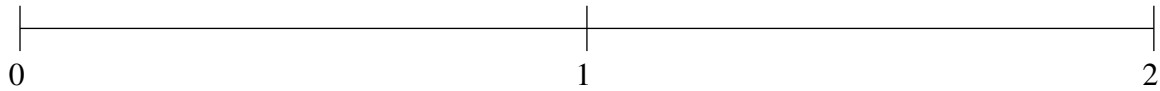
$$\frac{1}{5}, \frac{1}{2}, \frac{11}{15}, 1\frac{7}{15}, 1\frac{13}{15}$$



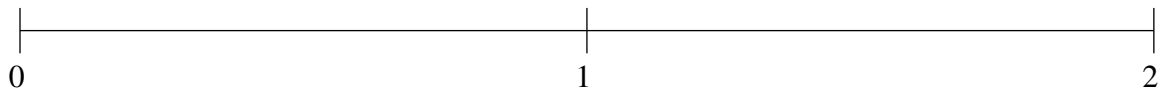
Ordenar Fracciones (I)

Ordene cada conjunto de fracciones usando la recta numérica.

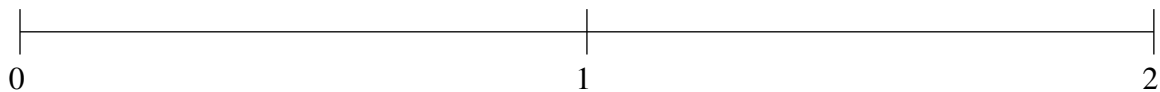
$$1\frac{1}{12}, \frac{1}{5}, 1\frac{5}{6}, \frac{2}{3}, 1\frac{1}{3}$$



$$1\frac{1}{3}, 1\frac{9}{10}, \frac{1}{15}, \frac{2}{5}, \frac{2}{3}$$



$$1\frac{1}{3}, 1\frac{9}{10}, \frac{17}{20}, 1\frac{2}{3}, \frac{1}{6}$$

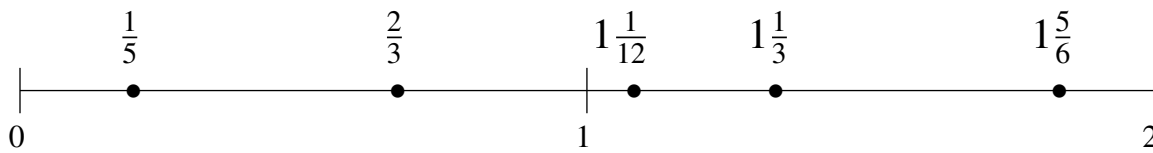


Ordenar Fracciones (I) Respuestas

Ordene cada conjunto de fracciones usando la recta numérica.

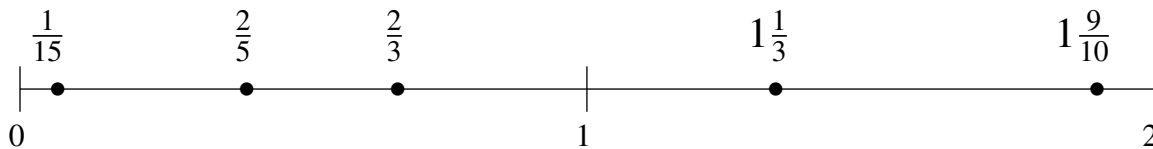
$$1\frac{1}{12}, \frac{1}{5}, 1\frac{5}{6}, \frac{2}{3}, 1\frac{1}{3}$$

$$\frac{1}{5}, \frac{2}{3}, 1\frac{1}{12}, 1\frac{1}{3}, 1\frac{5}{6}$$



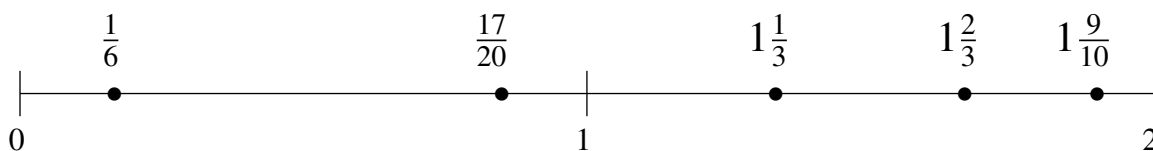
$$1\frac{1}{3}, 1\frac{9}{10}, \frac{1}{15}, \frac{2}{5}, \frac{2}{3}$$

$$\frac{1}{15}, \frac{2}{5}, \frac{2}{3}, 1\frac{1}{3}, 1\frac{9}{10}$$



$$1\frac{1}{3}, 1\frac{9}{10}, \frac{17}{20}, 1\frac{2}{3}, \frac{1}{6}$$

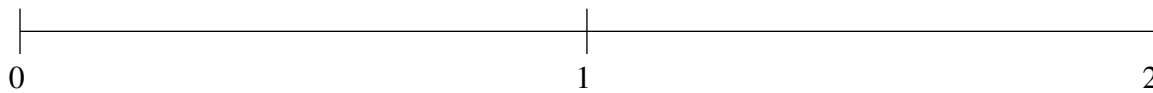
$$\frac{1}{6}, \frac{17}{20}, 1\frac{1}{3}, 1\frac{2}{3}, 1\frac{9}{10}$$



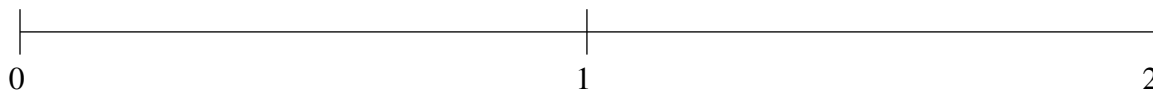
Ordenar Fracciones (J)

Ordene cada conjunto de fracciones usando la recta numérica.

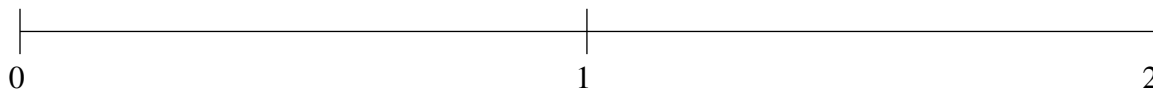
$$1\frac{1}{3}, \frac{2}{5}, 1\frac{3}{5}, \frac{1}{12}, \frac{2}{3}$$



$$\frac{13}{20}, 1\frac{1}{2}, 1\frac{1}{6}, \frac{19}{20}, \frac{2}{5}$$



$$\frac{3}{5}, 1\frac{1}{4}, 1\frac{1}{2}, \frac{9}{10}, \frac{1}{3}$$



Ordenar Fracciones (J) Respuestas

Ordene cada conjunto de fracciones usando la recta numérica.

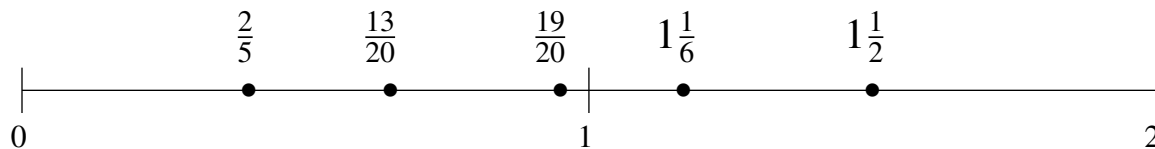
$$1\frac{1}{3}, \frac{2}{5}, 1\frac{3}{5}, \frac{1}{12}, \frac{2}{3}$$

$$\frac{1}{12}, \frac{2}{5}, \frac{2}{3}, 1\frac{1}{3}, 1\frac{3}{5}$$



$$\frac{13}{20}, 1\frac{1}{2}, 1\frac{1}{6}, \frac{19}{20}, \frac{2}{5}$$

$$\frac{2}{5}, \frac{13}{20}, \frac{19}{20}, 1\frac{1}{6}, 1\frac{1}{2}$$



$$\frac{3}{5}, 1\frac{1}{4}, 1\frac{1}{2}, \frac{9}{10}, \frac{1}{3}$$

$$\frac{1}{3}, \frac{3}{5}, \frac{9}{10}, 1\frac{1}{4}, 1\frac{1}{2}$$

