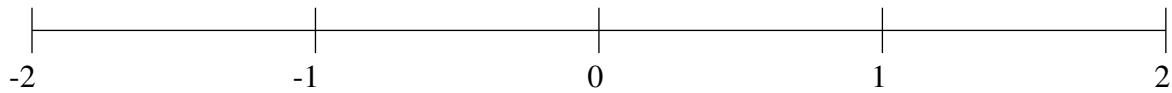


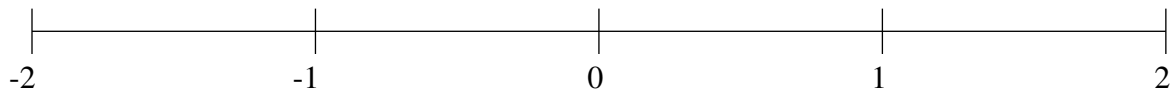
## Ordenar Fracciones (A)

Ordene cada conjunto de fracciones usando la recta numérica.

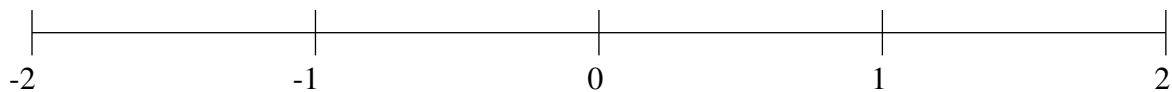
$$1\frac{11}{21}, 1\frac{5}{6}, -1\frac{9}{23}, -1\frac{5}{38}, -\frac{1}{3}, -1\frac{2}{3}, 1\frac{1}{6}, \frac{2}{3}$$



$$\frac{13}{34}, -\frac{19}{26}, 1\frac{11}{43}, 1\frac{17}{18}, -\frac{5}{19}, -1\frac{13}{27}, \frac{4}{5}, 1\frac{23}{50}$$



$$-\frac{13}{15}, \frac{3}{47}, -1\frac{1}{2}, 1\frac{2}{23}, \frac{1}{3}, -1\frac{1}{7}, -\frac{5}{23}, 1\frac{3}{7}$$

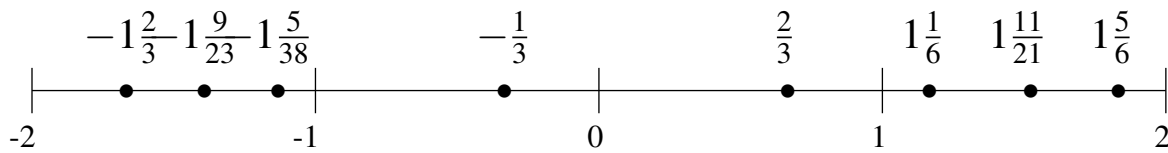


## Ordenar Fracciones (A) Respuestas

Ordene cada conjunto de fracciones usando la recta numérica.

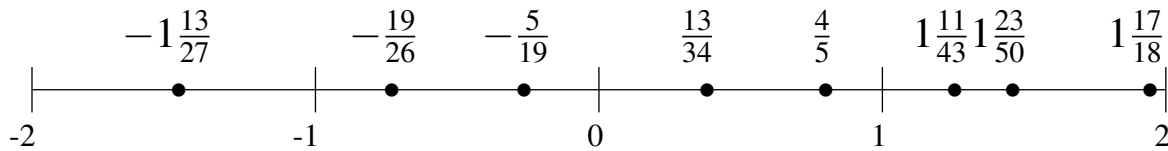
$$1\frac{11}{21}, 1\frac{5}{6}, -1\frac{9}{23}, -1\frac{5}{38}, -\frac{1}{3}, -1\frac{2}{3}, 1\frac{1}{6}, \frac{2}{3}$$

$$-1\frac{2}{3}, -1\frac{9}{23}, -1\frac{5}{38}, -\frac{1}{3}, \frac{2}{3}, 1\frac{1}{6}, 1\frac{11}{21}, 1\frac{5}{6}$$



$$\frac{13}{34}, -\frac{19}{26}, 1\frac{11}{43}, 1\frac{17}{18}, -\frac{5}{19}, -1\frac{13}{27}, \frac{4}{5}, 1\frac{23}{50}$$

$$-1\frac{13}{27}, -\frac{19}{26}, -\frac{5}{19}, \frac{13}{34}, \frac{4}{5}, 1\frac{11}{43}, 1\frac{23}{50}, 1\frac{17}{18}$$



$$-\frac{13}{15}, \frac{3}{47}, -1\frac{1}{2}, 1\frac{2}{23}, \frac{1}{3}, -1\frac{1}{7}, -\frac{5}{23}, 1\frac{3}{7}$$

$$-1\frac{1}{2}, -1\frac{1}{7}, -\frac{13}{15}, -\frac{5}{23}, \frac{3}{47}, \frac{1}{3}, 1\frac{2}{23}, 1\frac{3}{7}$$

