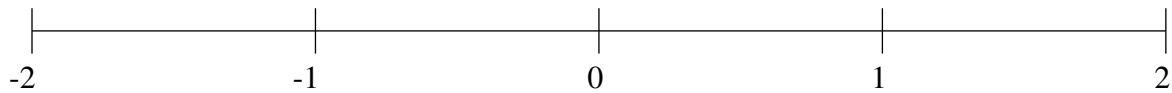


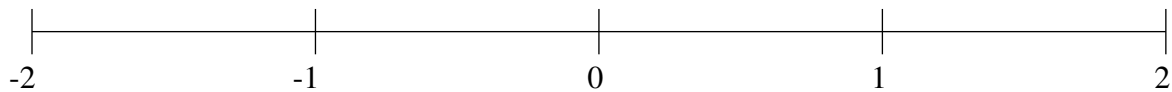
Ordenar Fracciones (I)

Ordene cada conjunto de fracciones usando la recta numérica.

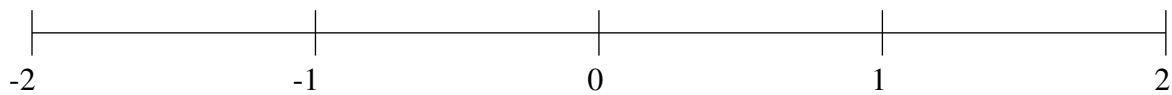
$$\frac{4}{7}, -1\frac{47}{48}, -1\frac{1}{5}, 1\frac{1}{2}, -\frac{1}{4}, -\frac{28}{39}, 1\frac{5}{6}, \frac{13}{15}$$



$$1\frac{5}{17}, -\frac{1}{3}, 1\frac{5}{8}, \frac{19}{21}, -1\frac{2}{7}, 1\frac{35}{38}, -1\frac{1}{17}, -\frac{7}{9}$$



$$-1\frac{23}{41}, \frac{28}{31}, -\frac{1}{2}, -\frac{25}{32}, \frac{19}{53}, 1\frac{3}{11}, \frac{22}{35}, -1\frac{3}{11}$$

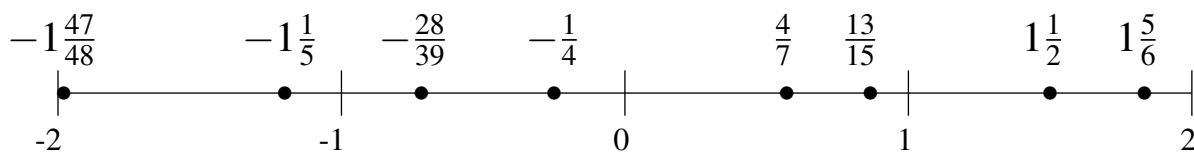


Ordenar Fracciones (I) Respuestas

Ordene cada conjunto de fracciones usando la recta numérica.

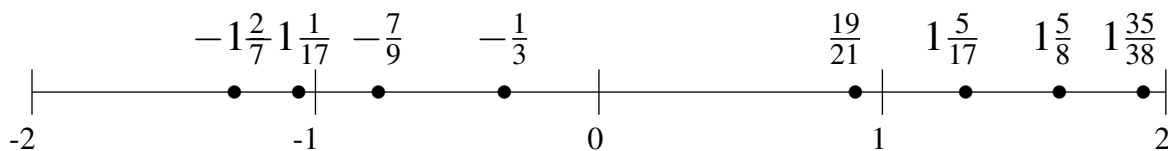
$$\frac{4}{7}, -1\frac{47}{48}, -1\frac{1}{5}, 1\frac{1}{2}, -\frac{1}{4}, -\frac{28}{39}, 1\frac{5}{6}, \frac{13}{15}$$

$$-1\frac{47}{48}, -1\frac{1}{5}, -\frac{28}{39}, -\frac{1}{4}, \frac{4}{7}, \frac{13}{15}, 1\frac{1}{2}, 1\frac{5}{6}$$



$$1\frac{5}{17}, -\frac{1}{3}, 1\frac{5}{8}, \frac{19}{21}, -1\frac{2}{7}, 1\frac{35}{38}, -1\frac{1}{17}, -\frac{7}{9}$$

$$-1\frac{2}{7}, -1\frac{1}{17}, -\frac{7}{9}, -\frac{1}{3}, \frac{19}{21}, 1\frac{5}{17}, 1\frac{5}{8}, 1\frac{35}{38}$$



$$-1\frac{23}{41}, \frac{28}{31}, -\frac{1}{2}, -\frac{25}{32}, \frac{19}{53}, 1\frac{3}{11}, \frac{22}{35}, -1\frac{3}{11}$$

$$-1\frac{23}{41}, -1\frac{3}{11}, -\frac{25}{32}, -\frac{1}{2}, \frac{19}{53}, \frac{22}{35}, \frac{28}{31}, 1\frac{3}{11}$$

