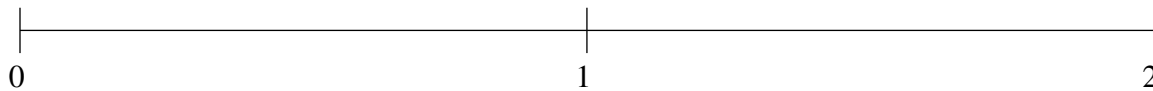


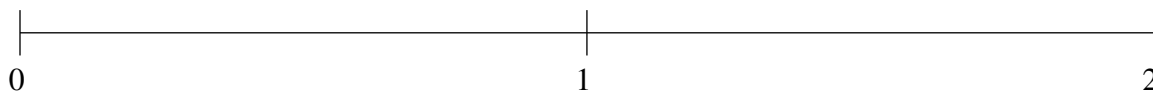
Ordenar Fracciones (B)

Ordene cada conjunto de fracciones usando la recta numérica.

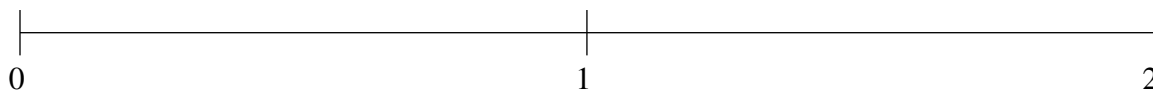
$$1\frac{3}{7}, \frac{1}{7}, 1\frac{3}{17}, 1\frac{52}{53}, 1\frac{2}{3}$$



$$1\frac{5}{11}, \frac{1}{3}, 1\frac{1}{4}, \frac{13}{24}, \frac{4}{5}$$



$$1\frac{13}{69}, \frac{1}{4}, \frac{27}{44}, \frac{6}{7}, 1\frac{1}{2}$$

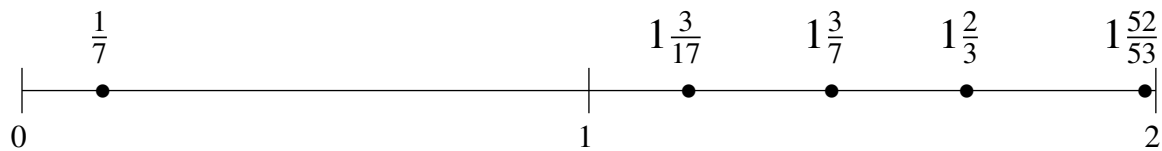


Ordenar Fracciones (B) Respuestas

Ordene cada conjunto de fracciones usando la recta numérica.

$$1\frac{3}{7}, \frac{1}{7}, 1\frac{3}{17}, 1\frac{52}{53}, 1\frac{2}{3}$$

$$\frac{1}{7}, 1\frac{3}{17}, 1\frac{3}{7}, 1\frac{2}{3}, 1\frac{52}{53}$$



$$1\frac{5}{11}, \frac{1}{3}, 1\frac{1}{4}, \frac{13}{24}, \frac{4}{5}$$

$$\frac{1}{3}, \frac{13}{24}, \frac{4}{5}, 1\frac{1}{4}, 1\frac{5}{11}$$



$$1\frac{13}{69}, \frac{1}{4}, \frac{27}{44}, \frac{6}{7}, 1\frac{1}{2}$$

$$\frac{1}{4}, \frac{27}{44}, \frac{6}{7}, 1\frac{13}{69}, 1\frac{1}{2}$$

