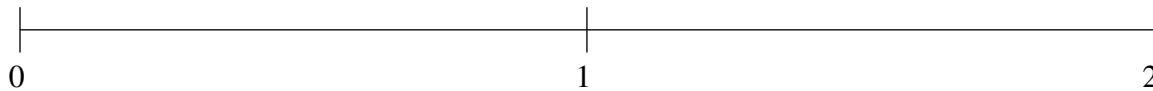


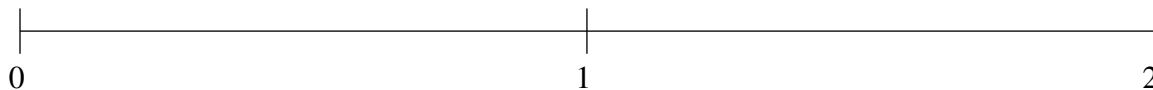
## Ordenar Fracciones (C)

Ordene cada conjunto de fracciones usando la recta numérica.

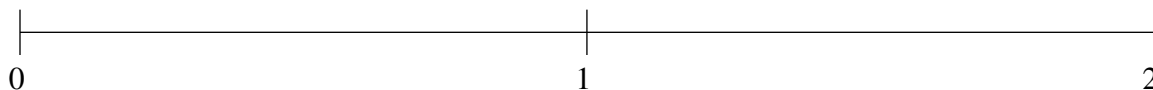
$$\frac{1}{5}, \frac{23}{29}, 1\frac{24}{25}, 1\frac{1}{2}, 1\frac{3}{4}$$



$$1\frac{2}{5}, \frac{46}{49}, \frac{3}{50}, \frac{13}{31}, 1\frac{33}{40}$$



$$1\frac{11}{15}, \frac{1}{14}, 1\frac{1}{5}, 1\frac{1}{2}, \frac{7}{9}$$

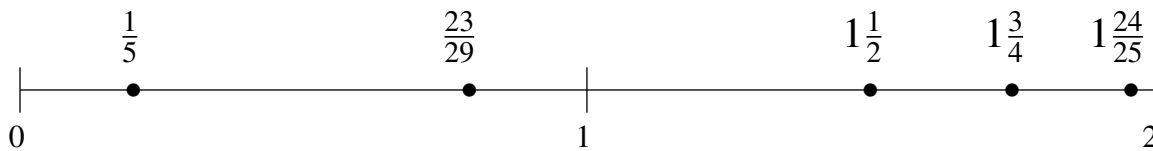


## Ordenar Fracciones (C) Respuestas

Ordene cada conjunto de fracciones usando la recta numérica.

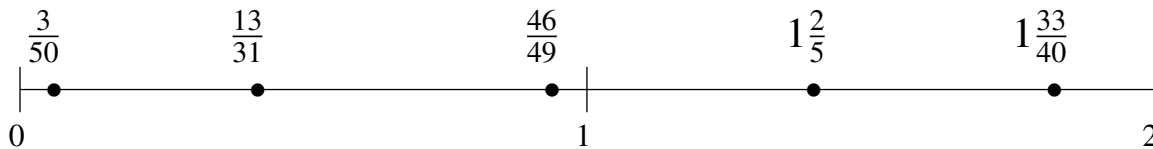
$$\frac{1}{5}, \frac{23}{29}, 1\frac{24}{25}, 1\frac{1}{2}, 1\frac{3}{4}$$

$$\frac{1}{5}, \frac{23}{29}, 1\frac{1}{2}, 1\frac{3}{4}, 1\frac{24}{25}$$



$$1\frac{2}{5}, \frac{46}{49}, \frac{3}{50}, \frac{13}{31}, 1\frac{33}{40}$$

$$\frac{3}{50}, \frac{13}{31}, \frac{46}{49}, 1\frac{2}{5}, 1\frac{33}{40}$$



$$1\frac{11}{15}, \frac{1}{14}, 1\frac{1}{5}, 1\frac{1}{2}, \frac{7}{9}$$

$$\frac{1}{14}, \frac{7}{9}, 1\frac{1}{5}, 1\frac{1}{2}, 1\frac{11}{15}$$

