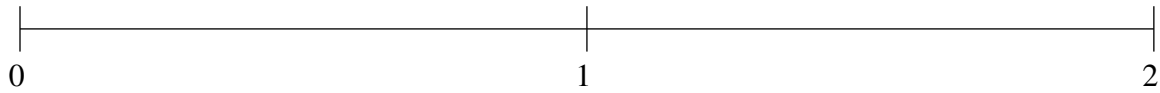


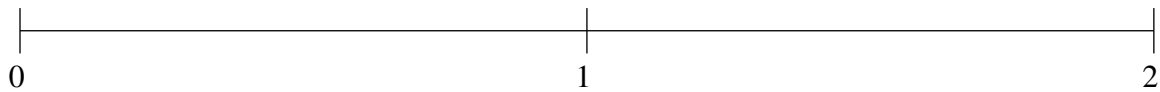
Ordenar Fracciones (D)

Ordene cada conjunto de fracciones usando la recta numérica.

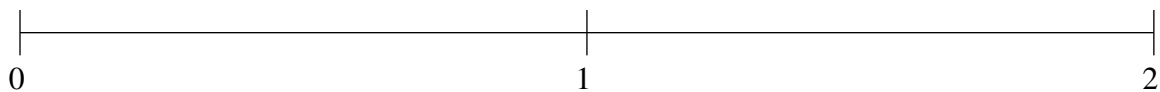
$$\frac{5}{9}, 1\frac{5}{11}, \frac{1}{3}, 1\frac{32}{35}, \frac{13}{15}$$



$$\frac{2}{19}, \frac{7}{9}, 1\frac{13}{14}, 1\frac{19}{43}, \frac{3}{8}$$



$$\frac{9}{59}, \frac{9}{11}, 1\frac{12}{13}, \frac{15}{28}, 1\frac{23}{38}$$

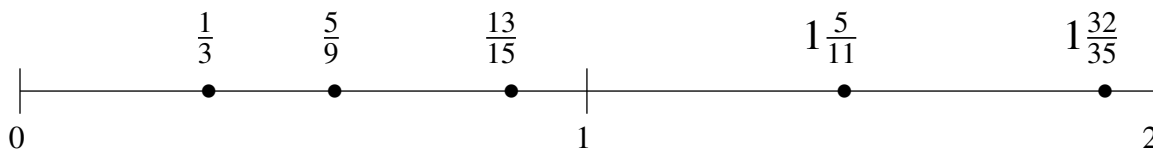


Ordenar Fracciones (D) Respuestas

Ordene cada conjunto de fracciones usando la recta numérica.

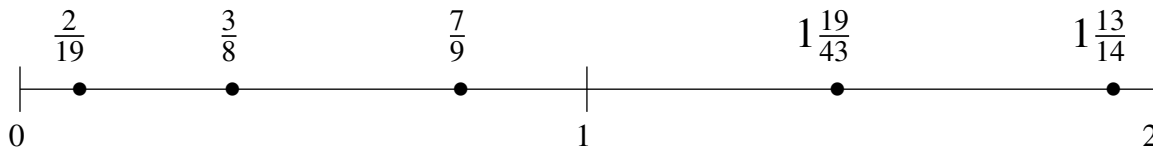
$$\frac{5}{9}, 1\frac{5}{11}, \frac{1}{3}, 1\frac{32}{35}, \frac{13}{15}$$

$$\frac{1}{3}, \frac{5}{9}, \frac{13}{15}, 1\frac{5}{11}, 1\frac{32}{35}$$



$$\frac{2}{19}, \frac{7}{9}, 1\frac{13}{14}, 1\frac{19}{43}, \frac{3}{8}$$

$$\frac{2}{19}, \frac{3}{8}, \frac{7}{9}, 1\frac{19}{43}, 1\frac{13}{14}$$



$$\frac{9}{59}, \frac{9}{11}, 1\frac{12}{13}, \frac{15}{28}, 1\frac{23}{38}$$

$$\frac{9}{59}, \frac{15}{28}, \frac{9}{11}, 1\frac{23}{38}, 1\frac{12}{13}$$

