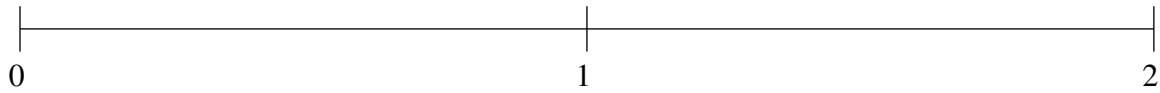


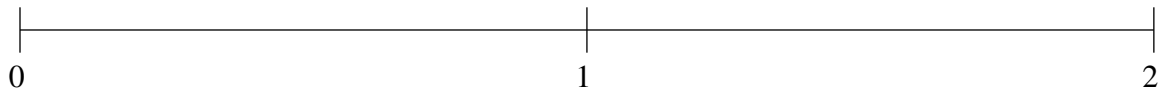
Ordenar Fracciones (E)

Ordene cada conjunto de fracciones usando la recta numérica.

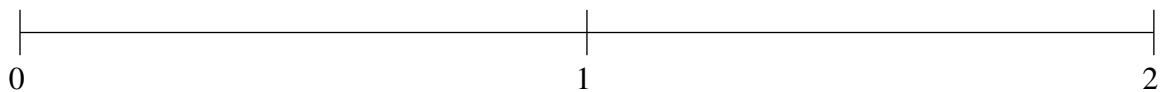
$$\frac{5}{7}, \frac{1}{9}, 1\frac{1}{2}, \frac{1}{2}, 1\frac{1}{21}$$



$$1\frac{5}{7}, 1\frac{9}{19}, \frac{11}{16}, \frac{24}{25}, \frac{1}{8}$$



$$\frac{2}{5}, 1\frac{1}{5}, \frac{3}{4}, \frac{9}{70}, 1\frac{7}{16}$$

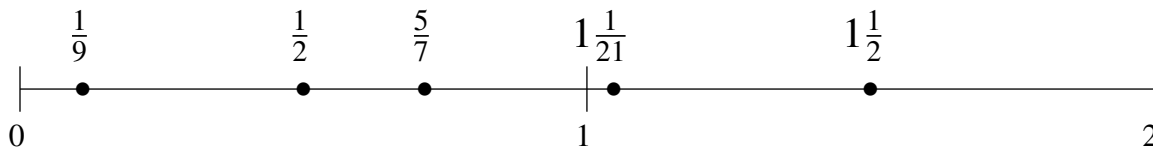


Ordenar Fracciones (E) Respuestas

Ordene cada conjunto de fracciones usando la recta numérica.

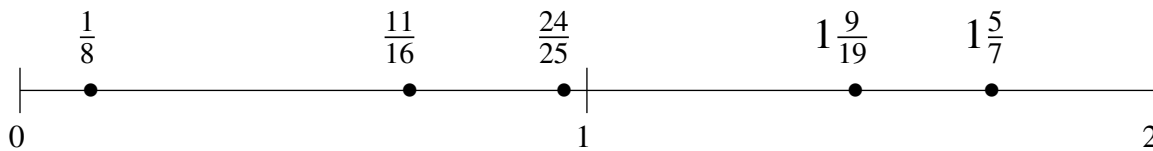
$$\frac{5}{7}, \frac{1}{9}, 1\frac{1}{2}, \frac{1}{2}, 1\frac{1}{21}$$

$$\frac{1}{9}, \frac{1}{2}, \frac{5}{7}, 1\frac{1}{21}, 1\frac{1}{2}$$



$$1\frac{5}{7}, 1\frac{9}{19}, \frac{11}{16}, \frac{24}{25}, \frac{1}{8}$$

$$\frac{1}{8}, \frac{11}{16}, \frac{24}{25}, 1\frac{9}{19}, 1\frac{5}{7}$$



$$\frac{2}{5}, 1\frac{1}{5}, \frac{3}{4}, \frac{9}{70}, 1\frac{7}{16}$$

$$\frac{9}{70}, \frac{2}{5}, \frac{3}{4}, 1\frac{1}{5}, 1\frac{7}{16}$$

