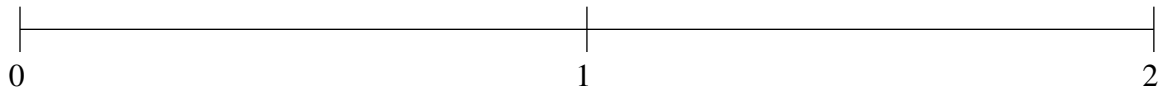


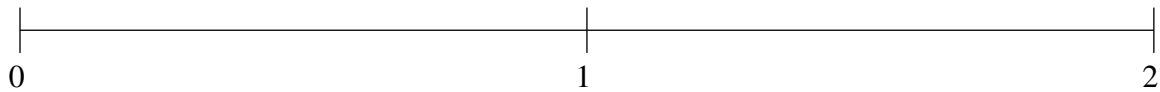
Ordenar Fracciones (G)

Ordene cada conjunto de fracciones usando la recta numérica.

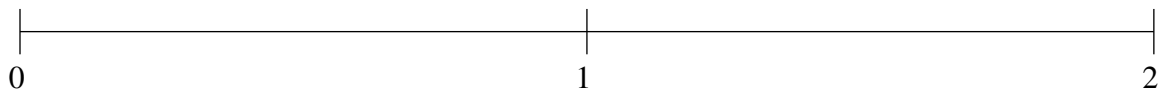
$$\frac{13}{14}, 1\frac{43}{46}, \frac{17}{66}, \frac{13}{23}, 1\frac{11}{16}$$



$$\frac{3}{7}, 1\frac{1}{2}, 1\frac{20}{21}, \frac{4}{19}, 1\frac{3}{4}$$



$$1\frac{4}{5}, \frac{2}{3}, 1\frac{3}{13}, 1\frac{1}{2}, \frac{29}{32}$$

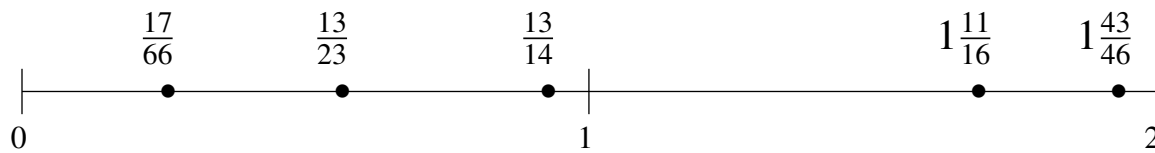


Ordenar Fracciones (G) Respuestas

Ordene cada conjunto de fracciones usando la recta numérica.

$$\frac{13}{14}, 1\frac{43}{46}, \frac{17}{66}, \frac{13}{23}, 1\frac{11}{16}$$

$$\frac{17}{66}, \frac{13}{23}, \frac{13}{14}, 1\frac{11}{16}, 1\frac{43}{46}$$



$$\frac{3}{7}, 1\frac{1}{2}, 1\frac{20}{21}, \frac{4}{19}, 1\frac{3}{4}$$

$$\frac{4}{19}, \frac{3}{7}, 1\frac{1}{2}, 1\frac{3}{4}, 1\frac{20}{21}$$



$$1\frac{4}{5}, \frac{2}{3}, 1\frac{3}{13}, 1\frac{1}{2}, \frac{29}{32}$$

$$\frac{2}{3}, \frac{29}{32}, 1\frac{3}{13}, 1\frac{1}{2}, 1\frac{4}{5}$$

