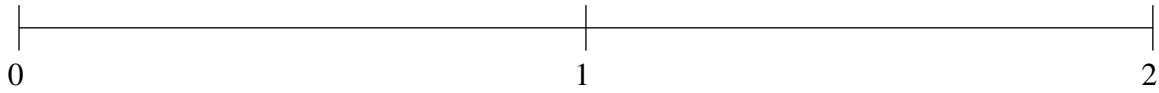


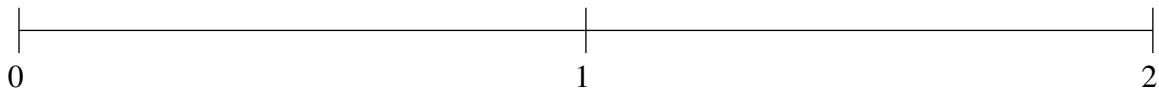
## Ordenar Fracciones (H)

Ordene cada conjunto de fracciones usando la recta numérica.

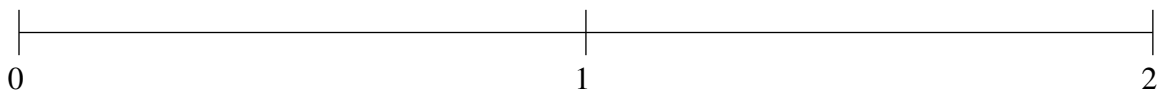
$$\frac{28}{39}, 1\frac{18}{19}, 1\frac{2}{3}, 1\frac{2}{9}, \frac{1}{2}$$



$$\frac{2}{11}, 1\frac{41}{100}, \frac{1}{2}, \frac{5}{6}, 1\frac{13}{21}$$



$$1\frac{51}{55}, 1\frac{3}{5}, \frac{21}{44}, 1\frac{7}{29}, \frac{79}{88}$$

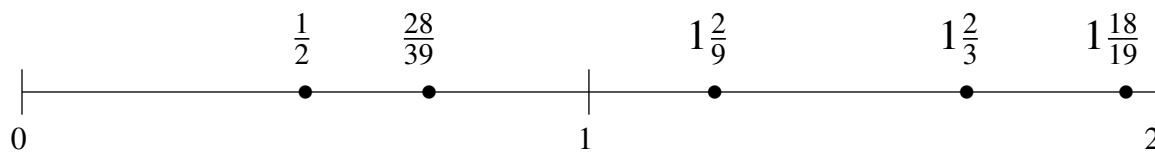


## Ordenar Fracciones (H) Respuestas

Ordene cada conjunto de fracciones usando la recta numérica.

$$\frac{28}{39}, 1\frac{18}{19}, 1\frac{2}{3}, 1\frac{2}{9}, \frac{1}{2}$$

$$\frac{1}{2}, \frac{28}{39}, 1\frac{2}{9}, 1\frac{2}{3}, 1\frac{18}{19}$$



$$\frac{2}{11}, 1\frac{41}{100}, \frac{1}{2}, \frac{5}{6}, 1\frac{13}{21}$$

$$\frac{2}{11}, \frac{1}{2}, \frac{5}{6}, 1\frac{41}{100}, 1\frac{13}{21}$$



$$1\frac{51}{55}, 1\frac{3}{5}, \frac{21}{44}, 1\frac{7}{29}, \frac{79}{88}$$

$$\frac{21}{44}, \frac{79}{88}, 1\frac{7}{29}, 1\frac{3}{5}, 1\frac{51}{55}$$

