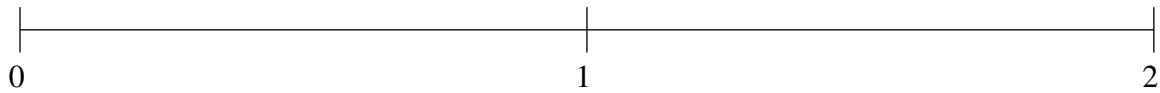


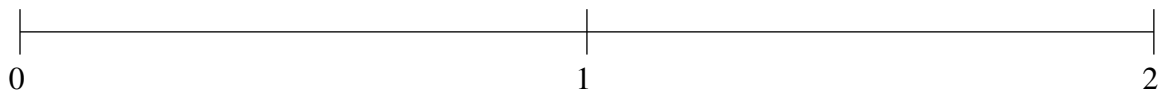
Ordenar Fracciones (I)

Ordene cada conjunto de fracciones usando la recta numérica.

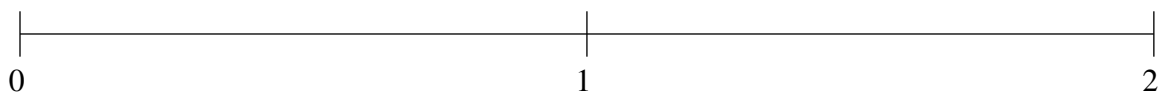
$$1\frac{2}{17}, 1\frac{8}{13}, \frac{1}{2}, \frac{1}{19}, \frac{4}{5}$$



$$\frac{9}{20}, 1\frac{1}{3}, \frac{1}{10}, \frac{39}{53}, 1\frac{3}{4}$$



$$\frac{5}{6}, 1\frac{7}{8}, 1\frac{1}{4}, \frac{26}{45}, \frac{9}{40}$$

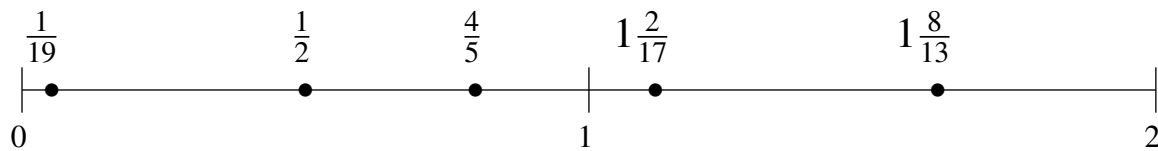


Ordenar Fracciones (I) Respuestas

Ordene cada conjunto de fracciones usando la recta numérica.

$$1\frac{2}{17}, 1\frac{8}{13}, \frac{1}{2}, \frac{1}{19}, \frac{4}{5}$$

$$\frac{1}{19}, \frac{1}{2}, \frac{4}{5}, 1\frac{2}{17}, 1\frac{8}{13}$$



$$\frac{9}{20}, 1\frac{1}{3}, \frac{1}{10}, \frac{39}{53}, 1\frac{3}{4}$$

$$\frac{1}{10}, \frac{9}{20}, \frac{39}{53}, 1\frac{1}{3}, 1\frac{3}{4}$$



$$\frac{5}{6}, 1\frac{7}{8}, 1\frac{1}{4}, \frac{26}{45}, \frac{9}{40}$$

$$\frac{9}{40}, \frac{26}{45}, \frac{5}{6}, 1\frac{1}{4}, 1\frac{7}{8}$$

