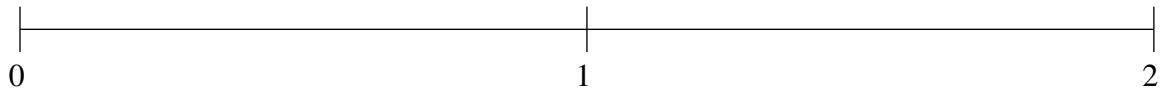


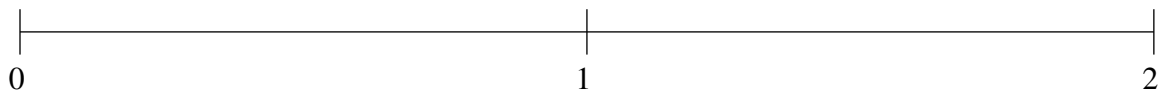
Ordenar Fracciones (A)

Ordene cada conjunto de fracciones usando la recta numérica.

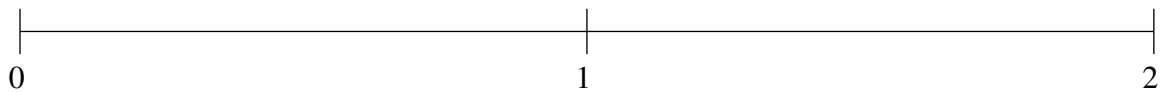
$$\frac{3}{20}, \frac{4}{5}, 1\frac{2}{5}, \frac{1}{2}, 1\frac{21}{25}$$



$$1\frac{1}{4}, \frac{3}{10}, 1\frac{1}{2}, \frac{9}{10}, 1\frac{4}{5}$$



$$\frac{1}{4}, 1\frac{13}{100}, \frac{43}{50}, 1\frac{1}{2}, \frac{1}{2}$$

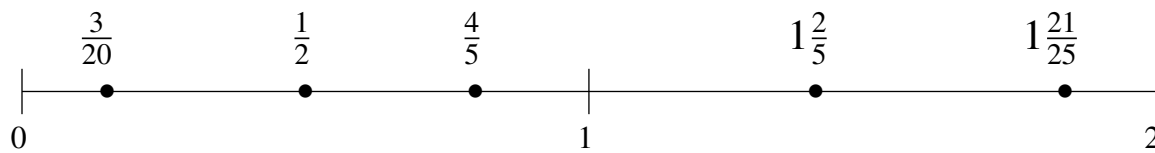


Ordenar Fracciones (A) Respuestas

Ordene cada conjunto de fracciones usando la recta numérica.

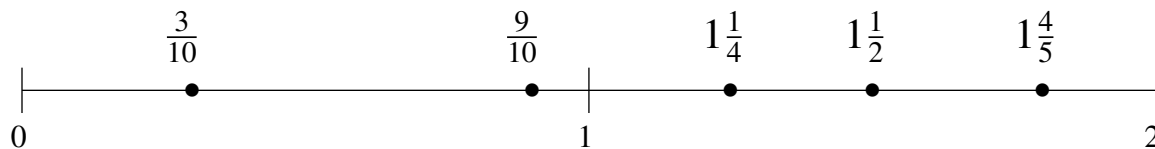
$$\frac{3}{20}, \frac{4}{5}, 1\frac{2}{5}, \frac{1}{2}, 1\frac{21}{25}$$

$$\frac{3}{20}, \frac{1}{2}, \frac{4}{5}, 1\frac{2}{5}, 1\frac{21}{25}$$



$$1\frac{1}{4}, \frac{3}{10}, 1\frac{1}{2}, \frac{9}{10}, 1\frac{4}{5}$$

$$\frac{3}{10}, \frac{9}{10}, 1\frac{1}{4}, 1\frac{1}{2}, 1\frac{4}{5}$$



$$\frac{1}{4}, 1\frac{13}{100}, \frac{43}{50}, 1\frac{1}{2}, \frac{1}{2}$$

$$\frac{1}{4}, \frac{1}{2}, \frac{43}{50}, 1\frac{13}{100}, 1\frac{1}{2}$$

