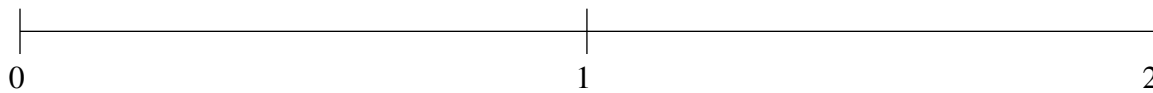


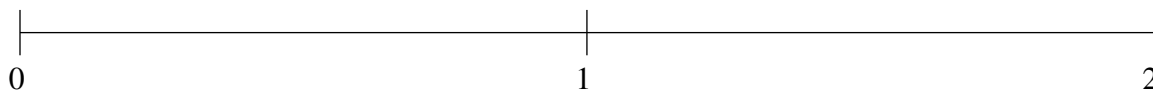
Ordenar Fracciones (B)

Ordene cada conjunto de fracciones usando la recta numérica.

$$\frac{18}{25}, \frac{1}{10}, \frac{1}{2}, 1\frac{1}{2}, 1\frac{4}{5}$$



$$1\frac{6}{25}, \frac{2}{5}, 1\frac{3}{4}, \frac{4}{5}, 1\frac{1}{2}$$



$$\frac{1}{10}, 1\frac{4}{5}, \frac{3}{4}, 1\frac{2}{5}, \frac{1}{2}$$

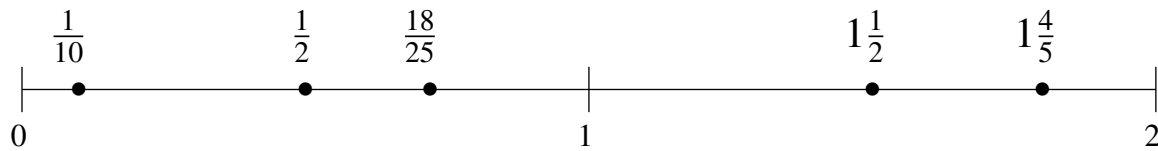


Ordenar Fracciones (B) Respuestas

Ordene cada conjunto de fracciones usando la recta numérica.

$$\frac{18}{25}, \frac{1}{10}, \frac{1}{2}, 1\frac{1}{2}, 1\frac{4}{5}$$

$$\frac{1}{10}, \frac{1}{2}, \frac{18}{25}, 1\frac{1}{2}, 1\frac{4}{5}$$



$$1\frac{6}{25}, \frac{2}{5}, 1\frac{3}{4}, \frac{4}{5}, 1\frac{1}{2}$$

$$\frac{2}{5}, \frac{4}{5}, 1\frac{6}{25}, 1\frac{1}{2}, 1\frac{3}{4}$$



$$\frac{1}{10}, 1\frac{4}{5}, \frac{3}{4}, 1\frac{2}{5}, \frac{1}{2}$$

$$\frac{1}{10}, \frac{1}{2}, \frac{3}{4}, 1\frac{2}{5}, 1\frac{4}{5}$$

