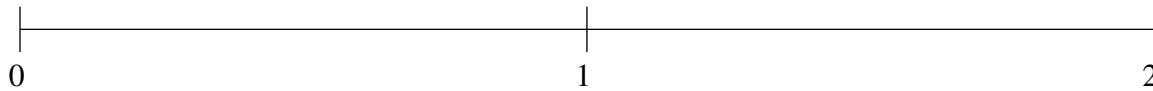


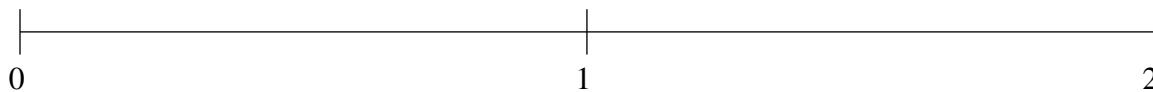
Ordenar Fracciones (D)

Ordene cada conjunto de fracciones usando la recta numérica.

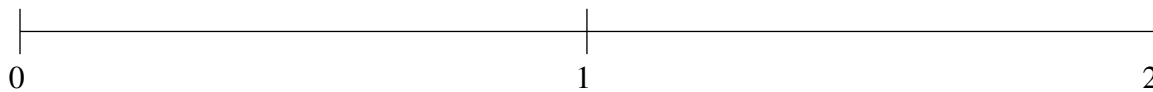
$$1\frac{1}{2}, 1\frac{4}{5}, \frac{12}{25}, \frac{3}{4}, 1\frac{1}{5}$$



$$1\frac{17}{20}, 1\frac{4}{25}, \frac{4}{5}, 1\frac{11}{25}, \frac{2}{5}$$



$$\frac{3}{5}, 1\frac{1}{2}, 1\frac{1}{5}, \frac{1}{5}, 1\frac{3}{4}$$

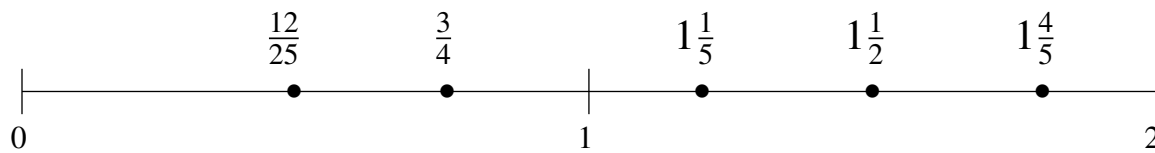


Ordenar Fracciones (D) Respuestas

Ordene cada conjunto de fracciones usando la recta numérica.

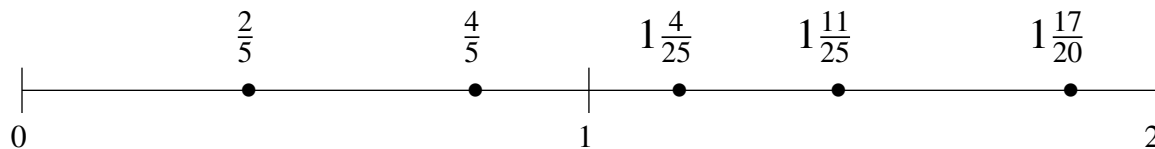
$$1\frac{1}{2}, 1\frac{4}{5}, \frac{12}{25}, \frac{3}{4}, 1\frac{1}{5}$$

$$\frac{12}{25}, \frac{3}{4}, 1\frac{1}{5}, 1\frac{1}{2}, 1\frac{4}{5}$$



$$1\frac{17}{20}, 1\frac{4}{25}, \frac{4}{5}, 1\frac{11}{25}, \frac{2}{5}$$

$$\frac{2}{5}, \frac{4}{5}, 1\frac{4}{25}, 1\frac{11}{25}, 1\frac{17}{20}$$



$$\frac{3}{5}, 1\frac{1}{2}, 1\frac{1}{5}, \frac{1}{5}, 1\frac{3}{4}$$

$$\frac{1}{5}, \frac{3}{5}, 1\frac{1}{5}, 1\frac{1}{2}, 1\frac{3}{4}$$

