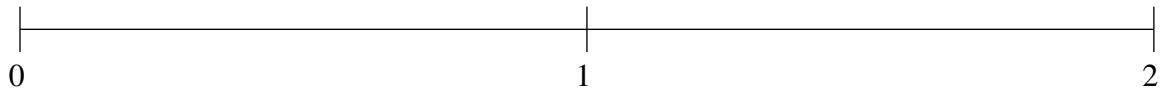


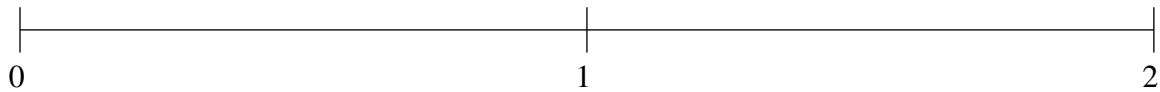
Ordenar Fracciones (E)

Ordene cada conjunto de fracciones usando la recta numérica.

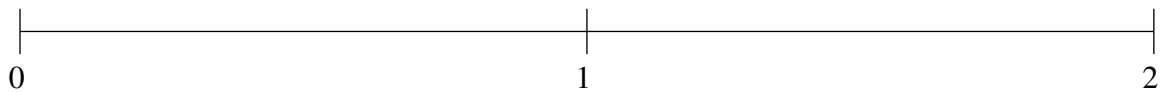
$$\frac{1}{5}, 1\frac{17}{20}, \frac{1}{2}, 1\frac{14}{25}, 1\frac{3}{10}$$



$$1\frac{1}{10}, \frac{4}{5}, \frac{1}{5}, \frac{29}{50}, 1\frac{4}{5}$$



$$\frac{1}{2}, \frac{1}{4}, 1\frac{2}{5}, \frac{3}{4}, 1\frac{3}{4}$$

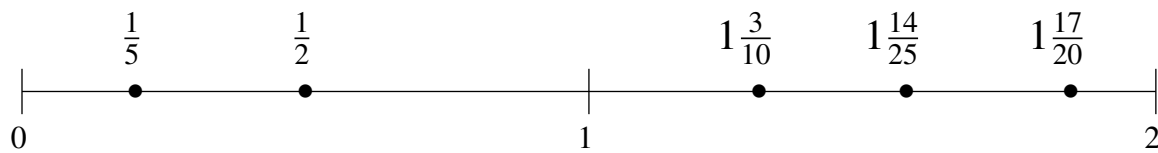


Ordenar Fracciones (E) Respuestas

Ordene cada conjunto de fracciones usando la recta numérica.

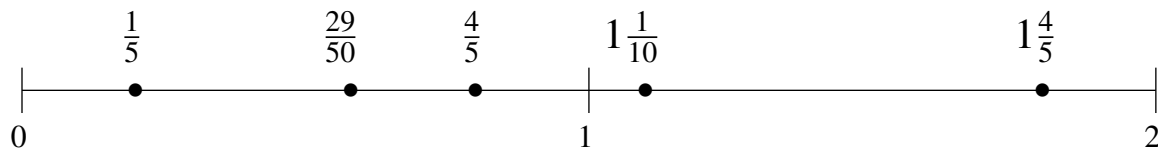
$$\frac{1}{5}, 1\frac{17}{20}, \frac{1}{2}, 1\frac{14}{25}, 1\frac{3}{10}$$

$$\frac{1}{5}, \frac{1}{2}, 1\frac{3}{10}, 1\frac{14}{25}, 1\frac{17}{20}$$



$$1\frac{1}{10}, \frac{4}{5}, \frac{1}{5}, \frac{29}{50}, 1\frac{4}{5}$$

$$\frac{1}{5}, \frac{29}{50}, \frac{4}{5}, 1\frac{1}{10}, 1\frac{4}{5}$$



$$\frac{1}{2}, \frac{1}{4}, 1\frac{2}{5}, \frac{3}{4}, 1\frac{3}{4}$$

$$\frac{1}{4}, \frac{1}{2}, \frac{3}{4}, 1\frac{2}{5}, 1\frac{3}{4}$$

