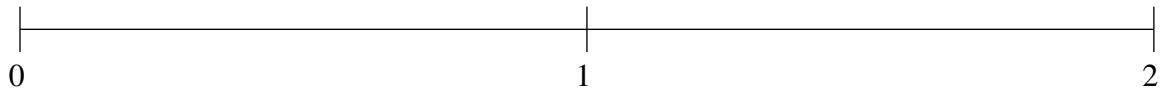


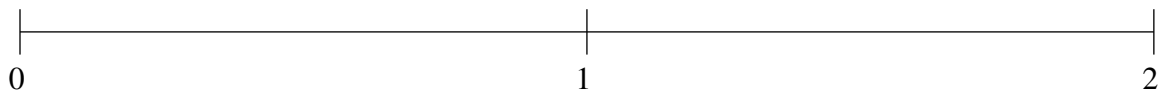
## Ordenar Fracciones (F)

Ordene cada conjunto de fracciones usando la recta numérica.

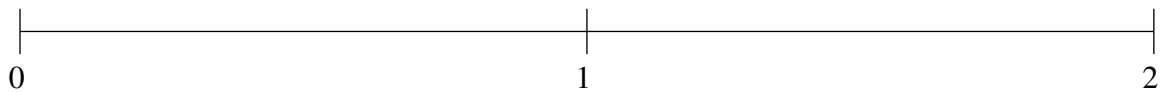
$$1\frac{23}{50}, \frac{9}{50}, 1\frac{17}{20}, 1\frac{1}{5}, \frac{1}{2}$$



$$1\frac{3}{4}, \frac{3}{4}, 1\frac{1}{2}, 1\frac{1}{20}, \frac{1}{2}$$



$$\frac{1}{5}, 1\frac{4}{5}, 1\frac{1}{2}, 1\frac{1}{4}, \frac{1}{2}$$

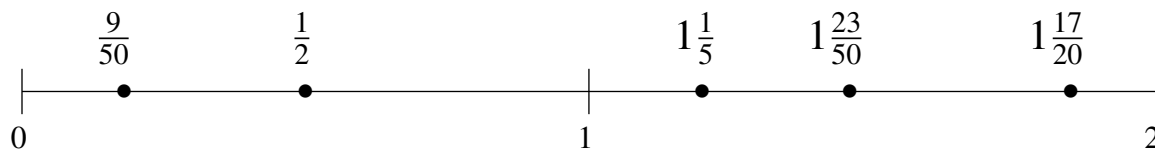


## Ordenar Fracciones (F) Respuestas

Ordene cada conjunto de fracciones usando la recta numérica.

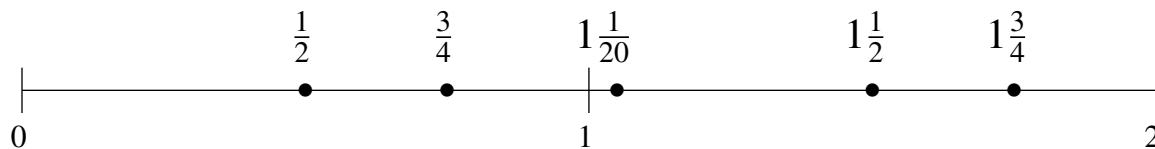
$$1\frac{23}{50}, \frac{9}{50}, 1\frac{17}{20}, 1\frac{1}{5}, \frac{1}{2}$$

$$\frac{9}{50}, \frac{1}{2}, 1\frac{1}{5}, 1\frac{23}{50}, 1\frac{17}{20}$$



$$1\frac{3}{4}, \frac{3}{4}, 1\frac{1}{2}, 1\frac{1}{20}, \frac{1}{2}$$

$$\frac{1}{2}, \frac{3}{4}, 1\frac{1}{20}, 1\frac{1}{2}, 1\frac{3}{4}$$



$$\frac{1}{5}, 1\frac{4}{5}, 1\frac{1}{2}, 1\frac{1}{4}, \frac{1}{2}$$

$$\frac{1}{5}, \frac{1}{2}, 1\frac{1}{4}, 1\frac{1}{2}, 1\frac{4}{5}$$

