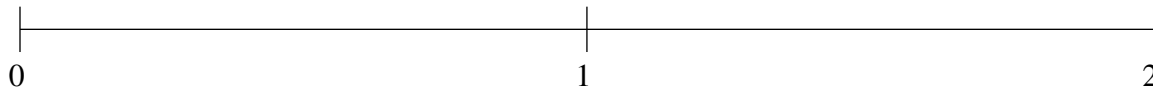


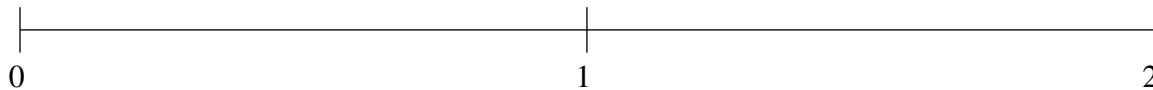
Ordenar Fracciones (H)

Ordene cada conjunto de fracciones usando la recta numérica.

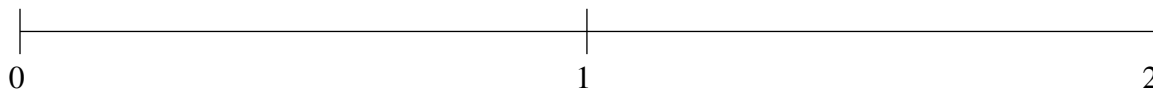
$$1\frac{1}{2}, \frac{3}{20}, 1\frac{1}{5}, 1\frac{3}{4}, \frac{3}{4}$$



$$1\frac{3}{4}, 1\frac{1}{2}, \frac{3}{5}, 1\frac{1}{4}, \frac{1}{50}$$



$$1\frac{7}{10}, \frac{3}{4}, \frac{1}{4}, 1\frac{9}{20}, \frac{1}{2}$$

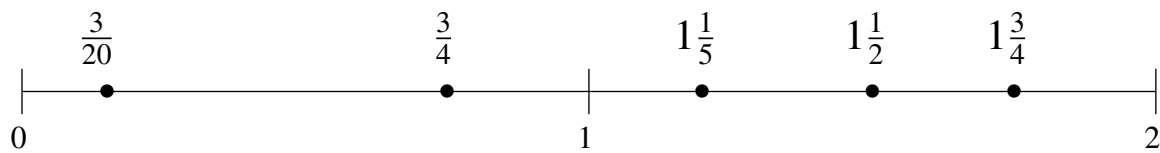


Ordenar Fracciones (H) Respuestas

Ordene cada conjunto de fracciones usando la recta numérica.

$$1\frac{1}{2}, \frac{3}{20}, 1\frac{1}{5}, 1\frac{3}{4}, \frac{3}{4}$$

$$\frac{3}{20}, \frac{3}{4}, 1\frac{1}{5}, 1\frac{1}{2}, 1\frac{3}{4}$$



$$1\frac{3}{4}, 1\frac{1}{2}, \frac{3}{5}, 1\frac{1}{4}, \frac{1}{50}$$

$$\frac{1}{50}, \frac{3}{5}, 1\frac{1}{4}, 1\frac{1}{2}, 1\frac{3}{4}$$



$$1\frac{7}{10}, \frac{3}{4}, \frac{1}{4}, 1\frac{9}{20}, \frac{1}{2}$$

$$\frac{1}{4}, \frac{1}{2}, \frac{3}{4}, 1\frac{9}{20}, 1\frac{7}{10}$$

