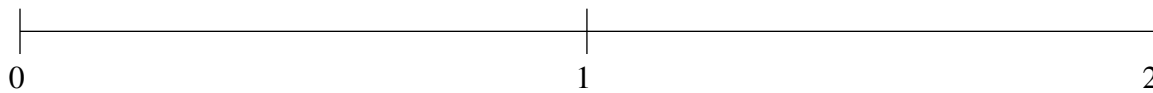


Ordenar Fracciones (I)

Ordene cada conjunto de fracciones usando la recta numérica.

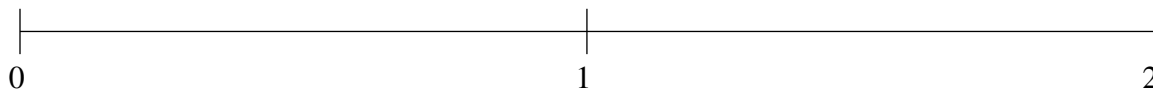
$$\frac{1}{5}, 1\frac{4}{5}, 1\frac{1}{2}, \frac{3}{4}, \frac{12}{25}$$



$$\frac{1}{5}, \frac{4}{5}, 1\frac{3}{4}, 1\frac{1}{2}, \frac{1}{2}$$



$$\frac{1}{5}, 1\frac{1}{2}, 1\frac{3}{20}, \frac{1}{2}, 1\frac{3}{4}$$

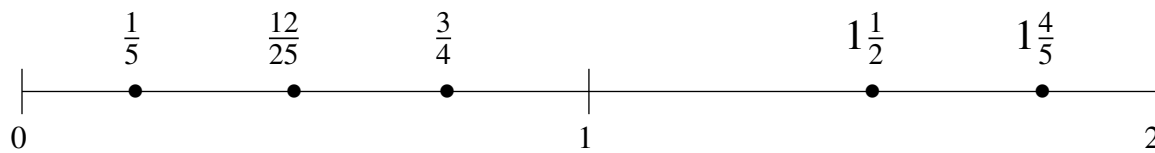


Ordenar Fracciones (I) Respuestas

Ordene cada conjunto de fracciones usando la recta numérica.

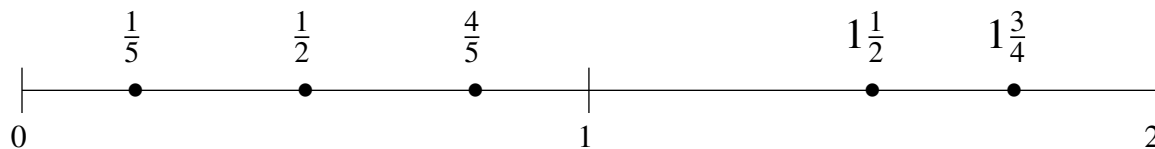
$$\frac{1}{5}, 1\frac{4}{5}, 1\frac{1}{2}, \frac{3}{4}, \frac{12}{25}$$

$$\frac{1}{5}, \frac{12}{25}, \frac{3}{4}, 1\frac{1}{2}, 1\frac{4}{5}$$



$$\frac{1}{5}, \frac{4}{5}, 1\frac{3}{4}, 1\frac{1}{2}, \frac{1}{2}$$

$$\frac{1}{5}, \frac{1}{2}, \frac{4}{5}, 1\frac{1}{2}, 1\frac{3}{4}$$



$$\frac{1}{5}, 1\frac{1}{2}, 1\frac{3}{20}, \frac{1}{2}, 1\frac{3}{4}$$

$$\frac{1}{5}, \frac{1}{2}, 1\frac{3}{20}, 1\frac{1}{2}, 1\frac{3}{4}$$

